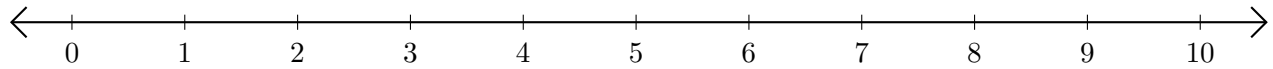


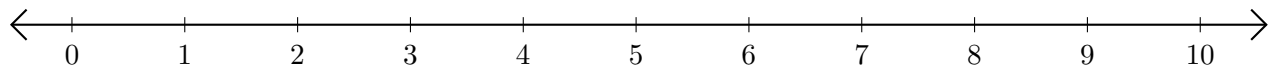
Sumar en Rectas Numéricas (A)

Use las rectas numéricas para calcular cada suma.

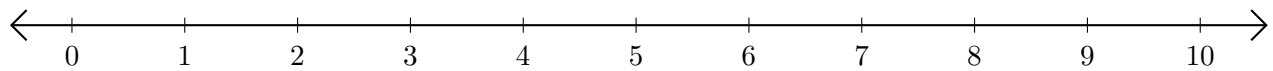
1. $2 + 4 = \underline{\quad}$



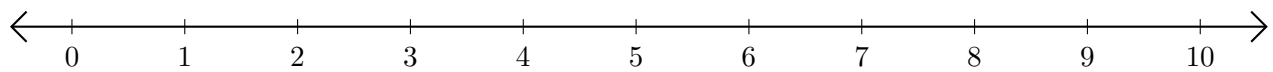
2. $1 + 7 = \underline{\quad}$



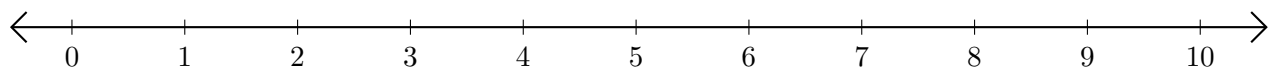
3. $9 + 1 = \underline{\quad}$



4. $3 + 6 = \underline{\quad}$



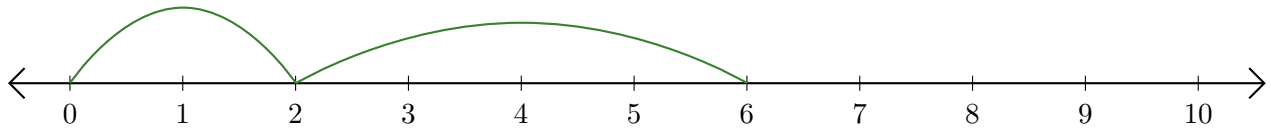
5. $5 + 3 = \underline{\quad}$



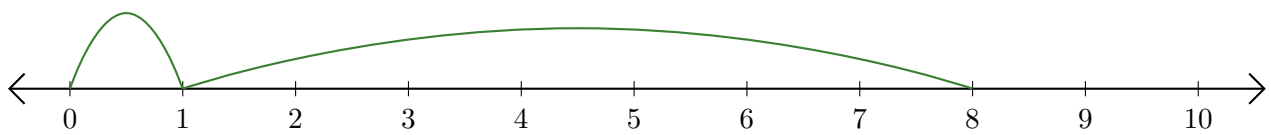
Sumar en Rectas Numéricas (A) Respuestas

Use las rectas numéricas para calcular cada suma.

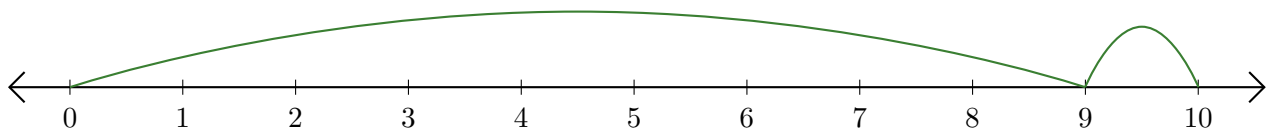
1. $2 + 4 = \underline{6}$



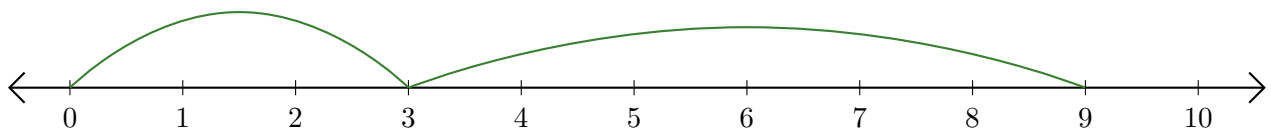
2. $1 + 7 = \underline{8}$



3. $9 + 1 = \underline{10}$



4. $3 + 6 = \underline{9}$



5. $5 + 3 = \underline{8}$

