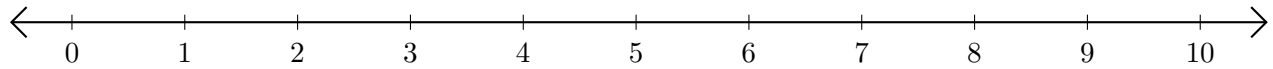


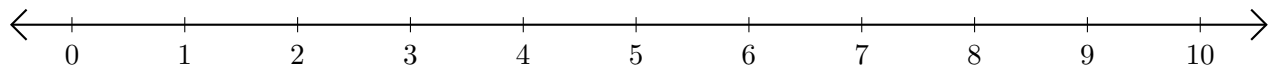
Sumar en Rectas Numéricas (F)

Use las rectas numéricas para calcular cada suma.

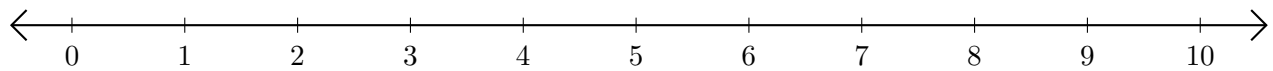
1. $8 + 1 = \underline{\quad}$



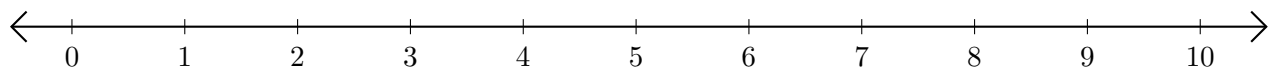
2. $5 + 5 = \underline{\quad}$



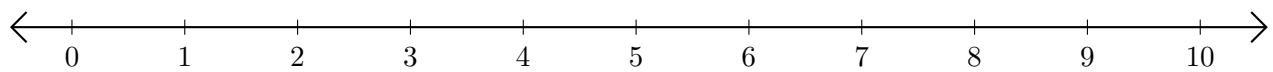
3. $7 + 3 = \underline{\quad}$



4. $4 + 1 = \underline{\quad}$



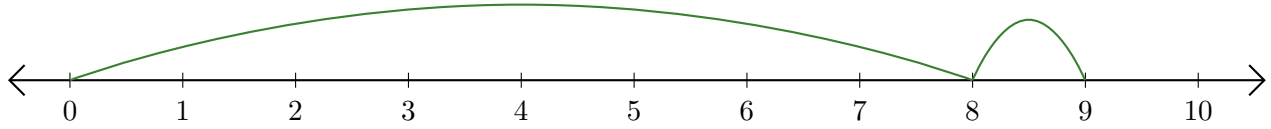
5. $1 + 5 = \underline{\quad}$



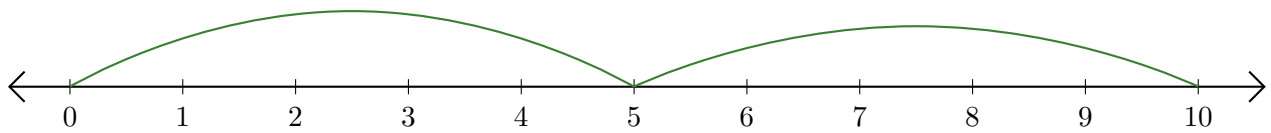
Sumar en Rectas Numéricas (F) Respuestas

Use las rectas numéricas para calcular cada suma.

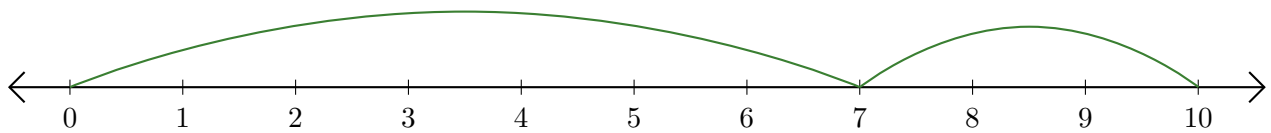
1. $8 + 1 = \underline{9}$



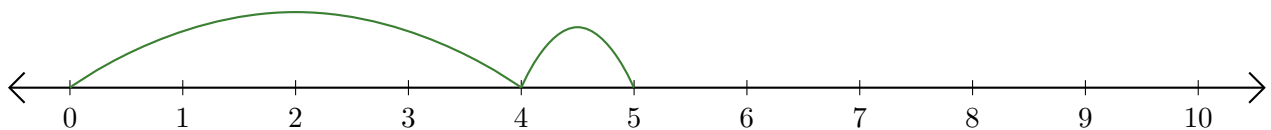
2. $5 + 5 = \underline{10}$



3. $7 + 3 = \underline{10}$



4. $4 + 1 = \underline{5}$



5. $1 + 5 = \underline{6}$

