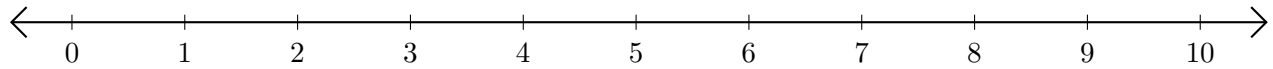


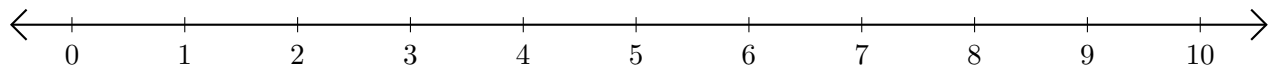
# Sumar en Rectas Numéricas (H)

Use las rectas numéricas para calcular cada suma.

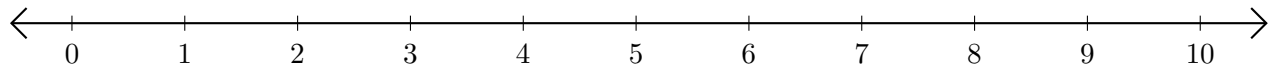
1.  $4 + 6 = \underline{\quad}$



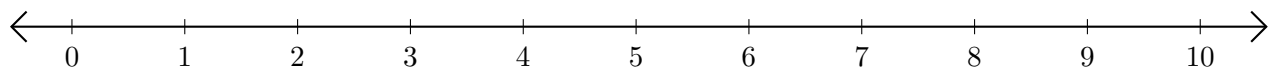
2.  $1 + 4 = \underline{\quad}$



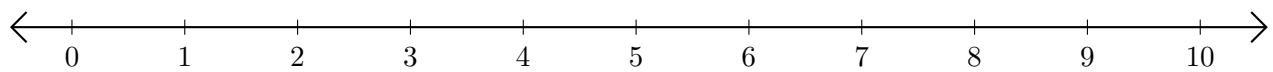
3.  $3 + 1 = \underline{\quad}$



4.  $9 + 1 = \underline{\quad}$



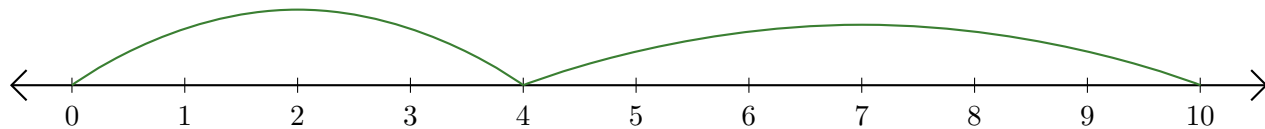
5.  $6 + 4 = \underline{\quad}$



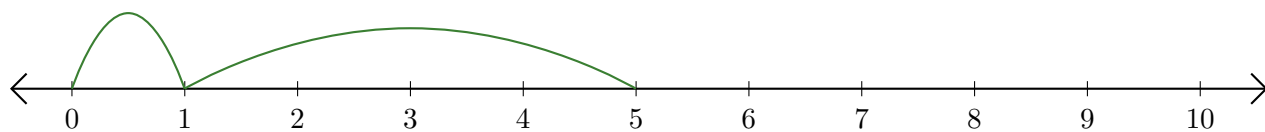
# Sumar en Rectas Numéricas (H) Respuestas

Use las rectas numéricas para calcular cada suma.

1.  $4 + 6 = \underline{10}$



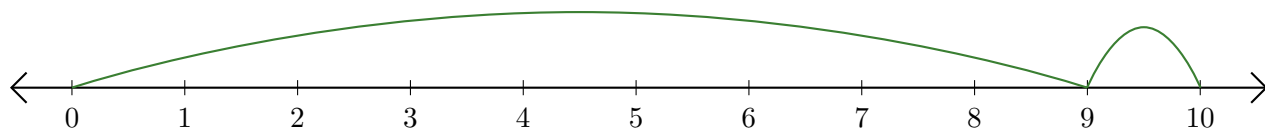
2.  $1 + 4 = \underline{5}$



3.  $3 + 1 = \underline{4}$



4.  $9 + 1 = \underline{10}$



5.  $6 + 4 = \underline{10}$

