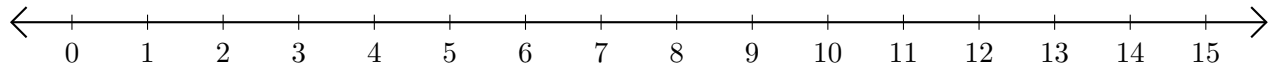


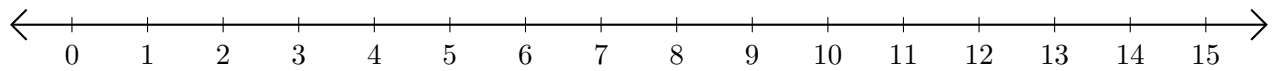
Sumar en Rectas Numéricas (A)

Use las rectas numéricas para calcular cada suma.

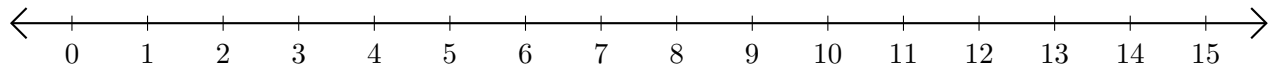
1. $7 + 7 = \underline{\quad}$



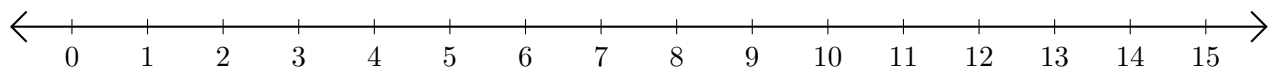
2. $11 + 3 = \underline{\quad}$



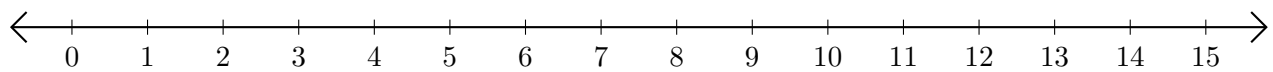
3. $5 + 1 = \underline{\quad}$



4. $12 + 3 = \underline{\quad}$



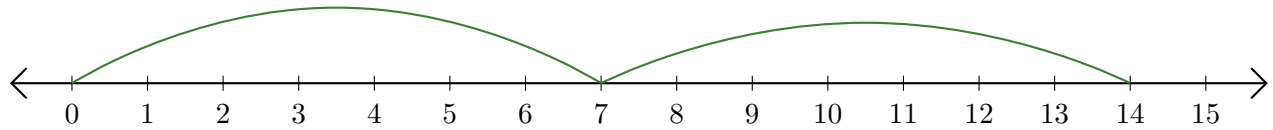
5. $10 + 1 = \underline{\quad}$



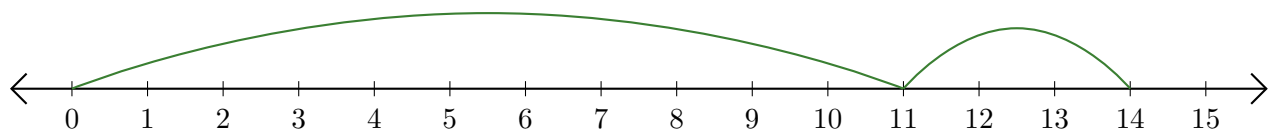
Sumar en Rectas Numéricas (A) Respuestas

Use las rectas numéricas para calcular cada suma.

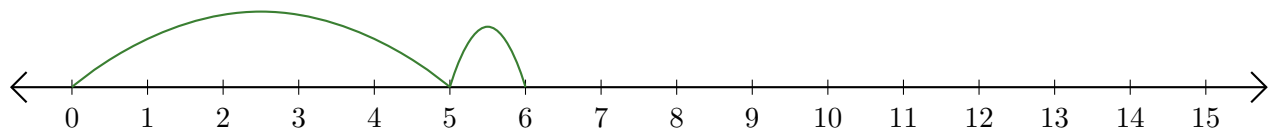
1. $7 + 7 = \underline{14}$



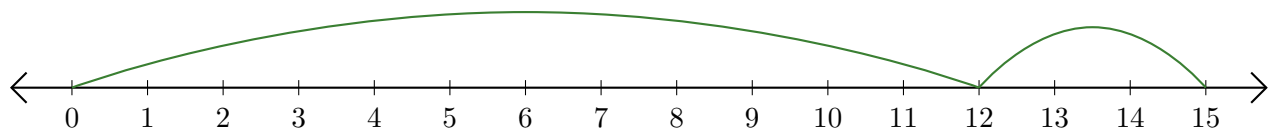
2. $11 + 3 = \underline{14}$



3. $5 + 1 = \underline{6}$



4. $12 + 3 = \underline{15}$



5. $10 + 1 = \underline{11}$

