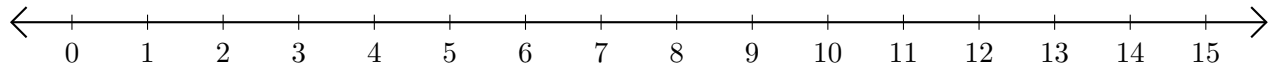


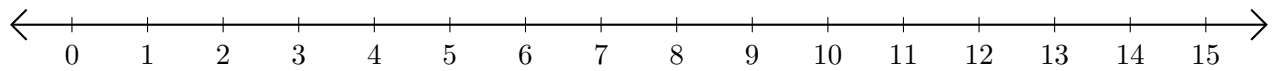
## Sumar en Rectas Numéricas (B)

Use las rectas numéricas para calcular cada suma.

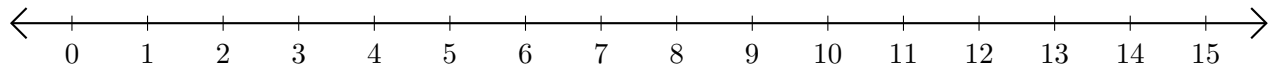
1.  $13 + 1 = \underline{\quad}$



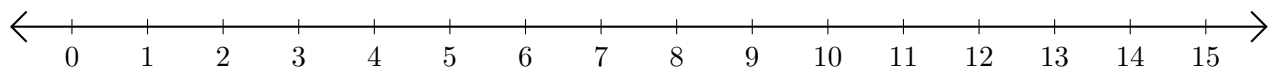
2.  $2 + 8 = \underline{\quad}$



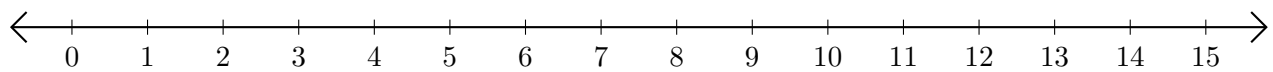
3.  $3 + 3 = \underline{\quad}$



4.  $11 + 1 = \underline{\quad}$



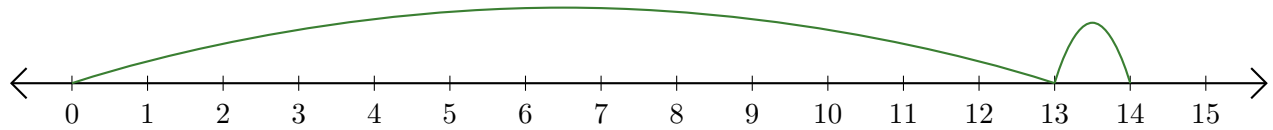
5.  $6 + 7 = \underline{\quad}$



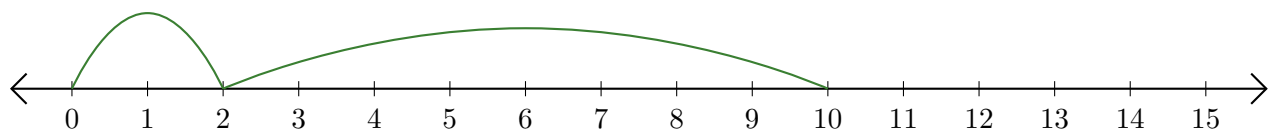
# Sumar en Rectas Numéricas (B) Respuestas

Use las rectas numéricas para calcular cada suma.

1.  $13 + 1 = \underline{14}$



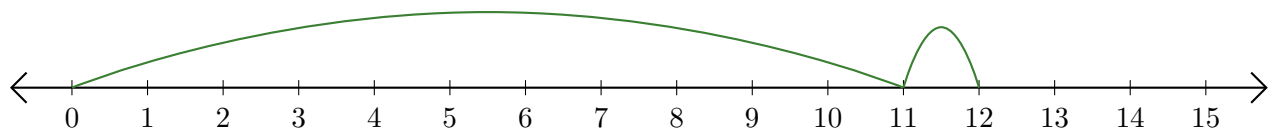
2.  $2 + 8 = \underline{10}$



3.  $3 + 3 = \underline{6}$



4.  $11 + 1 = \underline{12}$



5.  $6 + 7 = \underline{13}$

