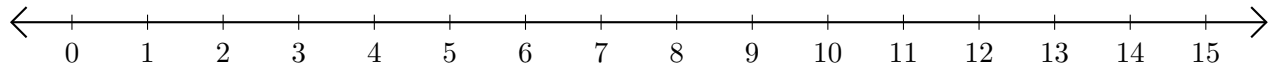


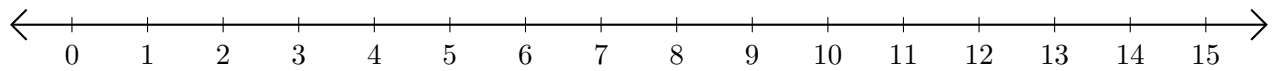
## Sumar en Rectas Numéricas (C)

Use las rectas numéricas para calcular cada suma.

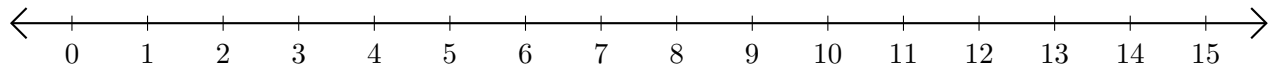
1.  $7 + 1 = \underline{\quad}$



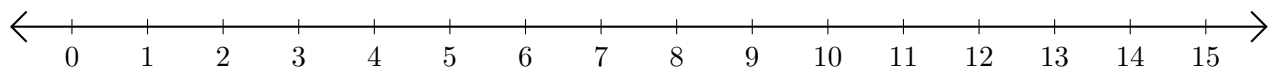
2.  $14 + 1 = \underline{\quad}$



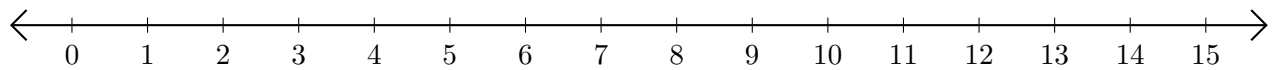
3.  $5 + 3 = \underline{\quad}$



4.  $2 + 8 = \underline{\quad}$



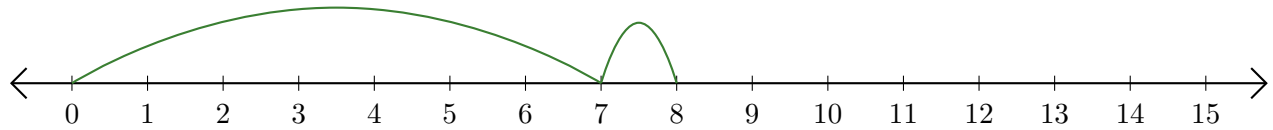
5.  $3 + 11 = \underline{\quad}$



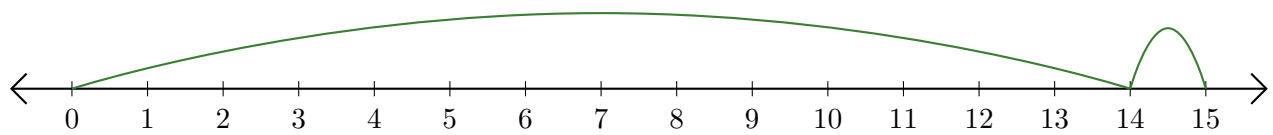
# Sumar en Rectas Numéricas (C) Respuestas

Use las rectas numéricas para calcular cada suma.

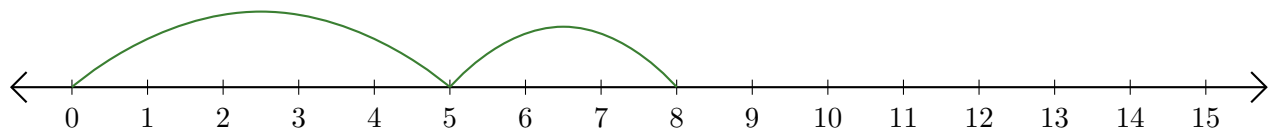
1.  $7 + 1 = \underline{8}$



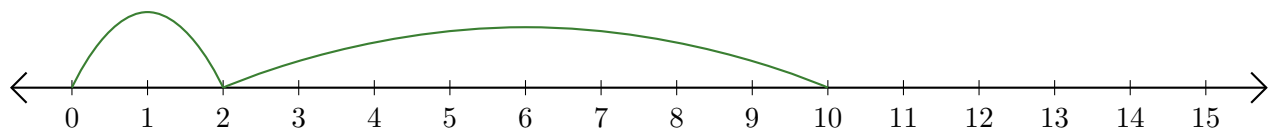
2.  $14 + 1 = \underline{15}$



3.  $5 + 3 = \underline{8}$



4.  $2 + 8 = \underline{10}$



5.  $3 + 11 = \underline{14}$

