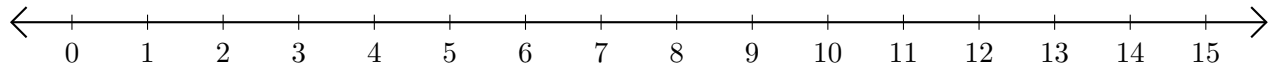


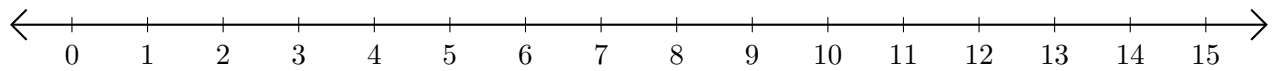
## Sumar en Rectas Numéricas (D)

Use las rectas numéricas para calcular cada suma.

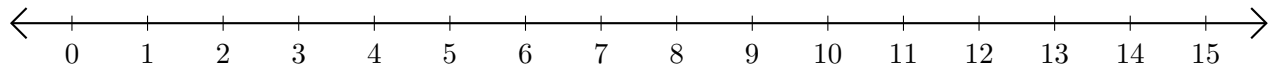
1.  $12 + 1 = \underline{\quad}$



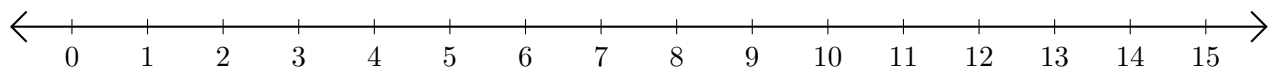
2.  $3 + 12 = \underline{\quad}$



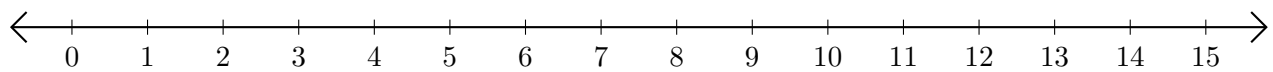
3.  $8 + 5 = \underline{\quad}$



4.  $4 + 8 = \underline{\quad}$



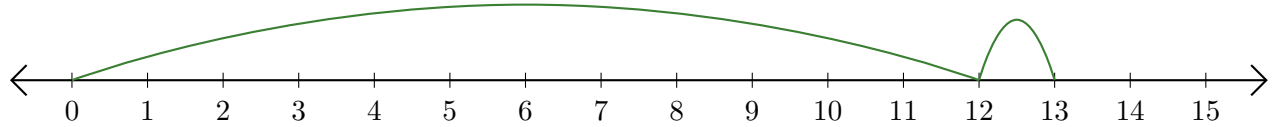
5.  $7 + 8 = \underline{\quad}$



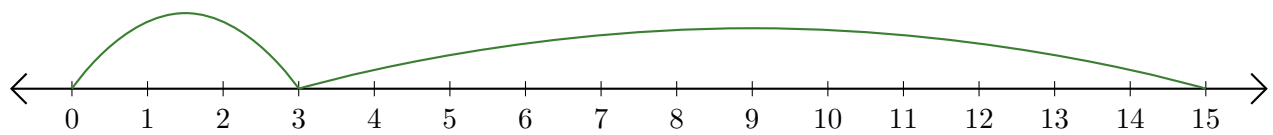
# Sumar en Rectas Numéricas (D) Respuestas

Use las rectas numéricas para calcular cada suma.

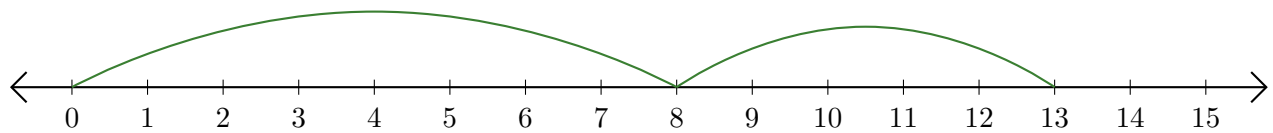
1.  $12 + 1 = \underline{13}$



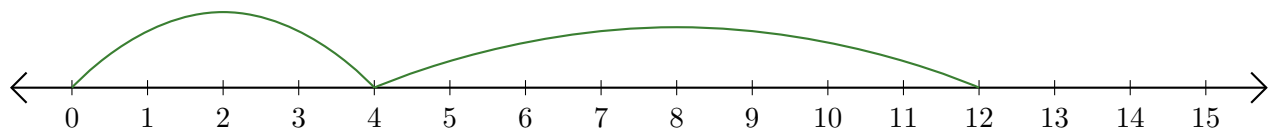
2.  $3 + 12 = \underline{15}$



3.  $8 + 5 = \underline{13}$



4.  $4 + 8 = \underline{12}$



5.  $7 + 8 = \underline{15}$

