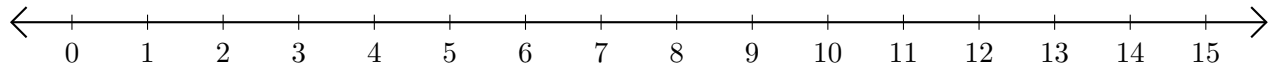


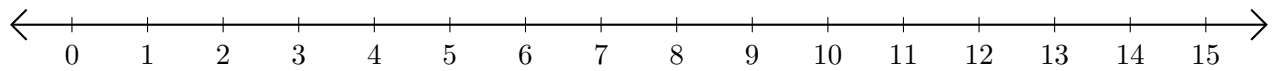
Sumar en Rectas Numéricas (E)

Use las rectas numéricas para calcular cada suma.

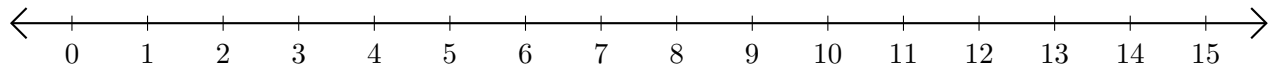
1. $10 + 1 = \underline{\quad}$



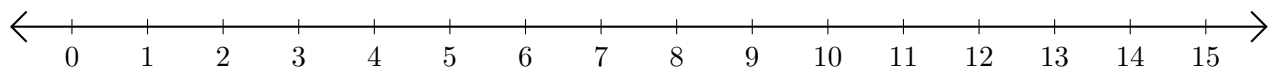
2. $5 + 7 = \underline{\quad}$



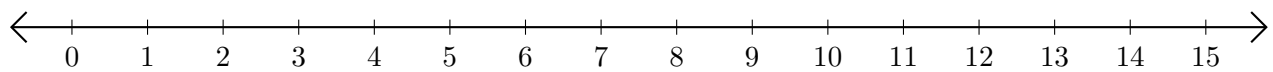
3. $3 + 4 = \underline{\quad}$



4. $7 + 5 = \underline{\quad}$



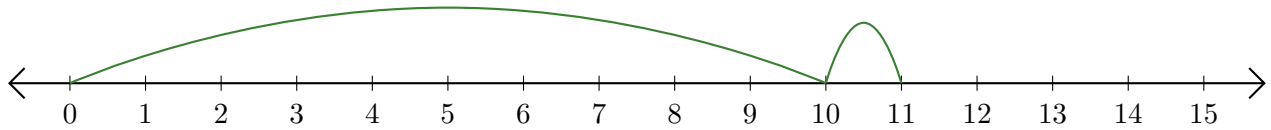
5. $12 + 3 = \underline{\quad}$



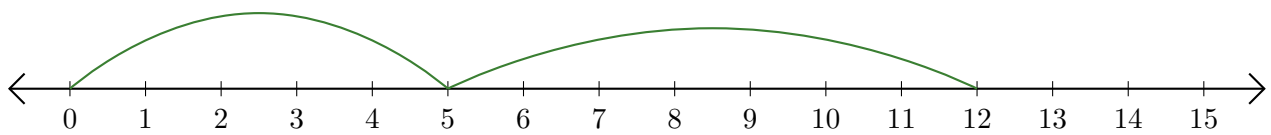
Sumar en Rectas Numéricas (E) Respuestas

Use las rectas numéricas para calcular cada suma.

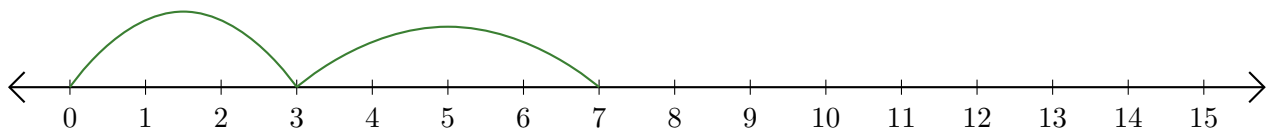
1. $10 + 1 = \underline{11}$



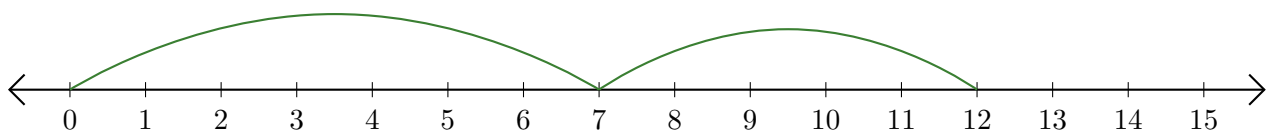
2. $5 + 7 = \underline{12}$



3. $3 + 4 = \underline{7}$



4. $7 + 5 = \underline{12}$



5. $12 + 3 = \underline{15}$

