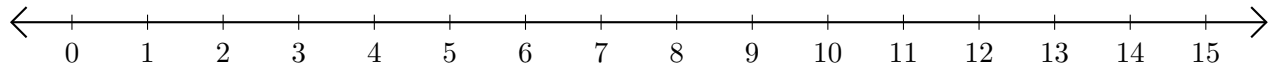


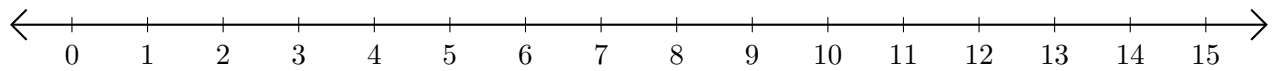
# Sumar en Rectas Numéricas (G)

Use las rectas numéricas para calcular cada suma.

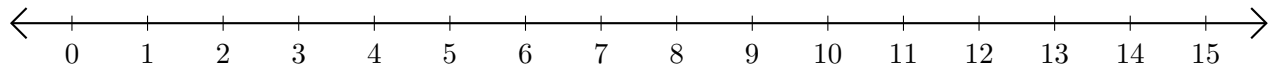
1.  $1 + 9 = \underline{\quad}$



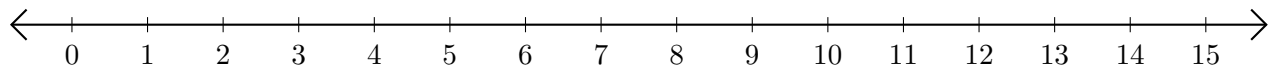
2.  $6 + 7 = \underline{\quad}$



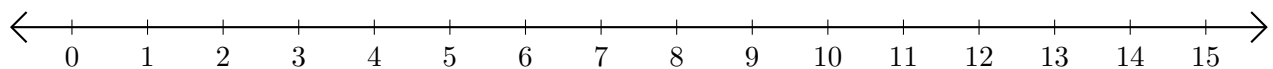
3.  $10 + 2 = \underline{\quad}$



4.  $12 + 3 = \underline{\quad}$



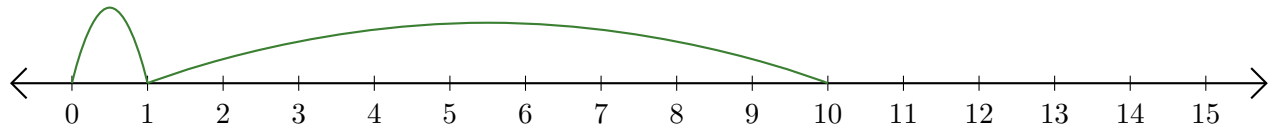
5.  $4 + 1 = \underline{\quad}$



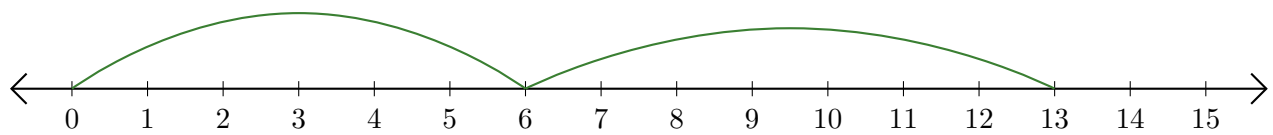
# Sumar en Rectas Numéricas (G) Respuestas

Use las rectas numéricas para calcular cada suma.

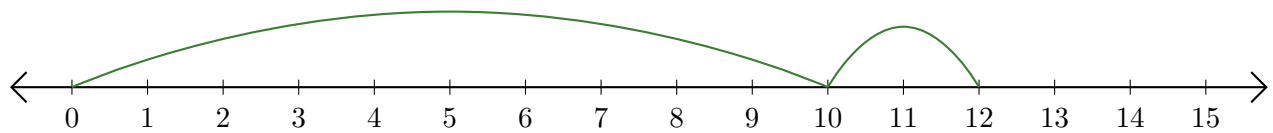
1.  $1 + 9 = \underline{10}$



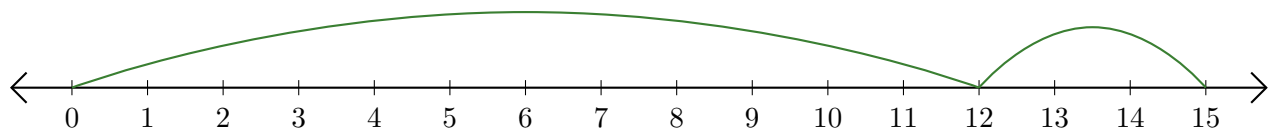
2.  $6 + 7 = \underline{13}$



3.  $10 + 2 = \underline{12}$



4.  $12 + 3 = \underline{15}$



5.  $4 + 1 = \underline{5}$

