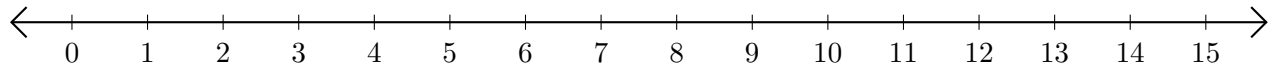


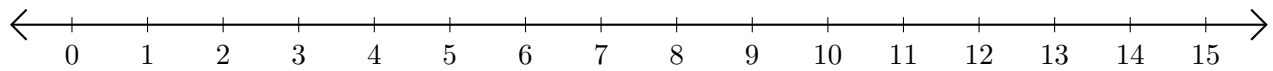
Sumar en Rectas Numéricas (H)

Use las rectas numéricas para calcular cada suma.

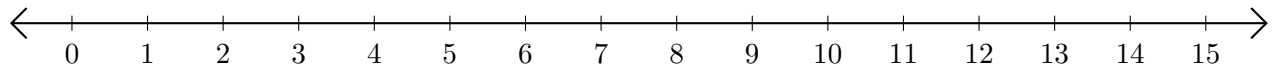
1. $11 + 4 = \underline{\quad}$



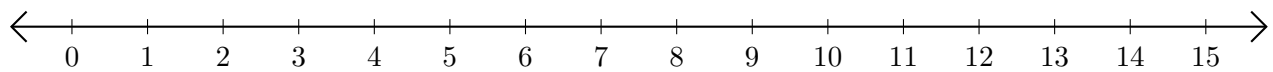
2. $14 + 1 = \underline{\quad}$



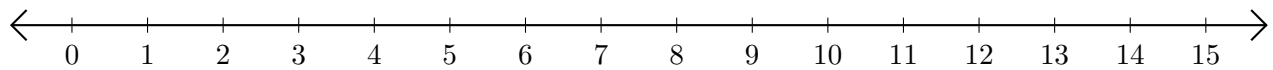
3. $2 + 13 = \underline{\quad}$



4. $12 + 2 = \underline{\quad}$



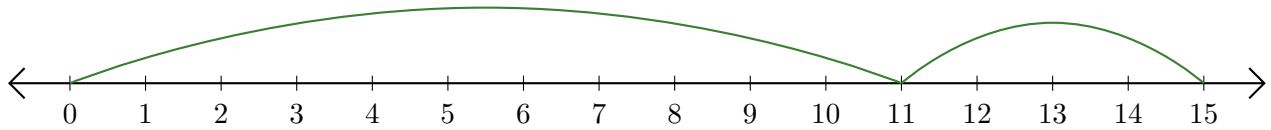
5. $9 + 6 = \underline{\quad}$



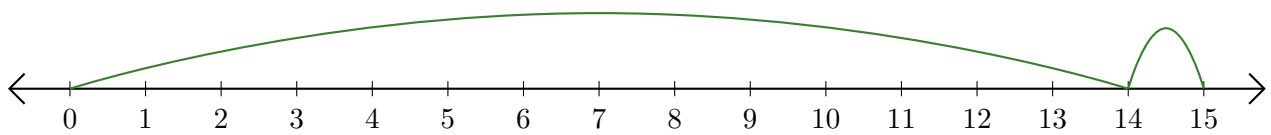
Sumar en Rectas Numéricas (H) Respuestas

Use las rectas numéricas para calcular cada suma.

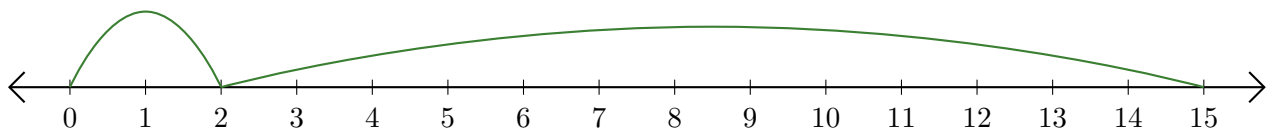
1. $11 + 4 = \underline{15}$



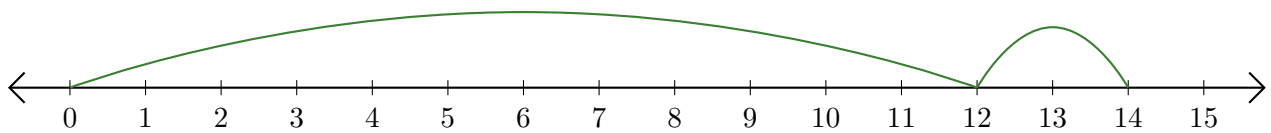
2. $14 + 1 = \underline{15}$



3. $2 + 13 = \underline{15}$



4. $12 + 2 = \underline{14}$



5. $9 + 6 = \underline{15}$

