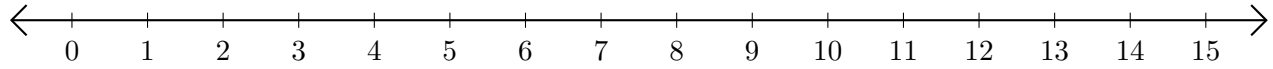


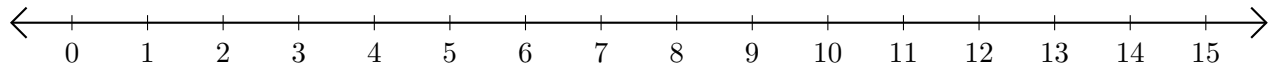
Sumar en Rectas Numéricas (I)

Use las rectas numéricas para calcular cada suma.

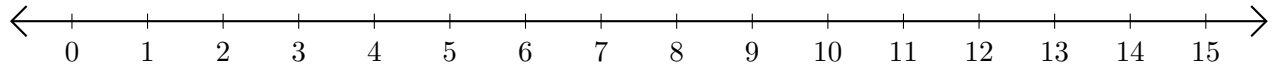
1. $11 + 4 = \underline{\quad}$



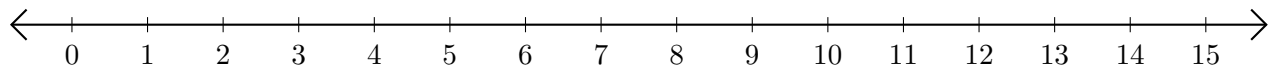
2. $12 + 3 = \underline{\quad}$



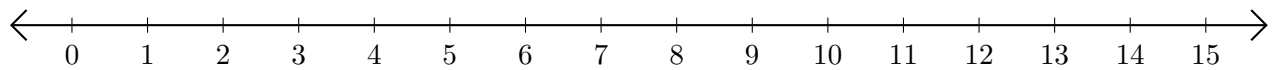
3. $3 + 10 = \underline{\quad}$



4. $10 + 3 = \underline{\quad}$



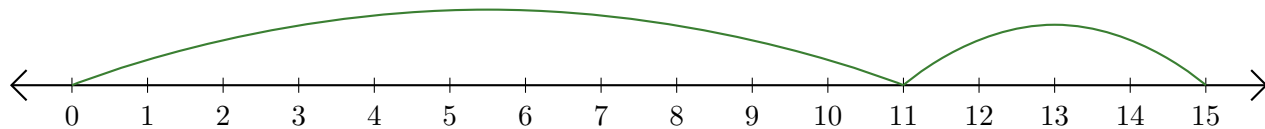
5. $5 + 8 = \underline{\quad}$



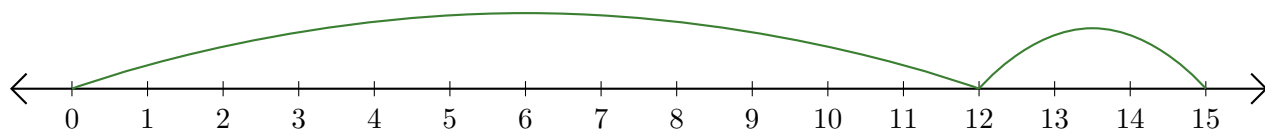
Sumar en Rectas Numéricas (I) Respuestas

Use las rectas numéricas para calcular cada suma.

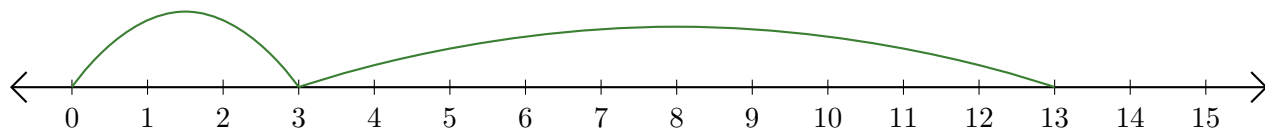
1. $11 + 4 = \underline{15}$



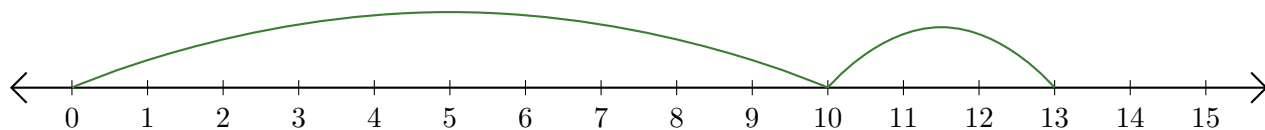
2. $12 + 3 = \underline{15}$



3. $3 + 10 = \underline{13}$



4. $10 + 3 = \underline{13}$



5. $5 + 8 = \underline{13}$

