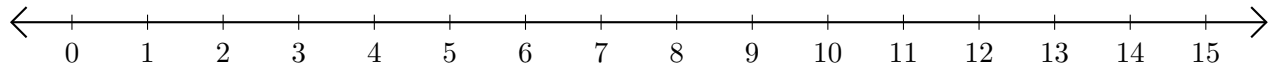


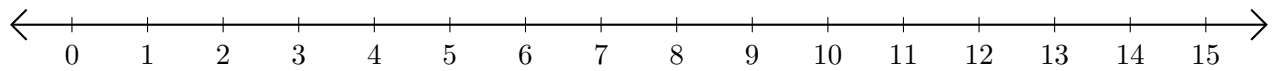
Sumar en Rectas Numéricas (J)

Use las rectas numéricas para calcular cada suma.

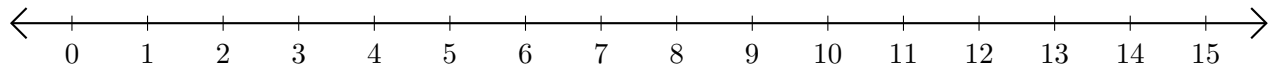
1. $1 + 8 = \underline{\quad}$



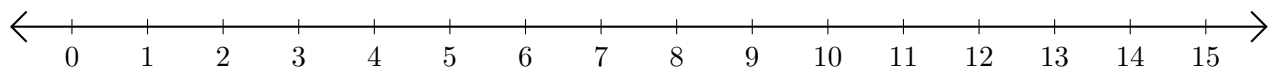
2. $11 + 2 = \underline{\quad}$



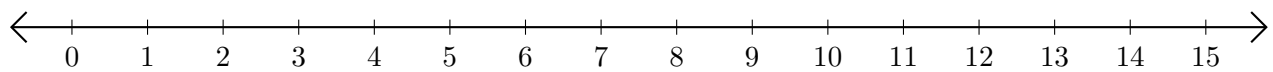
3. $5 + 2 = \underline{\quad}$



4. $14 + 1 = \underline{\quad}$



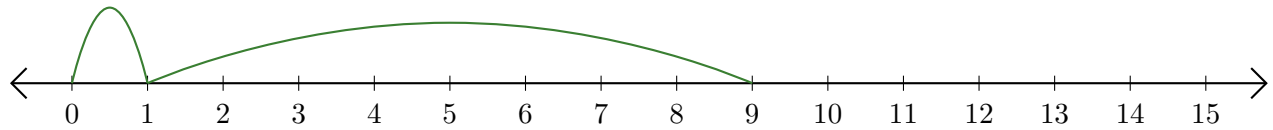
5. $13 + 2 = \underline{\quad}$



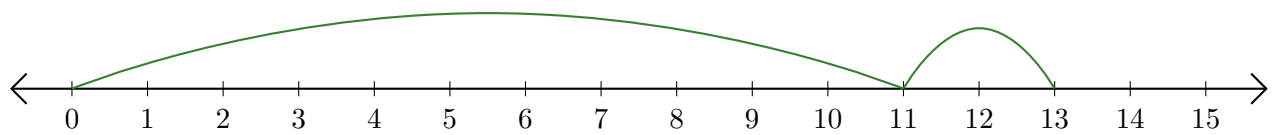
Sumar en Rectas Numéricas (J) Respuestas

Use las rectas numéricas para calcular cada suma.

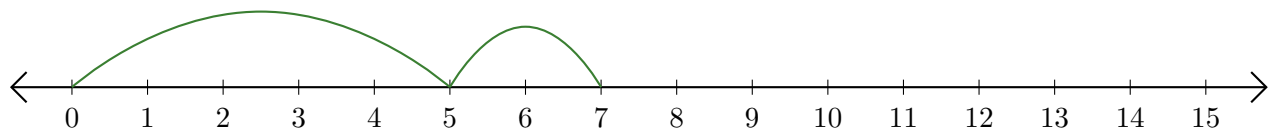
1. $1 + 8 = \underline{9}$



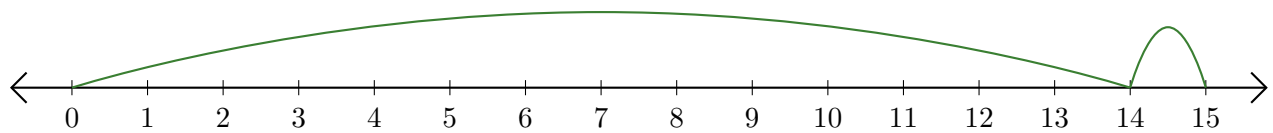
2. $11 + 2 = \underline{13}$



3. $5 + 2 = \underline{7}$



4. $14 + 1 = \underline{15}$



5. $13 + 2 = \underline{15}$

