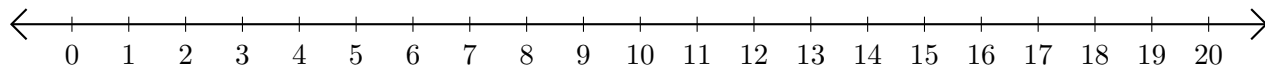


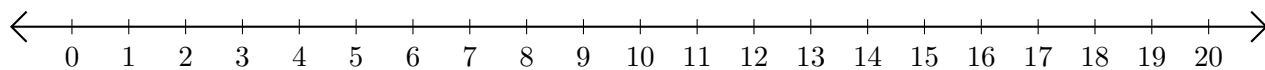
# Sumar en Rectas Numéricas (E)

Use las rectas numéricas para calcular cada suma.

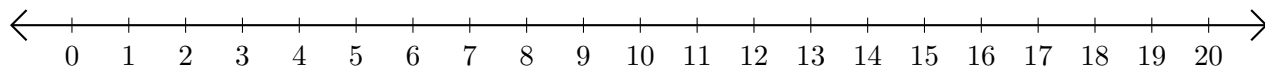
1.  $12 + 4 = \underline{\quad}$



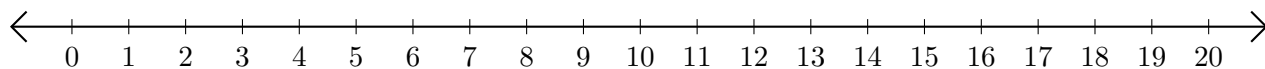
2.  $13 + 6 = \underline{\quad}$



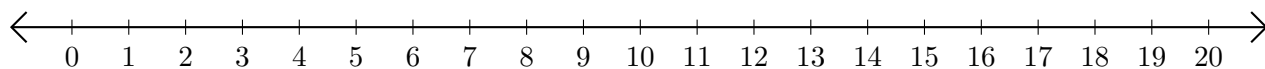
3.  $10 + 6 = \underline{\quad}$



4.  $18 + 2 = \underline{\quad}$



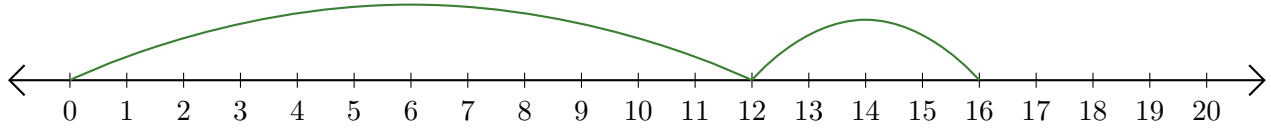
5.  $14 + 3 = \underline{\quad}$



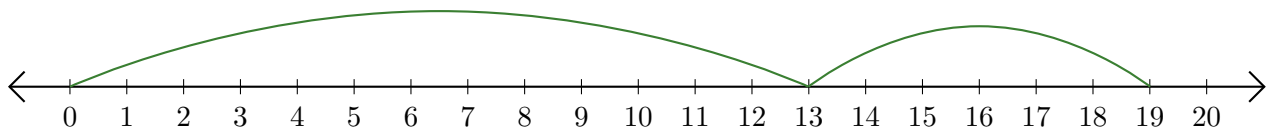
# Sumar en Rectas Numéricas (E) Respuestas

Use las rectas numéricas para calcular cada suma.

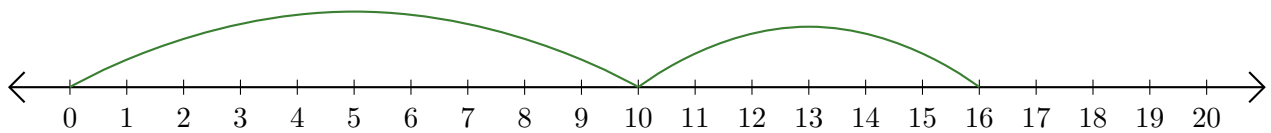
1.  $12 + 4 = \underline{16}$



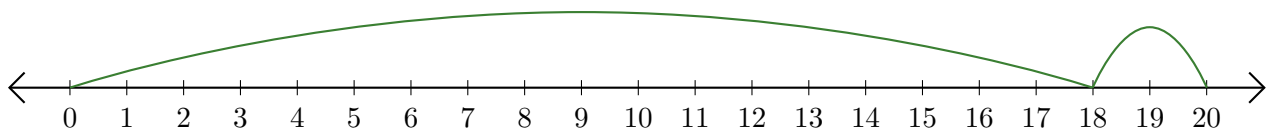
2.  $13 + 6 = \underline{19}$



3.  $10 + 6 = \underline{16}$



4.  $18 + 2 = \underline{20}$



5.  $14 + 3 = \underline{17}$

