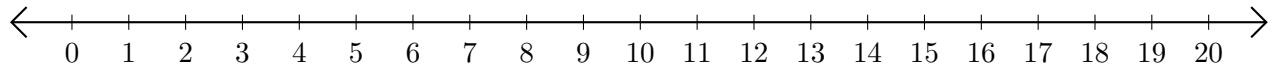


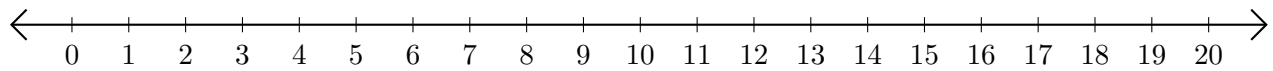
Sumar en Rectas Numéricas (G)

Use las rectas numéricas para calcular cada suma.

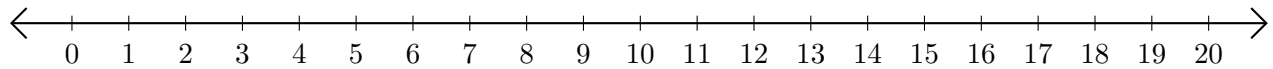
1. $1 + 15 = \underline{\quad}$



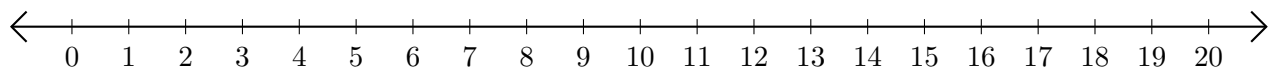
2. $10 + 9 = \underline{\quad}$



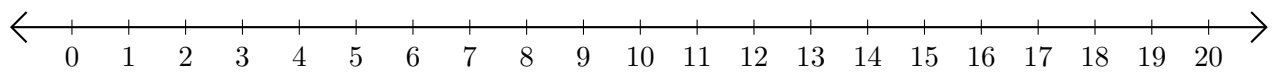
3. $13 + 7 = \underline{\quad}$



4. $9 + 4 = \underline{\quad}$



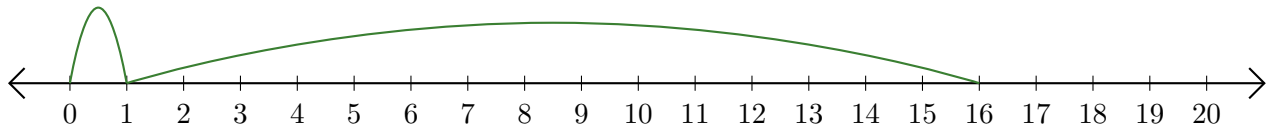
5. $5 + 9 = \underline{\quad}$



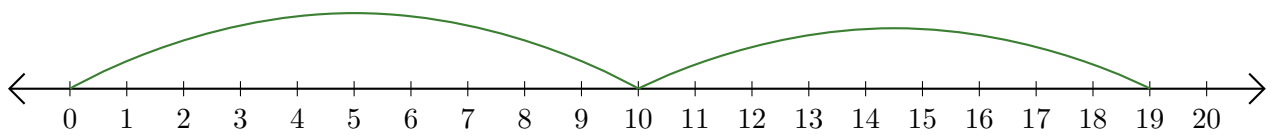
Sumar en Rectas Numéricas (G) Respuestas

Use las rectas numéricas para calcular cada suma.

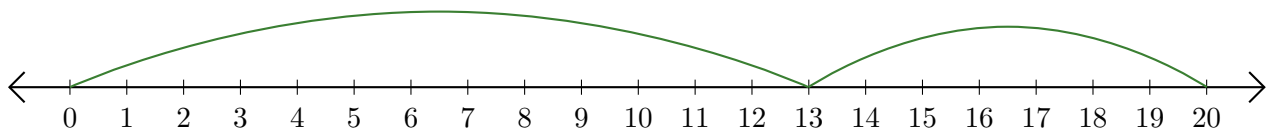
1. $1 + 15 = \underline{16}$



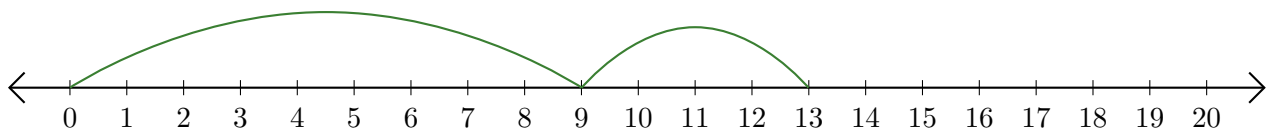
2. $10 + 9 = \underline{19}$



3. $13 + 7 = \underline{20}$



4. $9 + 4 = \underline{13}$



5. $5 + 9 = \underline{14}$

