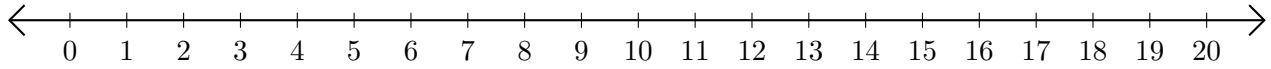


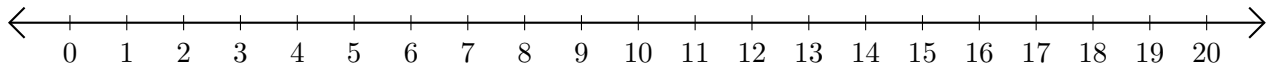
# Sumar en Rectas Numéricas (H)

Use las rectas numéricas para calcular cada suma.

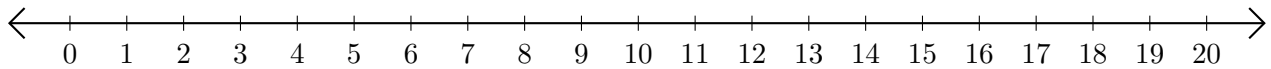
1.  $7 + 13 = \underline{\quad}$



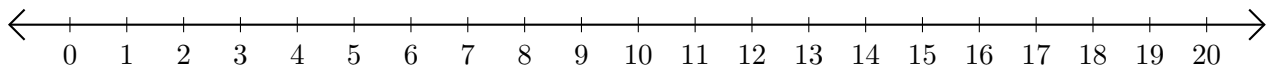
2.  $10 + 9 = \underline{\quad}$



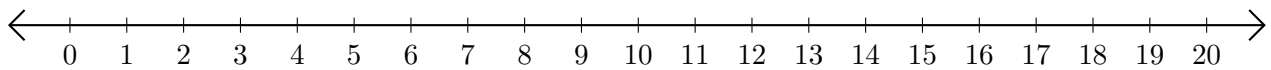
3.  $19 + 1 = \underline{\quad}$



4.  $3 + 10 = \underline{\quad}$



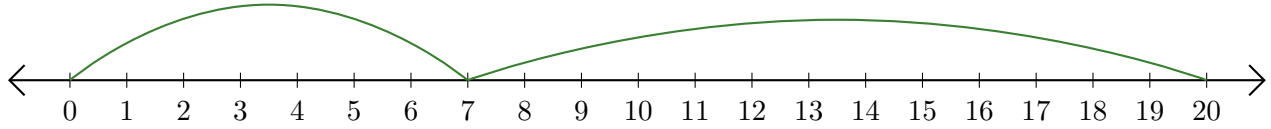
5.  $4 + 12 = \underline{\quad}$



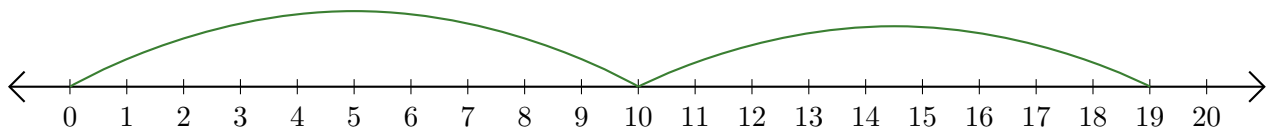
# Sumar en Rectas Numéricas (H) Respuestas

Use las rectas numéricas para calcular cada suma.

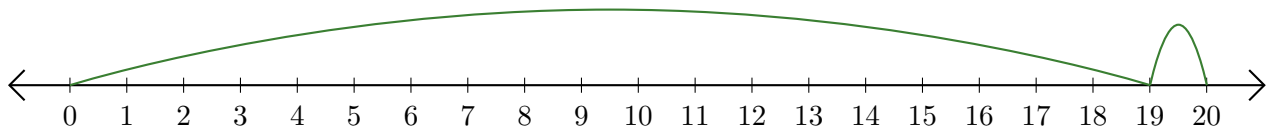
1.  $7 + 13 = \underline{20}$



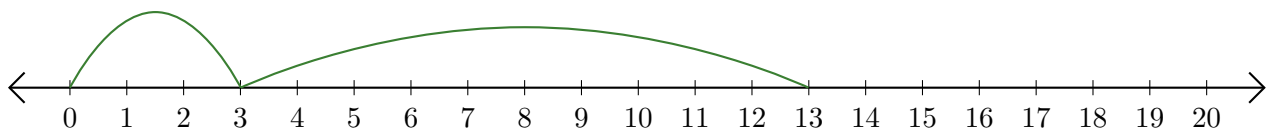
2.  $10 + 9 = \underline{19}$



3.  $19 + 1 = \underline{20}$



4.  $3 + 10 = \underline{13}$



5.  $4 + 12 = \underline{16}$

