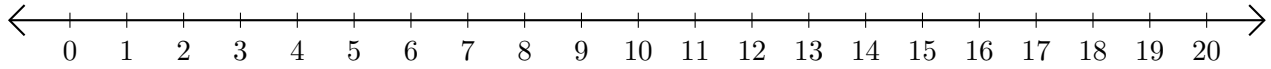


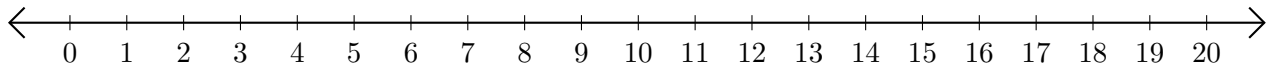
Sumar en Rectas Numéricas (I)

Use las rectas numéricas para calcular cada suma.

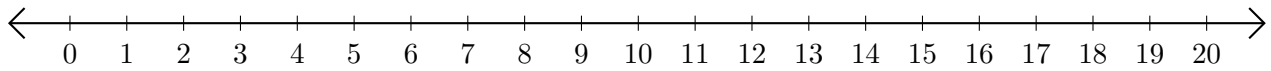
1. $17 + 2 = \underline{\quad}$



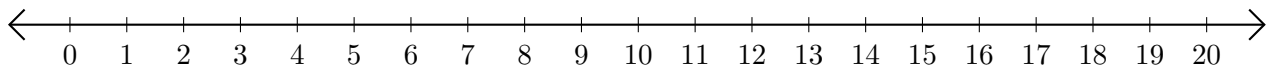
2. $8 + 9 = \underline{\quad}$



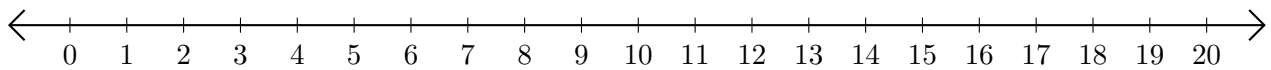
3. $13 + 7 = \underline{\quad}$



4. $6 + 5 = \underline{\quad}$



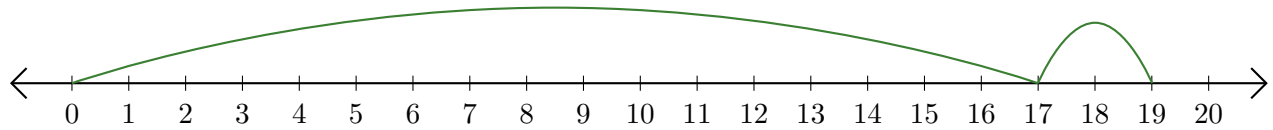
5. $14 + 3 = \underline{\quad}$



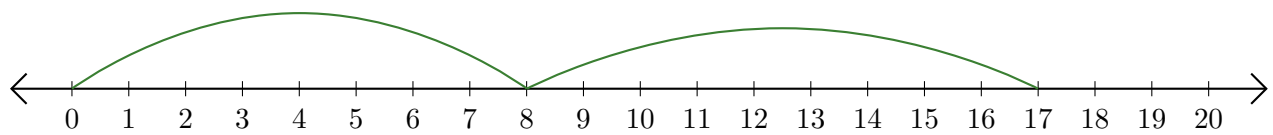
Sumar en Rectas Numéricas (I) Respuestas

Use las rectas numéricas para calcular cada suma.

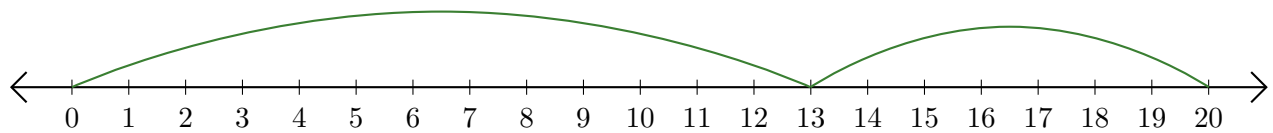
1. $17 + 2 = \underline{19}$



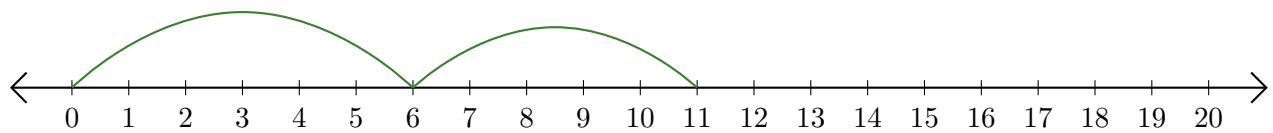
2. $8 + 9 = \underline{17}$



3. $13 + 7 = \underline{20}$



4. $6 + 5 = \underline{11}$



5. $14 + 3 = \underline{17}$

