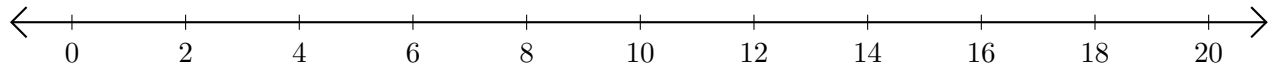


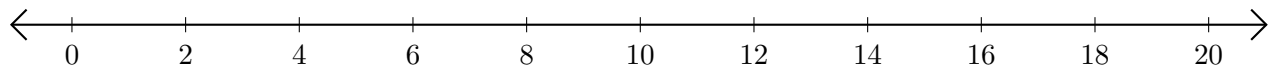
Sumar en Rectas Numéricas (B)

Use las rectas numéricas para calcular cada suma.

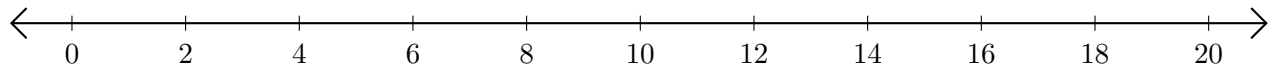
1. $6 + 2 = \underline{\quad}$



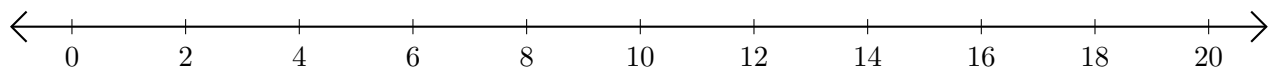
2. $12 + 8 = \underline{\quad}$



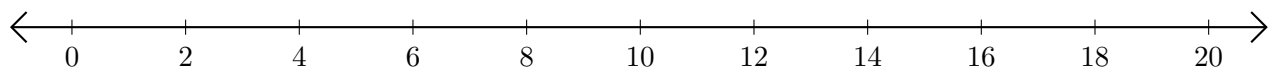
3. $10 + 6 = \underline{\quad}$



4. $16 + 2 = \underline{\quad}$



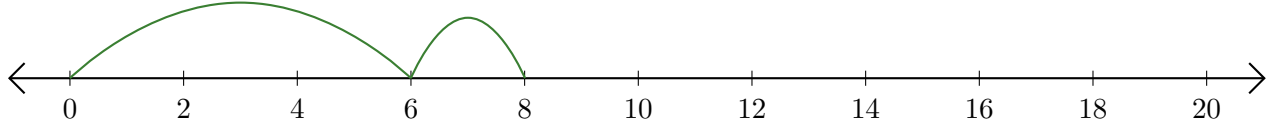
5. $18 + 2 = \underline{\quad}$



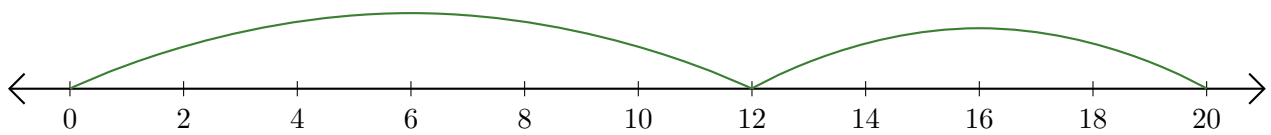
Sumar en Rectas Numéricas (B) Respuestas

Use las rectas numéricas para calcular cada suma.

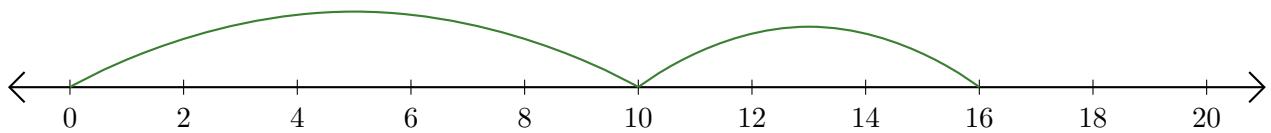
1. $6 + 2 = \underline{8}$



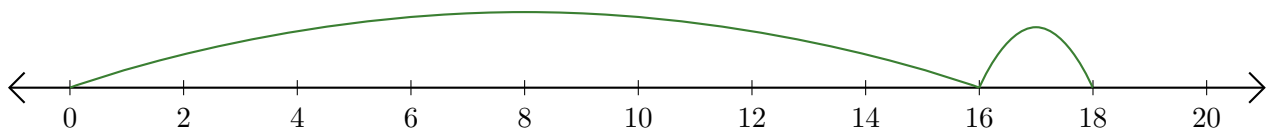
2. $12 + 8 = \underline{20}$



3. $10 + 6 = \underline{16}$



4. $16 + 2 = \underline{18}$



5. $18 + 2 = \underline{20}$

