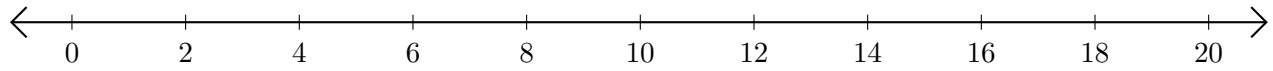


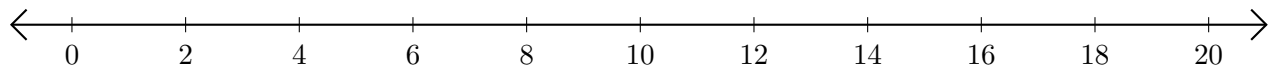
Sumar en Rectas Numéricas (D)

Use las rectas numéricas para calcular cada suma.

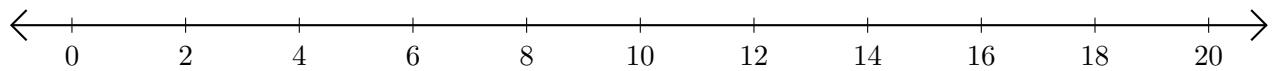
1. $8 + 2 = \underline{\quad}$



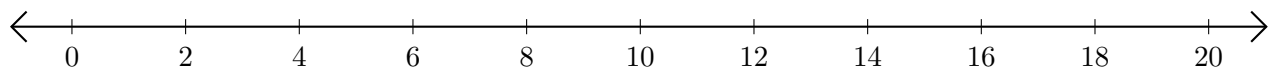
2. $4 + 12 = \underline{\quad}$



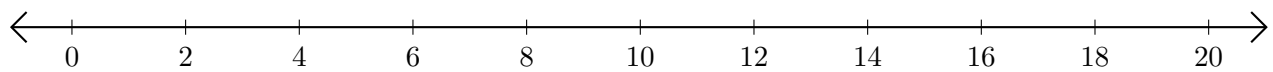
3. $12 + 4 = \underline{\quad}$



4. $6 + 14 = \underline{\quad}$



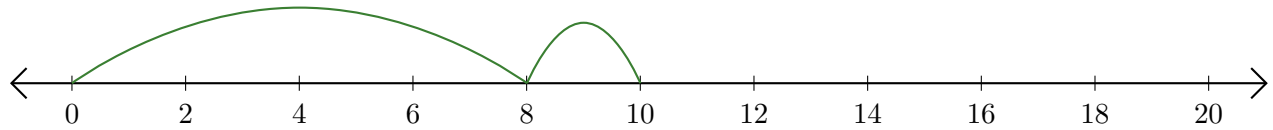
5. $16 + 2 = \underline{\quad}$



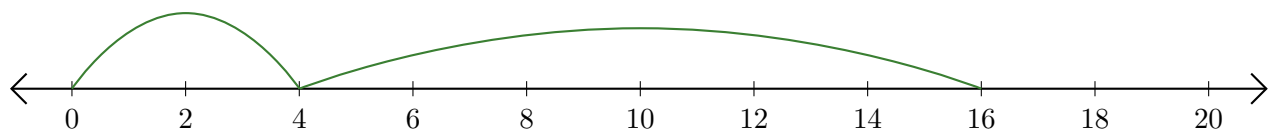
Sumar en Rectas Numéricas (D) Respuestas

Use las rectas numéricas para calcular cada suma.

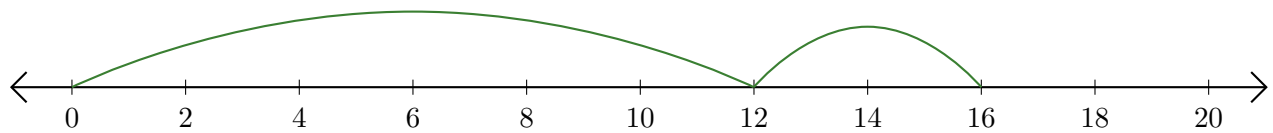
1. $8 + 2 = \underline{10}$



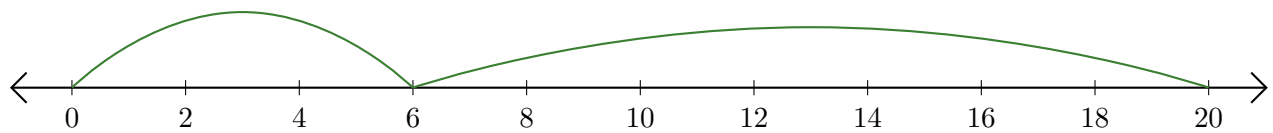
2. $4 + 12 = \underline{16}$



3. $12 + 4 = \underline{16}$



4. $6 + 14 = \underline{20}$



5. $16 + 2 = \underline{18}$

