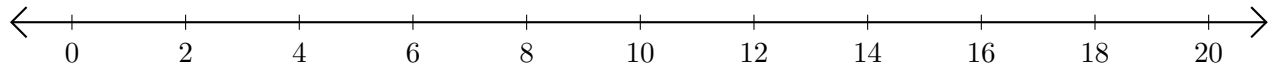


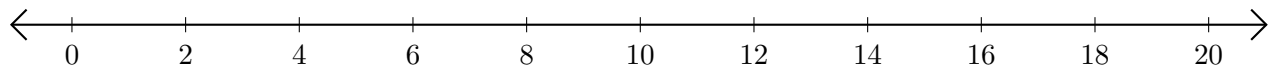
# Sumar en Rectas Numéricas (F)

Use las rectas numéricas para calcular cada suma.

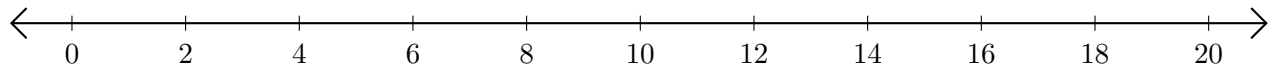
1.  $4 + 4 = \underline{\quad}$



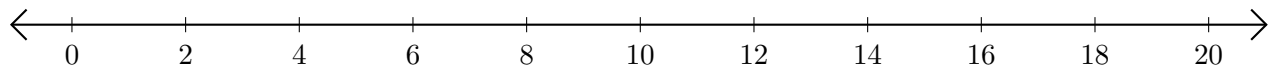
2.  $10 + 8 = \underline{\quad}$



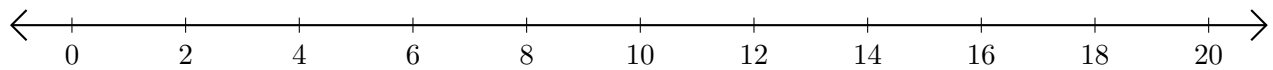
3.  $2 + 16 = \underline{\quad}$



4.  $8 + 8 = \underline{\quad}$



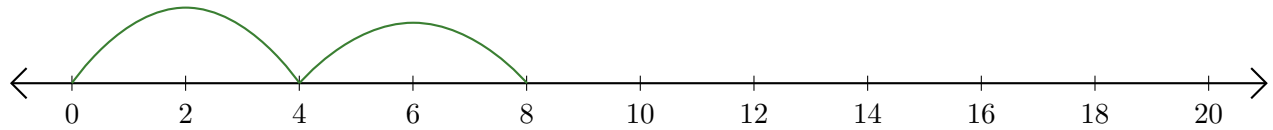
5.  $18 + 2 = \underline{\quad}$



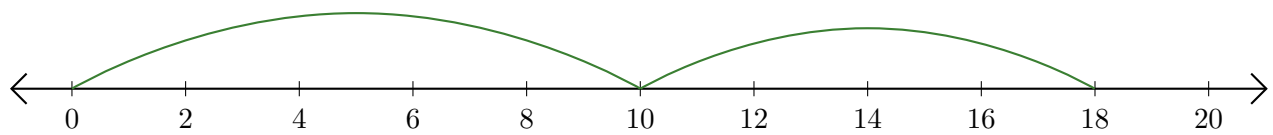
# Sumar en Rectas Numéricas (F) Respuestas

Use las rectas numéricas para calcular cada suma.

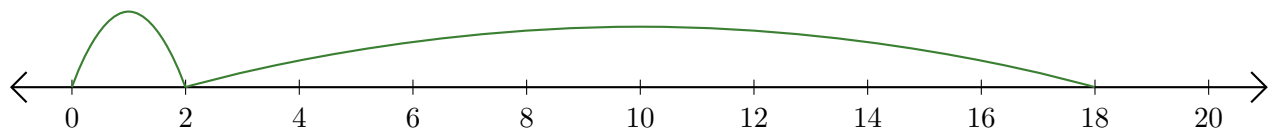
1.  $4 + 4 = \underline{8}$



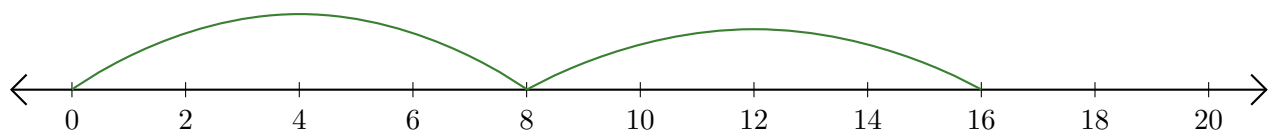
2.  $10 + 8 = \underline{18}$



3.  $2 + 16 = \underline{18}$



4.  $8 + 8 = \underline{16}$



5.  $18 + 2 = \underline{20}$

