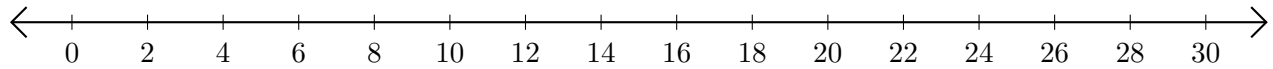


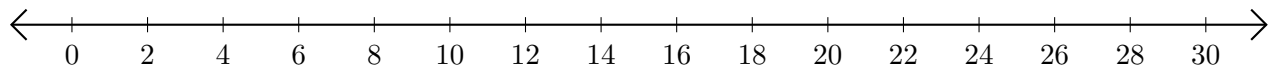
## Sumar en Rectas Numéricas (E)

Use las rectas numéricas para calcular cada suma.

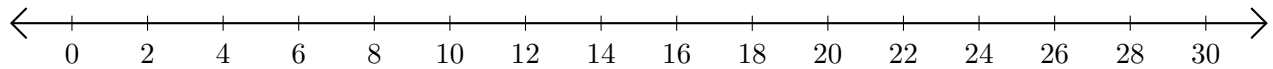
1.  $4 + 22 = \underline{\quad}$



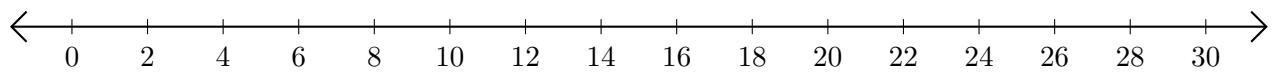
2.  $12 + 16 = \underline{\quad}$



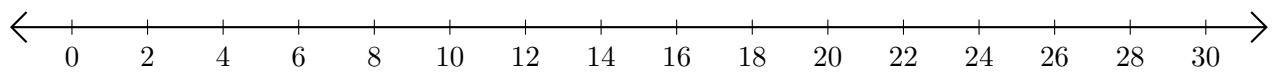
3.  $10 + 14 = \underline{\quad}$



4.  $22 + 4 = \underline{\quad}$



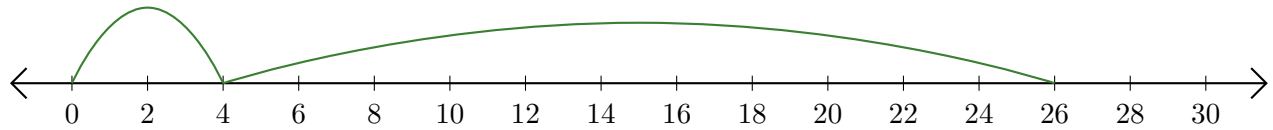
5.  $16 + 6 = \underline{\quad}$



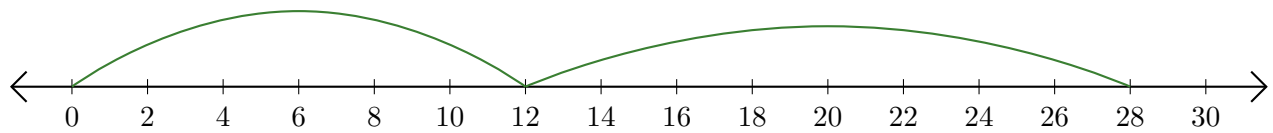
# Sumar en Rectas Numéricas (E) Respuestas

Use las rectas numéricas para calcular cada suma.

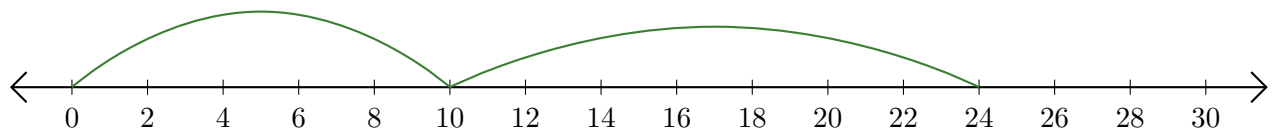
1.  $4 + 22 = \underline{26}$



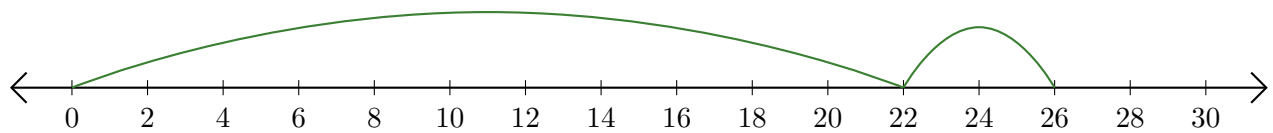
2.  $12 + 16 = \underline{28}$



3.  $10 + 14 = \underline{24}$



4.  $22 + 4 = \underline{26}$



5.  $16 + 6 = \underline{22}$

