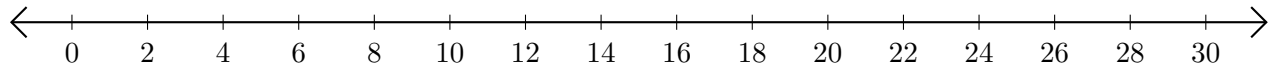


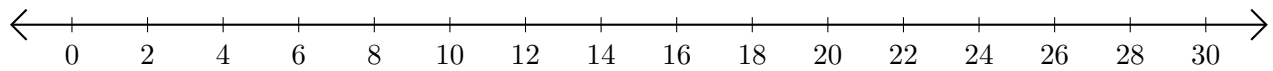
Sumar en Rectas Numéricas (G)

Use las rectas numéricas para calcular cada suma.

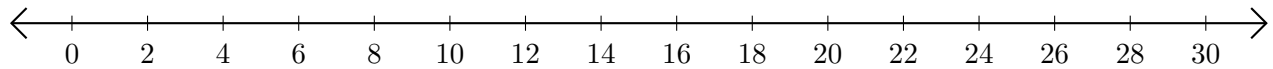
1. $24 + 6 = \underline{\quad}$



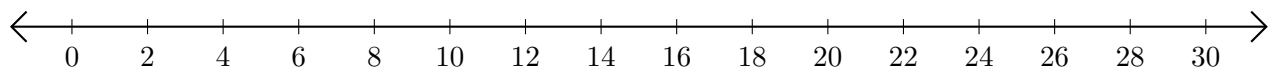
2. $28 + 2 = \underline{\quad}$



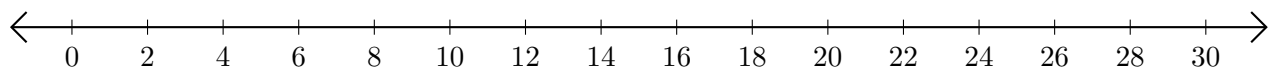
3. $16 + 6 = \underline{\quad}$



4. $2 + 20 = \underline{\quad}$



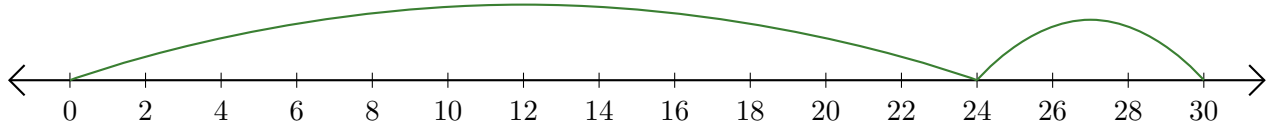
5. $4 + 24 = \underline{\quad}$



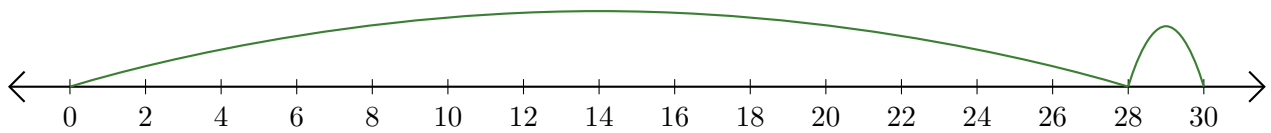
Sumar en Rectas Numéricas (G) Respuestas

Use las rectas numéricas para calcular cada suma.

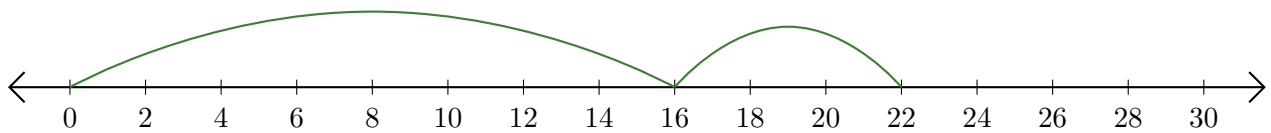
1. $24 + 6 = \underline{30}$



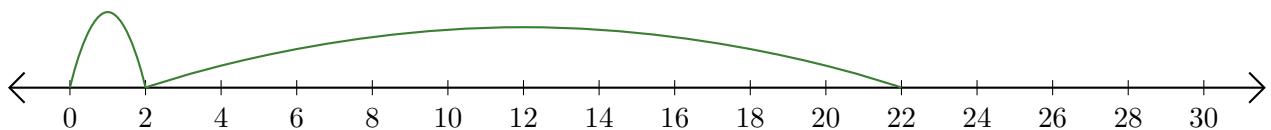
2. $28 + 2 = \underline{30}$



3. $16 + 6 = \underline{22}$



4. $2 + 20 = \underline{22}$



5. $4 + 24 = \underline{28}$

