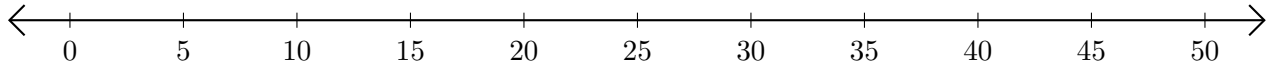


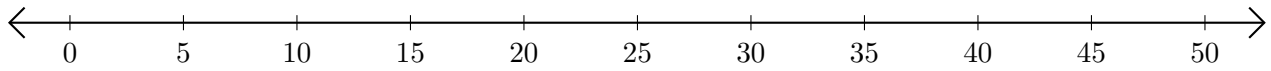
## Sumar en Rectas Numéricas (B)

Use las rectas numéricas para calcular cada suma.

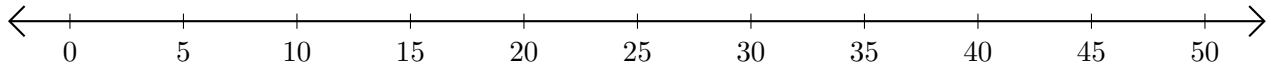
1.  $30 + 20 = \underline{\quad}$



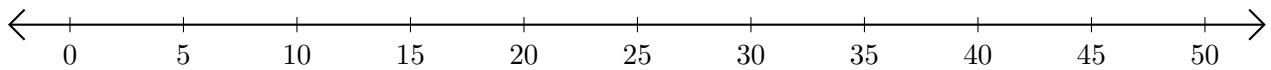
2.  $45 + 5 = \underline{\quad}$



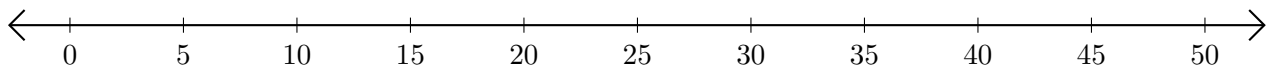
3.  $5 + 30 = \underline{\quad}$



4.  $40 + 10 = \underline{\quad}$



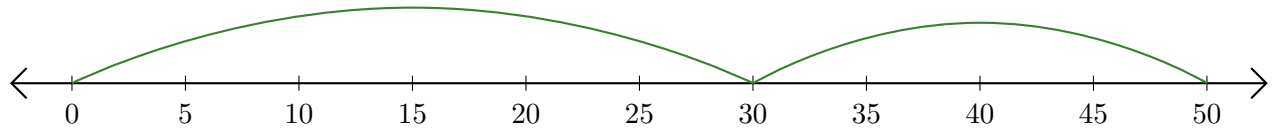
5.  $25 + 15 = \underline{\quad}$



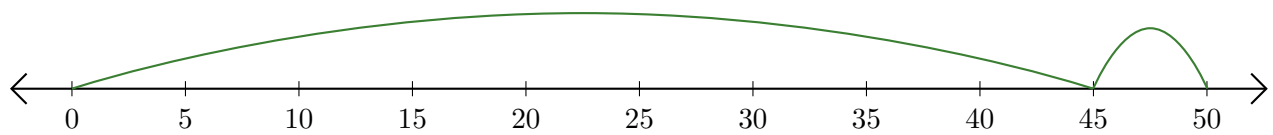
# Sumar en Rectas Numéricas (B) Respuestas

Use las rectas numéricas para calcular cada suma.

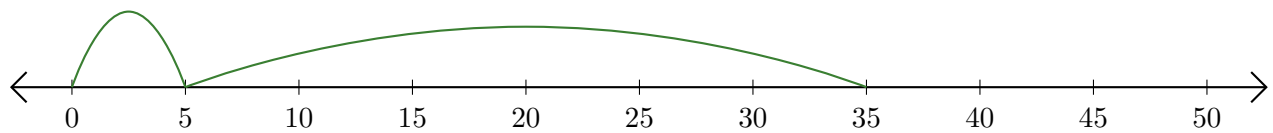
1.  $30 + 20 = \underline{50}$



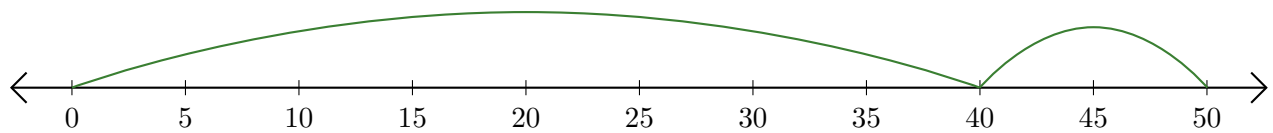
2.  $45 + 5 = \underline{50}$



3.  $5 + 30 = \underline{35}$



4.  $40 + 10 = \underline{50}$



5.  $25 + 15 = \underline{40}$

