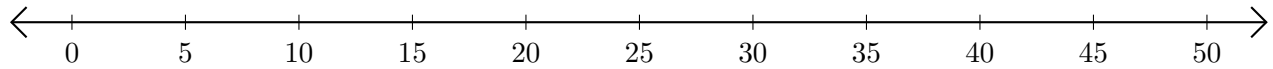


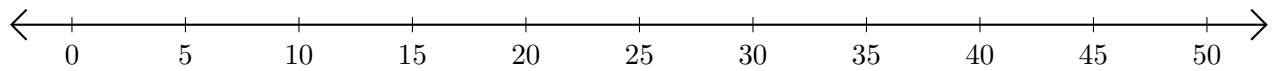
Sumar en Rectas Numéricas (F)

Use las rectas numéricas para calcular cada suma.

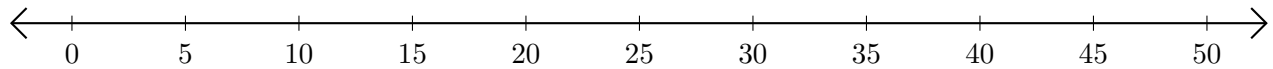
1. $30 + 5 = \underline{\quad}$



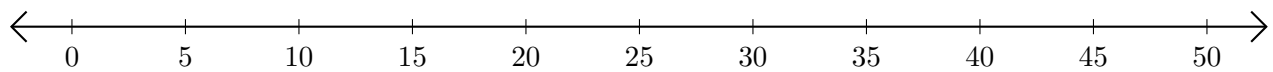
2. $35 + 15 = \underline{\quad}$



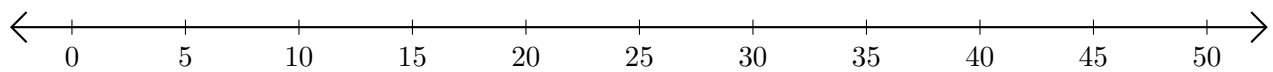
3. $40 + 10 = \underline{\quad}$



4. $25 + 10 = \underline{\quad}$



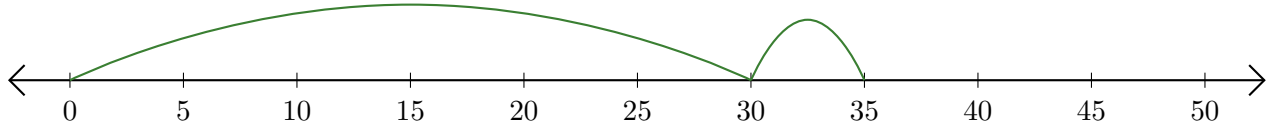
5. $10 + 30 = \underline{\quad}$



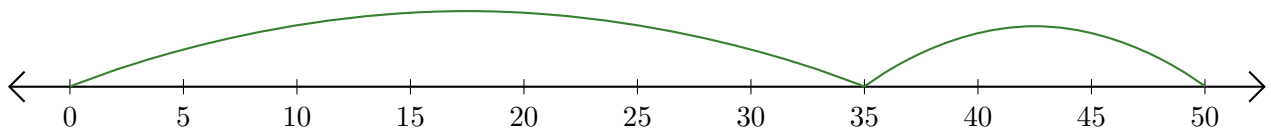
Sumar en Rectas Numéricas (F) Respuestas

Use las rectas numéricas para calcular cada suma.

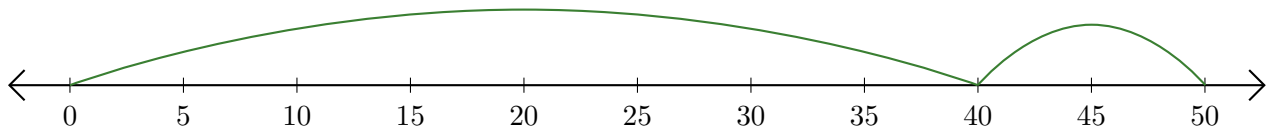
1. $30 + 5 = \underline{35}$



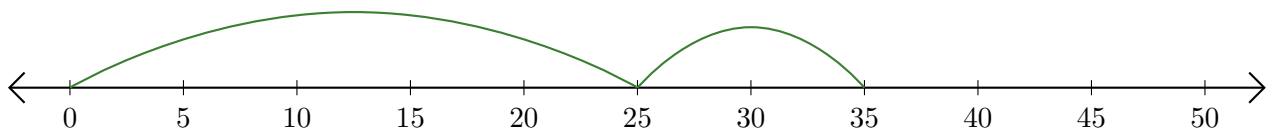
2. $35 + 15 = \underline{50}$



3. $40 + 10 = \underline{50}$



4. $25 + 10 = \underline{35}$



5. $10 + 30 = \underline{40}$

