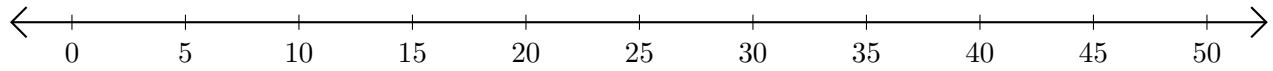


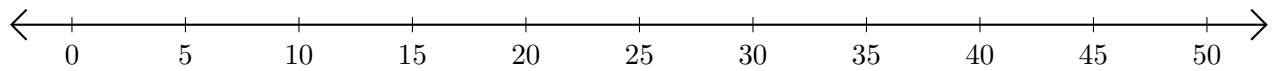
# Sumar en Rectas Numéricas (I)

Use las rectas numéricas para calcular cada suma.

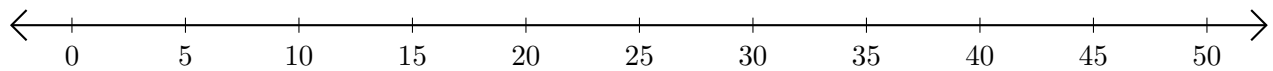
1.  $15 + 15 = \underline{\quad}$



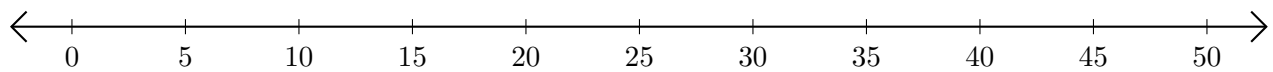
2.  $5 + 25 = \underline{\quad}$



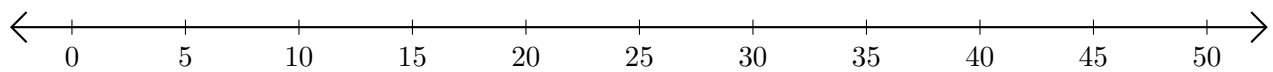
3.  $35 + 5 = \underline{\quad}$



4.  $20 + 10 = \underline{\quad}$



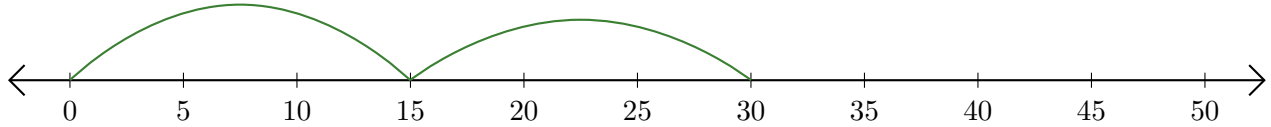
5.  $45 + 5 = \underline{\quad}$



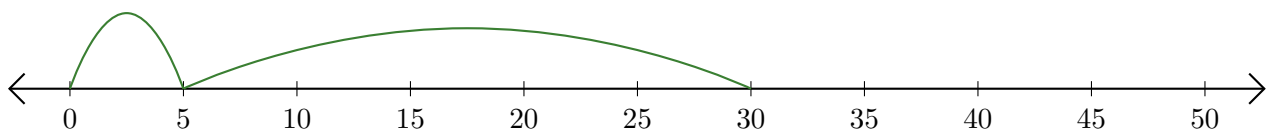
# Sumar en Rectas Numéricas (I) Respuestas

Use las rectas numéricas para calcular cada suma.

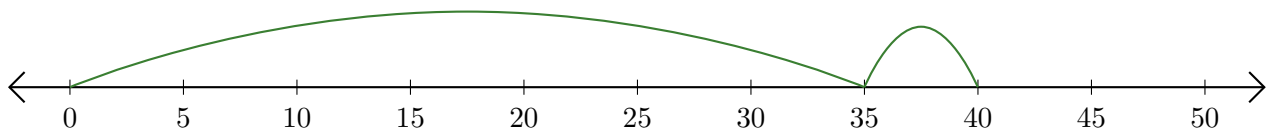
1.  $15 + 15 = \underline{30}$



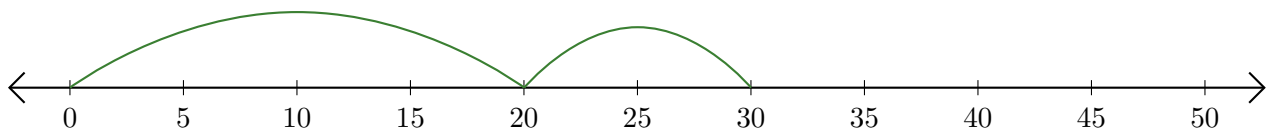
2.  $5 + 25 = \underline{30}$



3.  $35 + 5 = \underline{40}$



4.  $20 + 10 = \underline{30}$



5.  $45 + 5 = \underline{50}$

