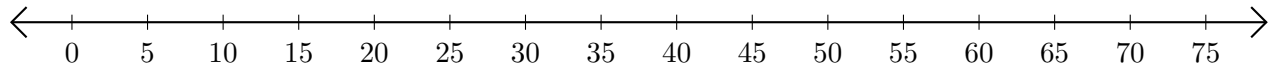


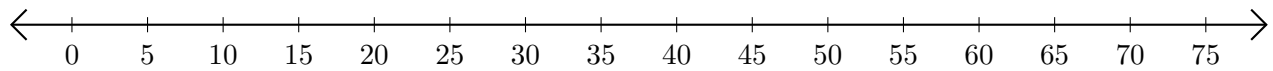
Sumar en Rectas Numéricas (A)

Use las rectas numéricas para calcular cada suma.

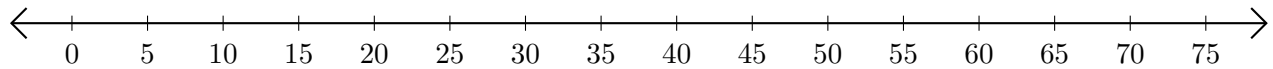
1. $55 + 5 = \underline{\quad}$



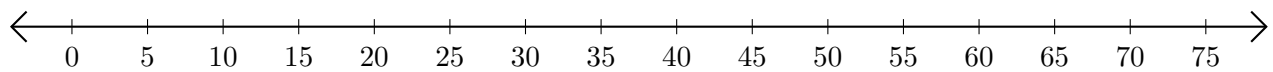
2. $65 + 10 = \underline{\quad}$



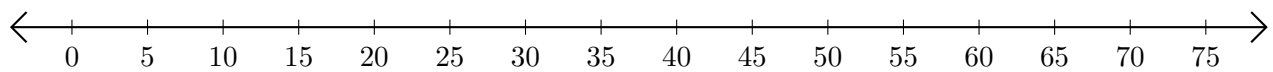
3. $30 + 45 = \underline{\quad}$



4. $35 + 40 = \underline{\quad}$



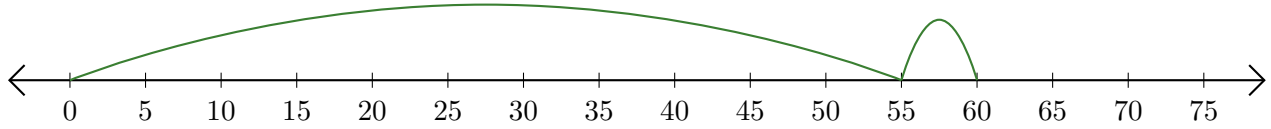
5. $60 + 10 = \underline{\quad}$



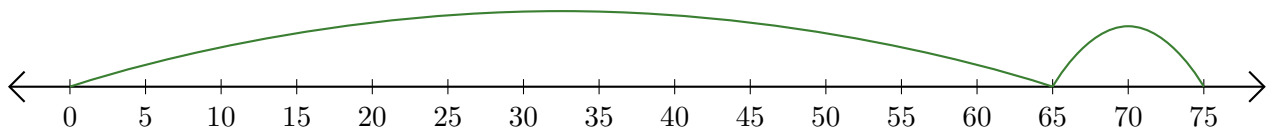
Sumar en Rectas Numéricas (A) Respuestas

Use las rectas numéricas para calcular cada suma.

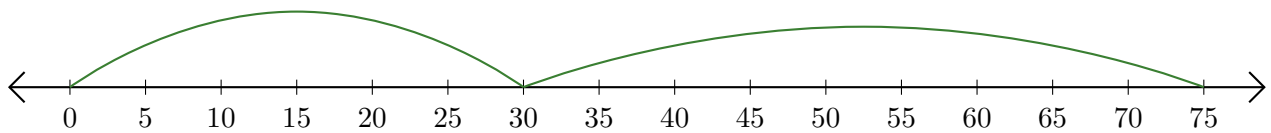
1. $55 + 5 = \underline{60}$



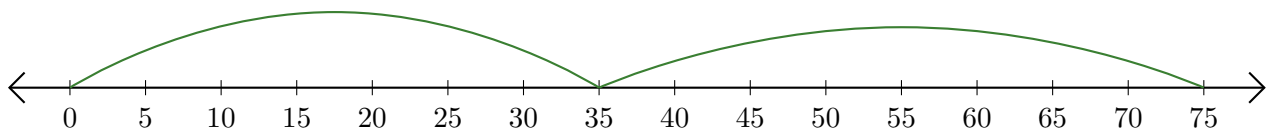
2. $65 + 10 = \underline{75}$



3. $30 + 45 = \underline{75}$



4. $35 + 40 = \underline{75}$



5. $60 + 10 = \underline{70}$

