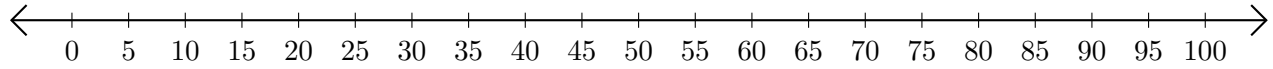


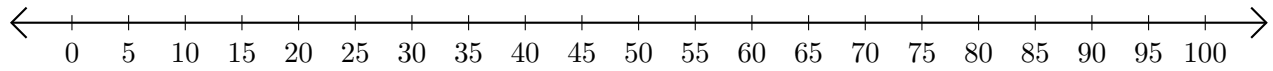
Sumar en Rectas Numéricas (B)

Use las rectas numéricas para calcular cada suma.

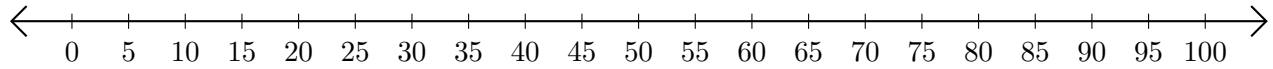
1. $40 + 5 = \underline{\quad}$



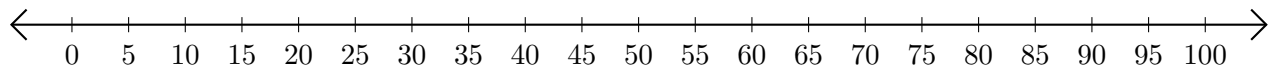
2. $35 + 15 = \underline{\quad}$



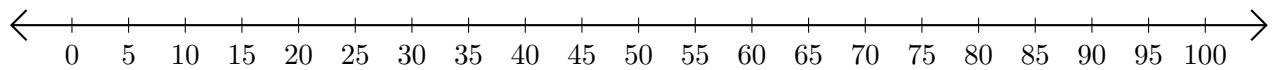
3. $5 + 95 = \underline{\quad}$



4. $50 + 35 = \underline{\quad}$



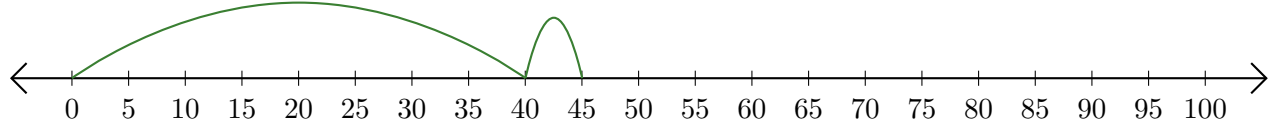
5. $80 + 5 = \underline{\quad}$



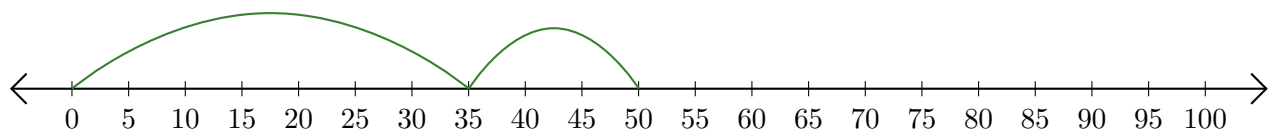
Sumar en Rectas Numéricas (B) Respuestas

Use las rectas numéricas para calcular cada suma.

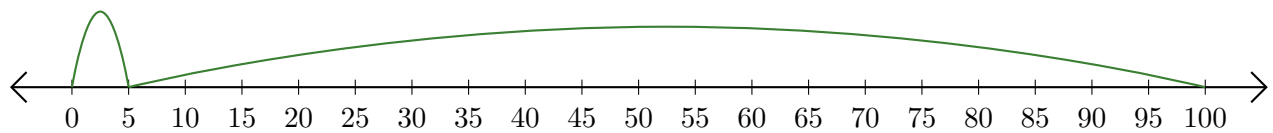
1. $40 + 5 = \underline{45}$



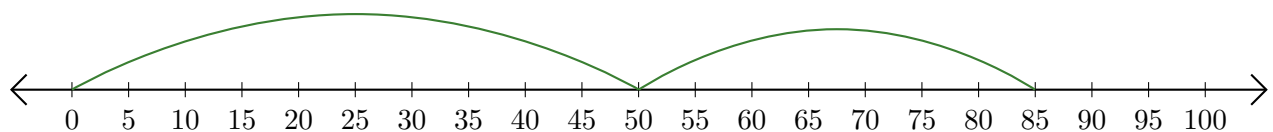
2. $35 + 15 = \underline{50}$



3. $5 + 95 = \underline{100}$



4. $50 + 35 = \underline{85}$



5. $80 + 5 = \underline{85}$

