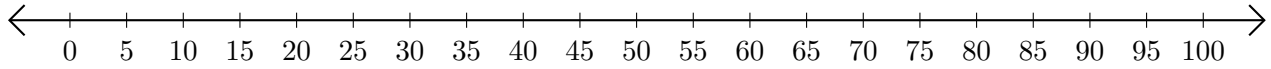


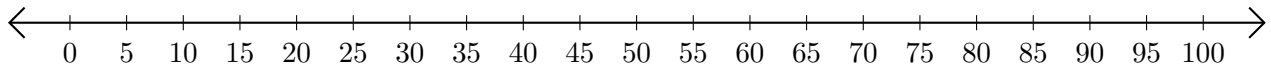
Sumar en Rectas Numéricas (D)

Use las rectas numéricas para calcular cada suma.

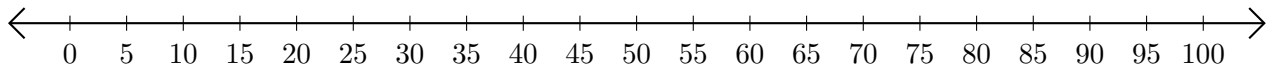
1. $15 + 40 = \underline{\quad}$



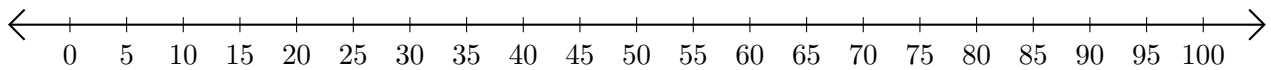
2. $60 + 25 = \underline{\quad}$



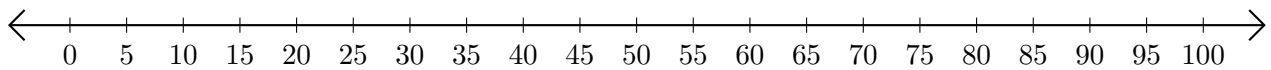
3. $45 + 30 = \underline{\quad}$



4. $75 + 25 = \underline{\quad}$



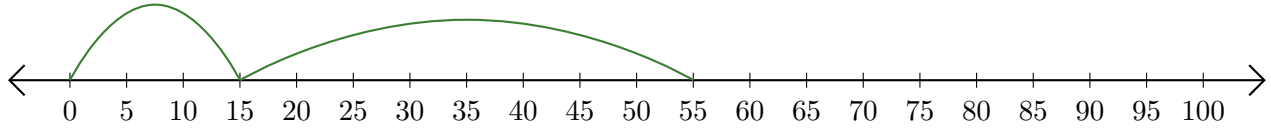
5. $10 + 70 = \underline{\quad}$



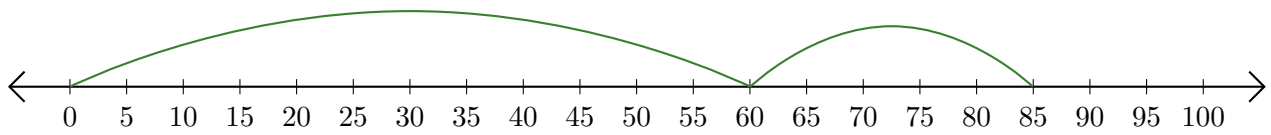
Sumar en Rectas Numéricas (D) Respuestas

Use las rectas numéricas para calcular cada suma.

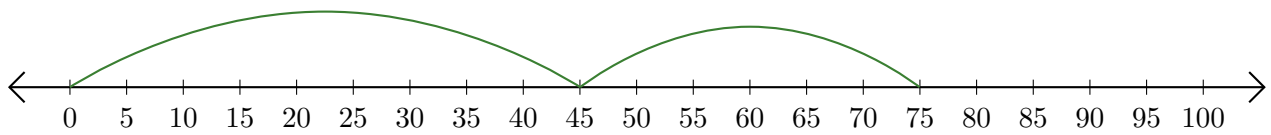
1. $15 + 40 = \underline{55}$



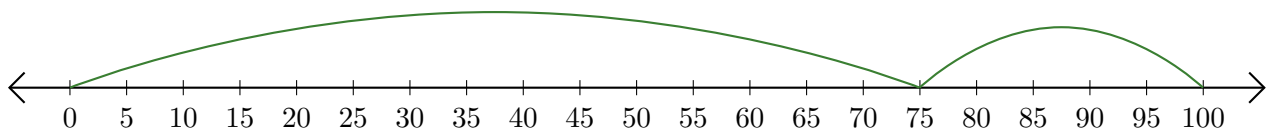
2. $60 + 25 = \underline{85}$



3. $45 + 30 = \underline{75}$



4. $75 + 25 = \underline{100}$



5. $10 + 70 = \underline{80}$

