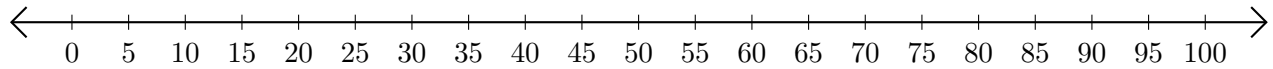


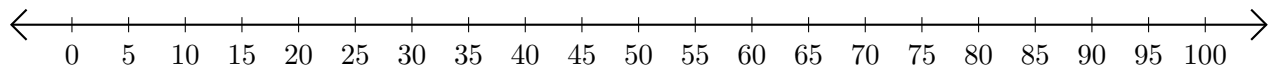
# Sumar en Rectas Numéricas (E)

Use las rectas numéricas para calcular cada suma.

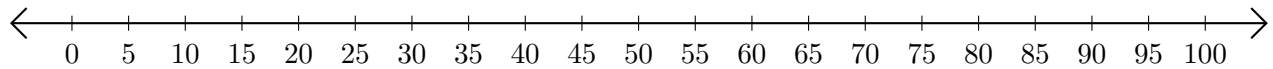
1.  $30 + 15 = \underline{\quad}$



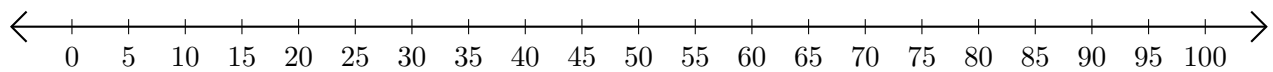
2.  $65 + 20 = \underline{\quad}$



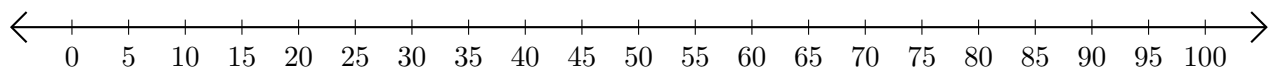
3.  $80 + 15 = \underline{\quad}$



4.  $90 + 10 = \underline{\quad}$



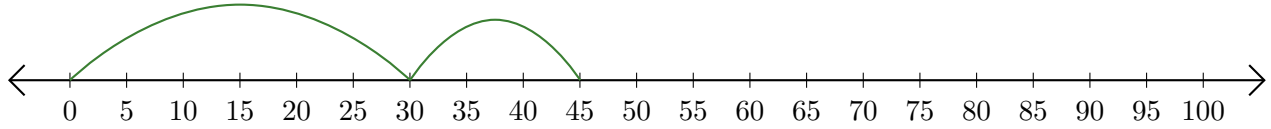
5.  $60 + 5 = \underline{\quad}$



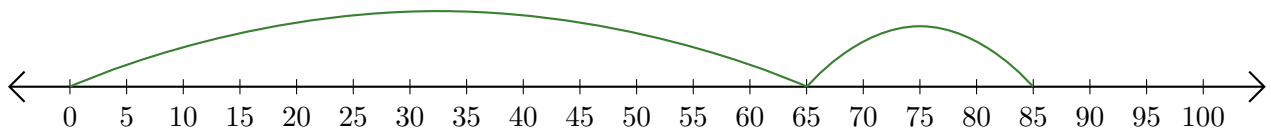
# Sumar en Rectas Numéricas (E) Respuestas

Use las rectas numéricas para calcular cada suma.

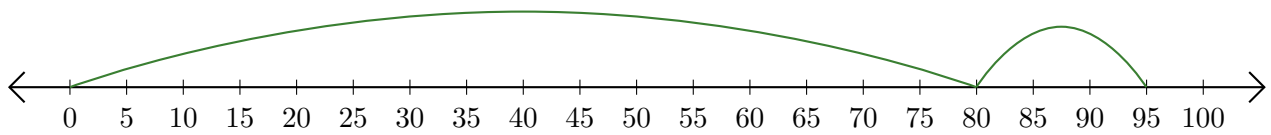
1.  $30 + 15 = \underline{45}$



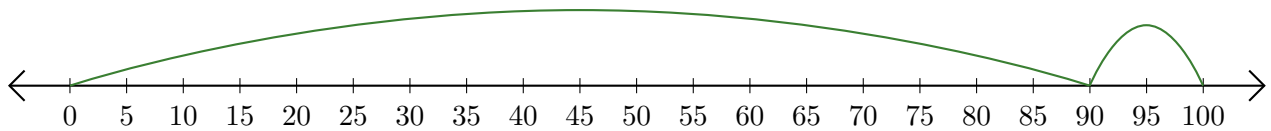
2.  $65 + 20 = \underline{85}$



3.  $80 + 15 = \underline{95}$



4.  $90 + 10 = \underline{100}$



5.  $60 + 5 = \underline{65}$

