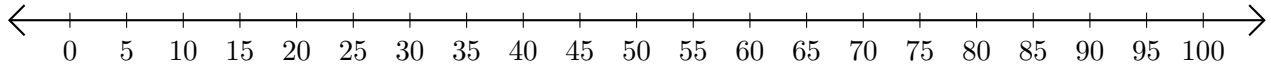


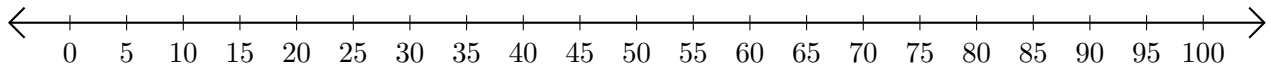
Sumar en Rectas Numéricas (H)

Use las rectas numéricas para calcular cada suma.

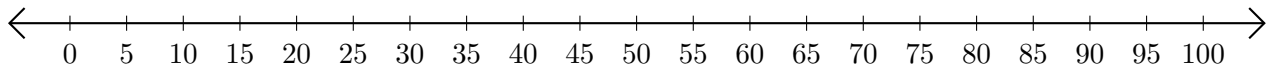
1. $20 + 20 = \underline{\quad}$



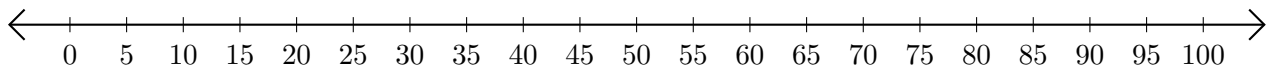
2. $90 + 10 = \underline{\quad}$



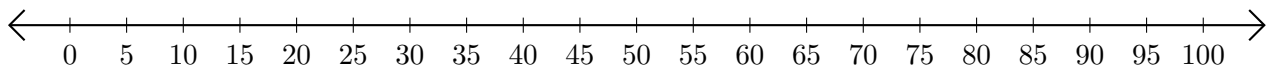
3. $30 + 45 = \underline{\quad}$



4. $35 + 20 = \underline{\quad}$




5. $70 + 5 = \underline{\quad}$



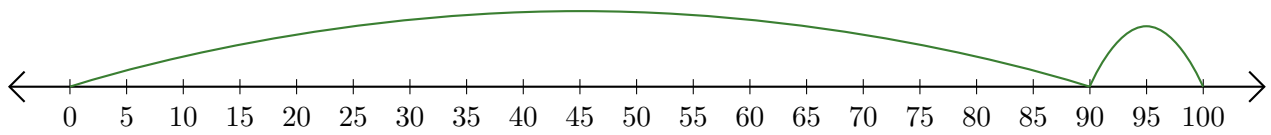
Sumar en Rectas Numéricas (H) Respuestas

Use las rectas numéricas para calcular cada suma.

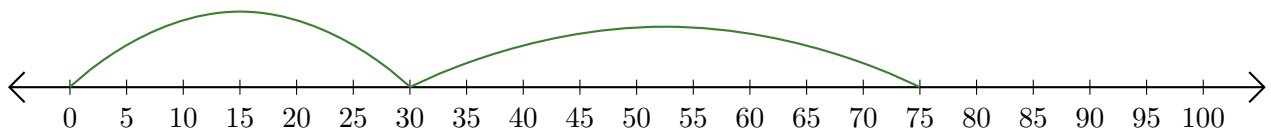
1. $20 + 20 = \underline{40}$



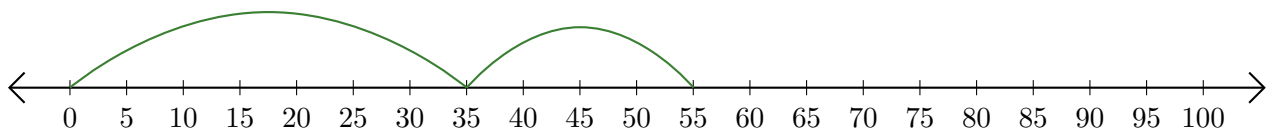
2. $90 + 10 = \underline{100}$



3. $30 + 45 = \underline{75}$



4. $35 + 20 = \underline{55}$



5. $70 + 5 = \underline{75}$

