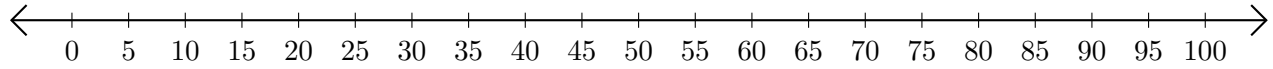


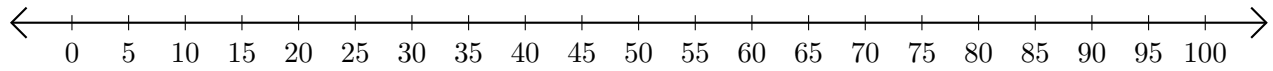
Sumar en Rectas Numéricas (I)

Use las rectas numéricas para calcular cada suma.

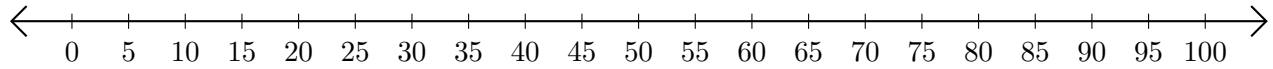
1. $40 + 15 = \underline{\quad}$



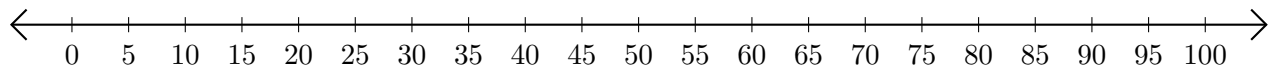
2. $45 + 30 = \underline{\quad}$



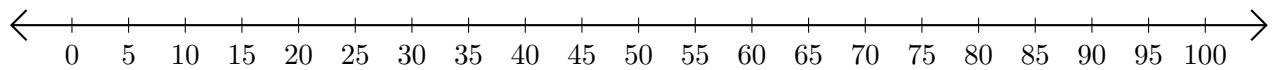
3. $30 + 25 = \underline{\quad}$



4. $95 + 5 = \underline{\quad}$



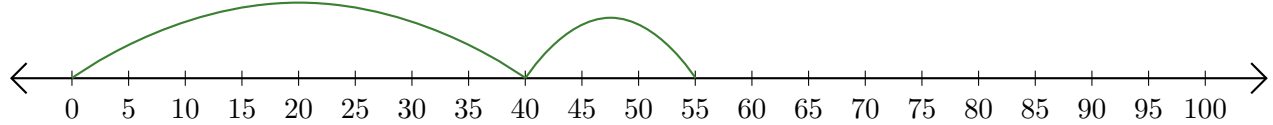
5. $20 + 40 = \underline{\quad}$



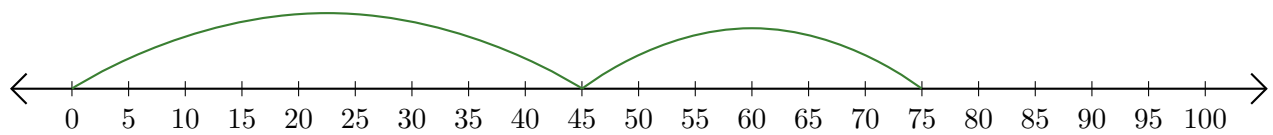
Sumar en Rectas Numéricas (I) Respuestas

Use las rectas numéricas para calcular cada suma.

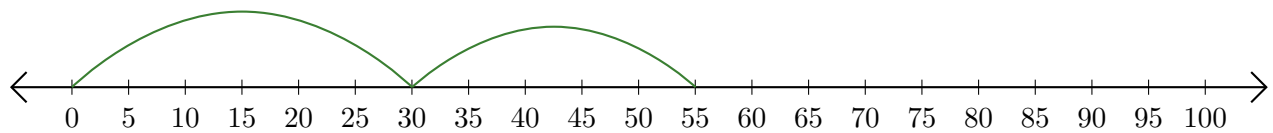
1. $40 + 15 = \underline{55}$



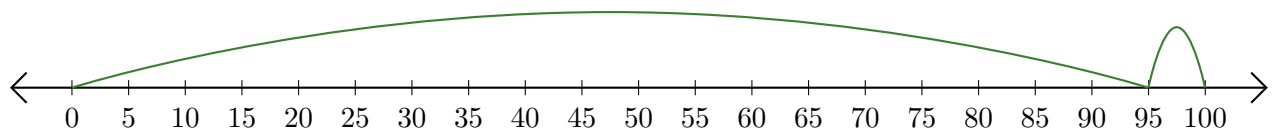
2. $45 + 30 = \underline{75}$



3. $30 + 25 = \underline{55}$



4. $95 + 5 = \underline{100}$



5. $20 + 40 = \underline{60}$

