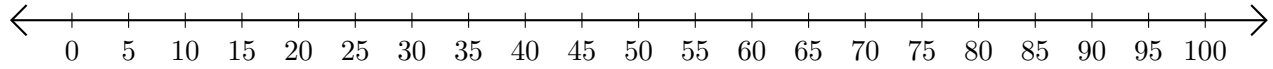


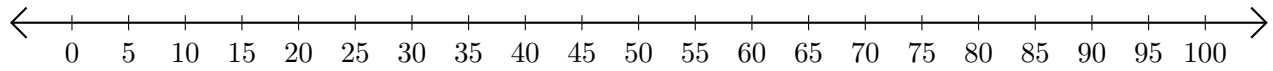
# Sumar en Rectas Numéricas (J)

Use las rectas numéricas para calcular cada suma.

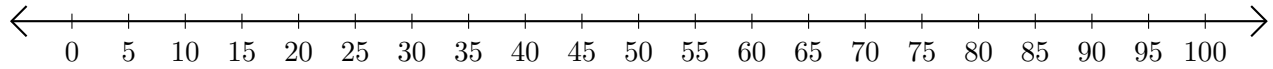
1.  $30 + 50 = \underline{\quad}$



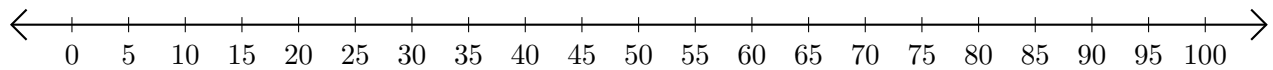
2.  $15 + 15 = \underline{\quad}$



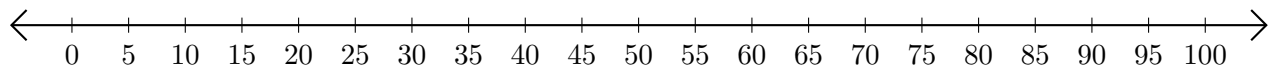
3.  $75 + 10 = \underline{\quad}$



4.  $35 + 5 = \underline{\quad}$



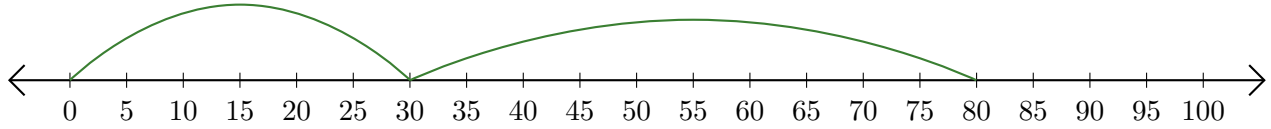
5.  $20 + 40 = \underline{\quad}$



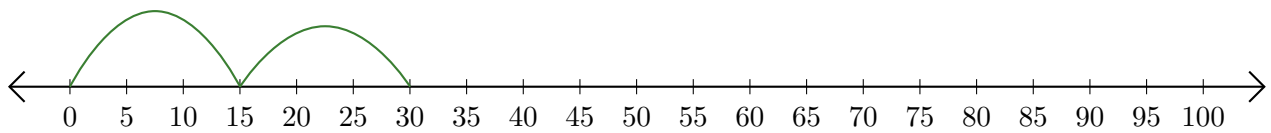
# Sumar en Rectas Numéricas (J) Respuestas

Use las rectas numéricas para calcular cada suma.

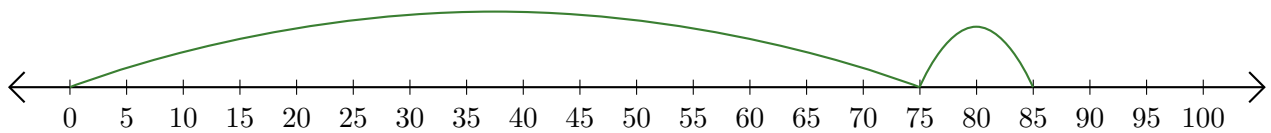
1.  $30 + 50 = \underline{80}$




2.  $15 + 15 = \underline{30}$



3.  $75 + 10 = \underline{85}$



4.  $35 + 5 = \underline{40}$



5.  $20 + 40 = \underline{60}$

