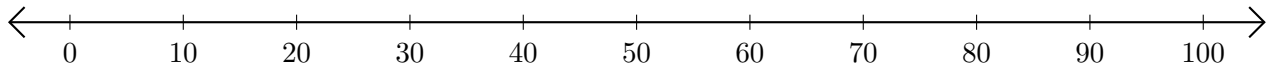


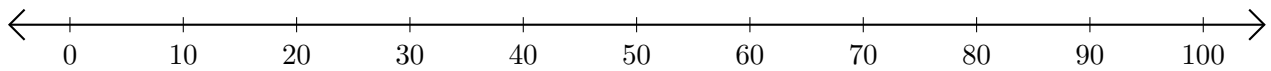
# Sumar en Rectas Numéricas (A)

Use las rectas numéricas para calcular cada suma.

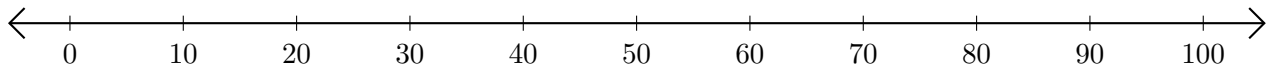
1.  $90 + 10 = \underline{\hspace{2cm}}$



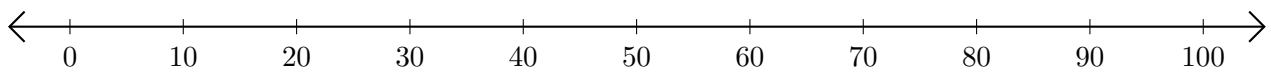
2.  $70 + 30 = \underline{\hspace{2cm}}$



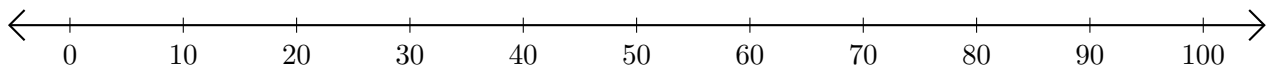
3.  $20 + 80 = \underline{\hspace{2cm}}$



4.  $30 + 30 = \underline{\hspace{2cm}}$



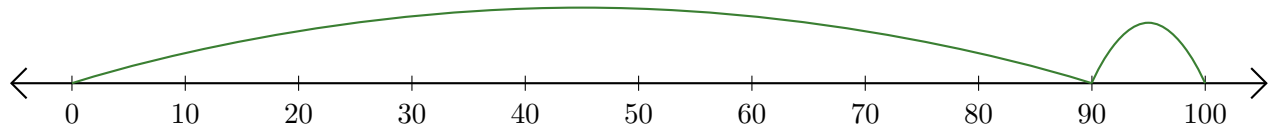
5.  $60 + 30 = \underline{\hspace{2cm}}$



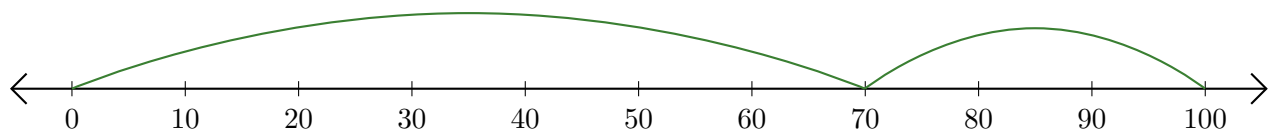
# Sumar en Rectas Numéricas (A) Respuestas

Use las rectas numéricas para calcular cada suma.

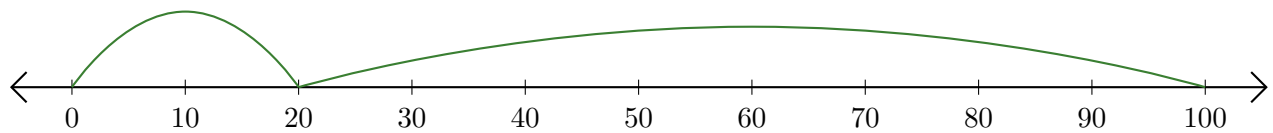
1.  $90 + 10 = \underline{100}$



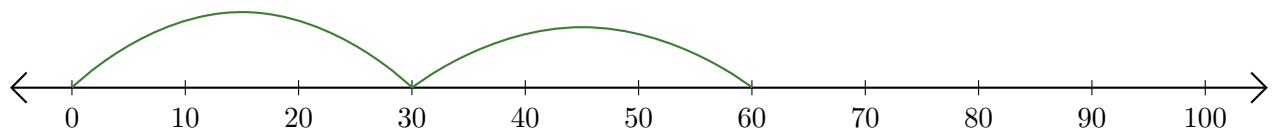
2.  $70 + 30 = \underline{100}$



3.  $20 + 80 = \underline{100}$



4.  $30 + 30 = \underline{60}$



5.  $60 + 30 = \underline{90}$

