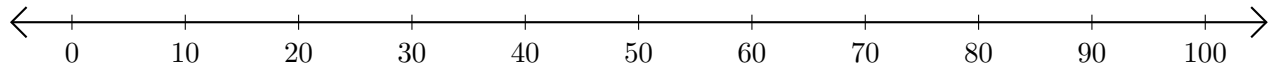


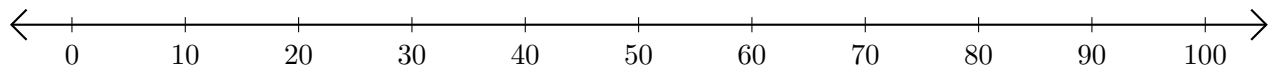
Sumar en Rectas Numéricas (D)

Use las rectas numéricas para calcular cada suma.

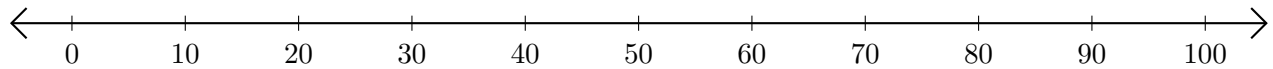
1. $70 + 20 = \underline{\quad}$



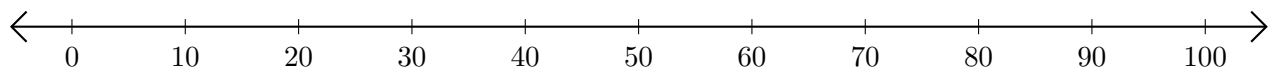
2. $50 + 50 = \underline{\quad}$



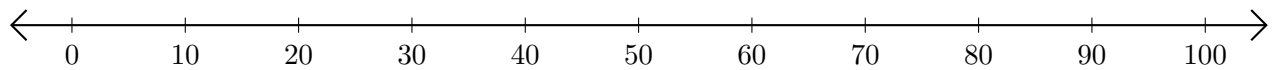
3. $40 + 20 = \underline{\quad}$



4. $90 + 10 = \underline{\quad}$



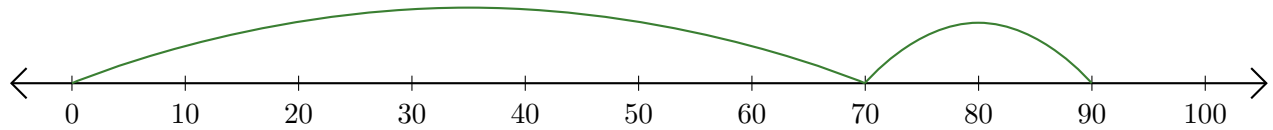
5. $20 + 60 = \underline{\quad}$



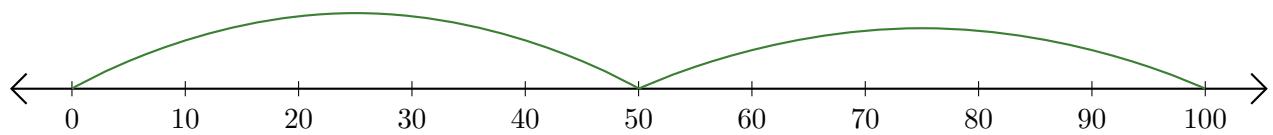
Sumar en Rectas Numéricas (D) Respuestas

Use las rectas numéricas para calcular cada suma.

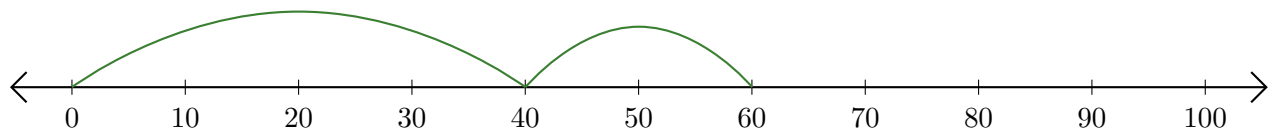
1. $70 + 20 = \underline{90}$



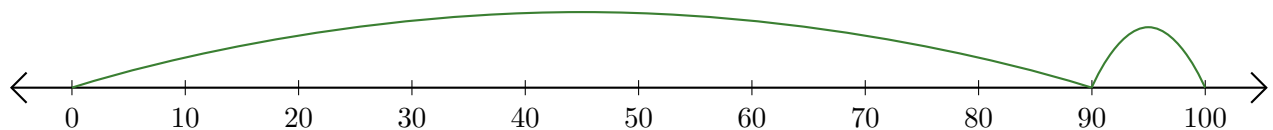
2. $50 + 50 = \underline{100}$



3. $40 + 20 = \underline{60}$



4. $90 + 10 = \underline{100}$



5. $20 + 60 = \underline{80}$

