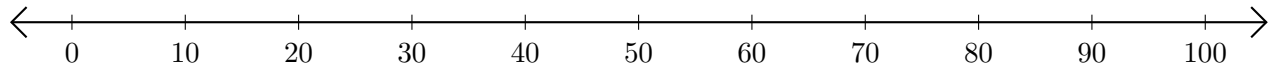


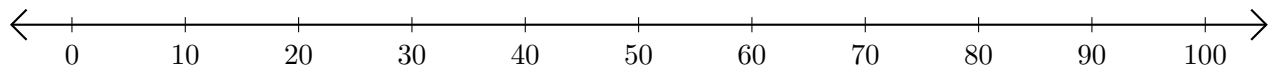
Sumar en Rectas Numéricas (G)

Use las rectas numéricas para calcular cada suma.

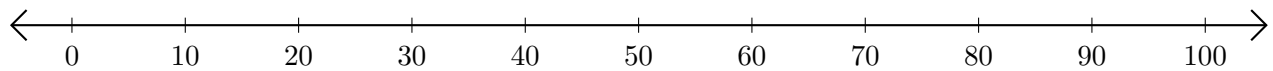
1. $10 + 70 = \underline{\quad}$



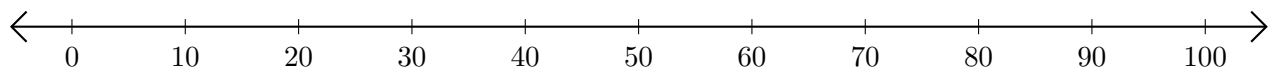
2. $30 + 60 = \underline{\quad}$



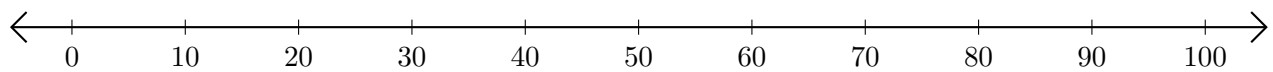
3. $60 + 10 = \underline{\quad}$



4. $70 + 20 = \underline{\quad}$



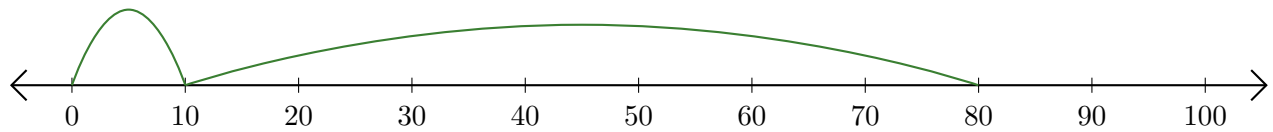
5. $80 + 10 = \underline{\quad}$



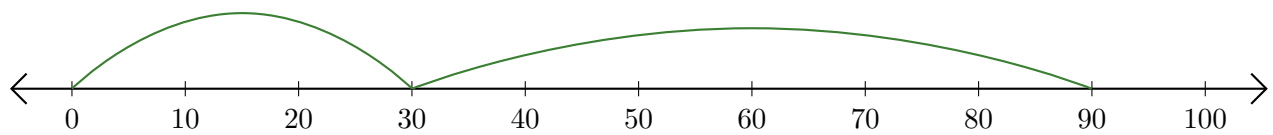
Sumar en Rectas Numéricas (G) Respuestas

Use las rectas numéricas para calcular cada suma.

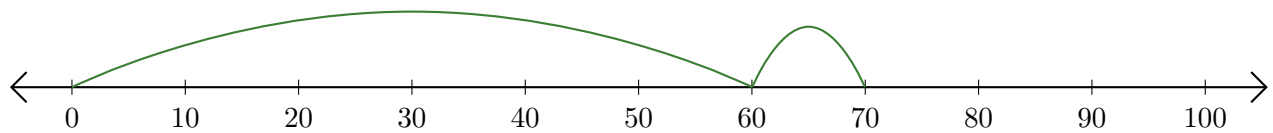
1. $10 + 70 = \underline{80}$



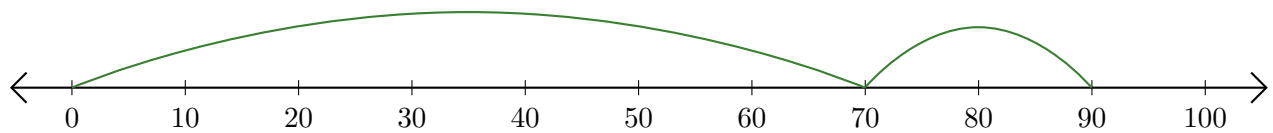
2. $30 + 60 = \underline{90}$



3. $60 + 10 = \underline{70}$



4. $70 + 20 = \underline{90}$



5. $80 + 10 = \underline{90}$

