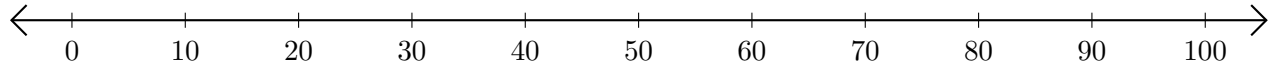


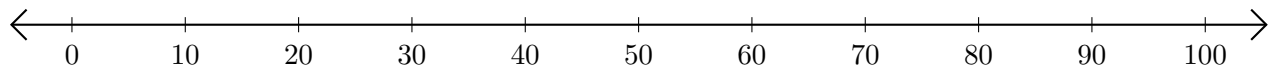
# Sumar en Rectas Numéricas (J)

Use las rectas numéricas para calcular cada suma.

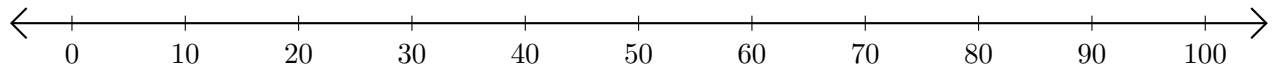
1.  $50 + 10 = \underline{\quad}$



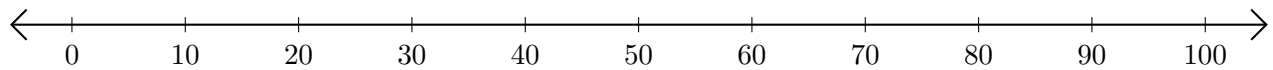
2.  $70 + 10 = \underline{\quad}$



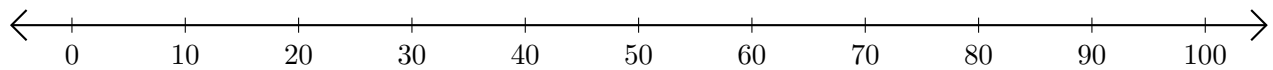
3.  $40 + 60 = \underline{\quad}$



4.  $80 + 10 = \underline{\quad}$



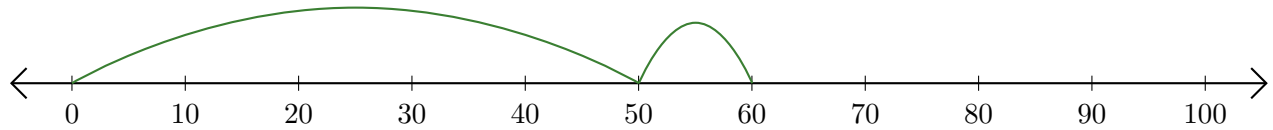
5.  $20 + 30 = \underline{\quad}$



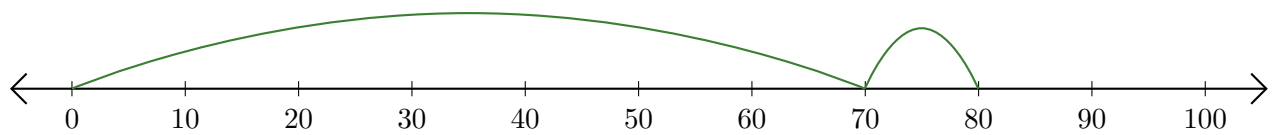
# Sumar en Rectas Numéricas (J) Respuestas

Use las rectas numéricas para calcular cada suma.

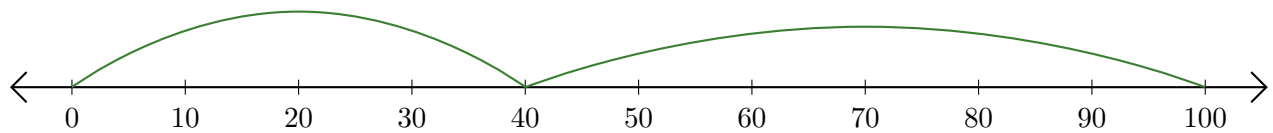
1.  $50 + 10 = \underline{60}$



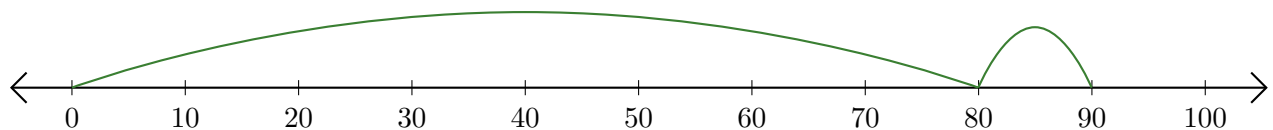
2.  $70 + 10 = \underline{80}$



3.  $40 + 60 = \underline{100}$



4.  $80 + 10 = \underline{90}$



5.  $20 + 30 = \underline{50}$

