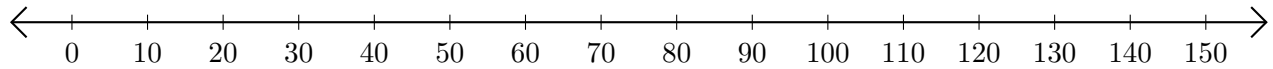


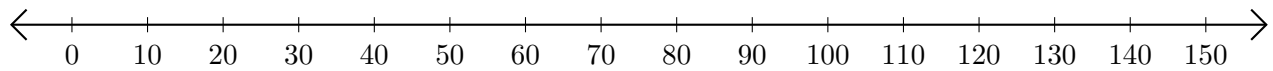
Sumar en Rectas Numéricas (A)

Use las rectas numéricas para calcular cada suma.

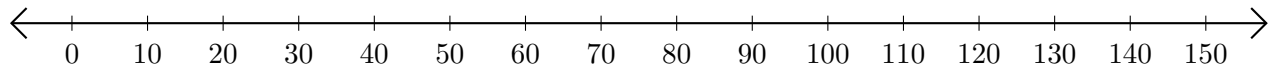
1. $50 + 60 = \underline{\hspace{2cm}}$



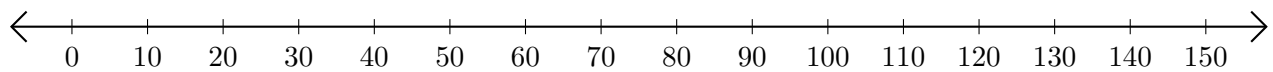
2. $130 + 10 = \underline{\hspace{2cm}}$



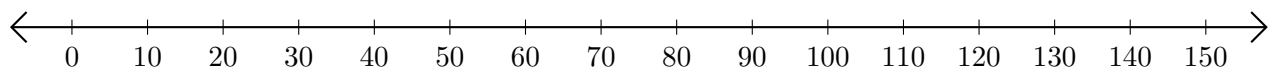
3. $20 + 50 = \underline{\hspace{2cm}}$



4. $60 + 20 = \underline{\hspace{2cm}}$



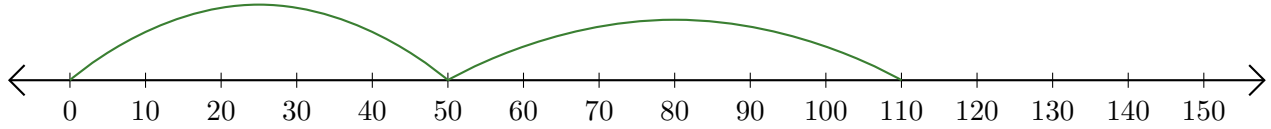
5. $110 + 30 = \underline{\hspace{2cm}}$



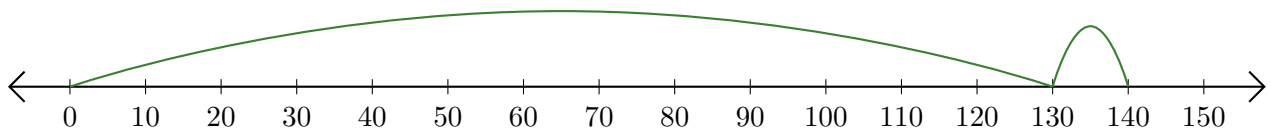
Sumar en Rectas Numéricas (A) Respuestas

Use las rectas numéricas para calcular cada suma.

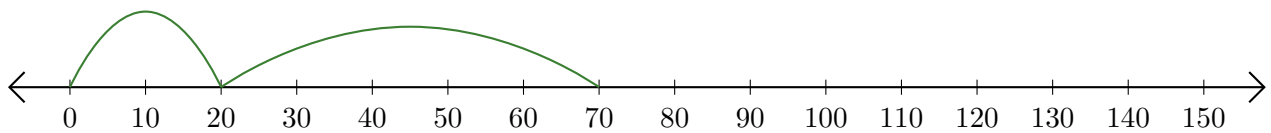
1. $50 + 60 = \underline{110}$



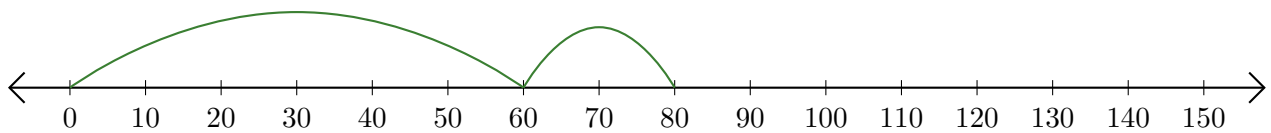
2. $130 + 10 = \underline{140}$



3. $20 + 50 = \underline{70}$



4. $60 + 20 = \underline{80}$



5. $110 + 30 = \underline{140}$

