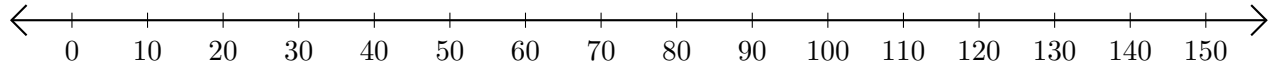


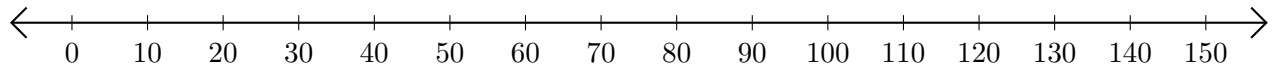
Sumar en Rectas Numéricas (B)

Use las rectas numéricas para calcular cada suma.

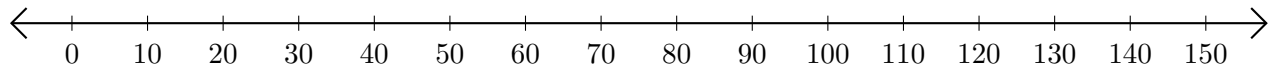
1. $130 + 10 = \underline{\hspace{2cm}}$



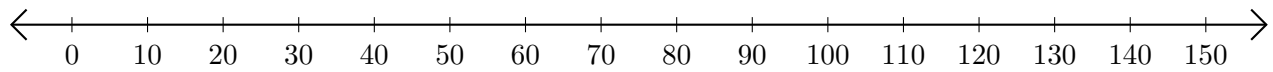
2. $100 + 30 = \underline{\hspace{2cm}}$



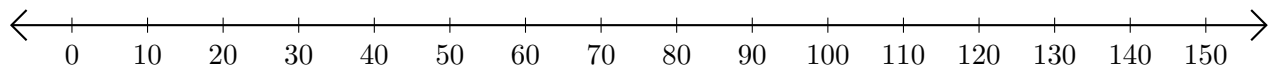
3. $90 + 60 = \underline{\hspace{2cm}}$



4. $50 + 50 = \underline{\hspace{2cm}}$



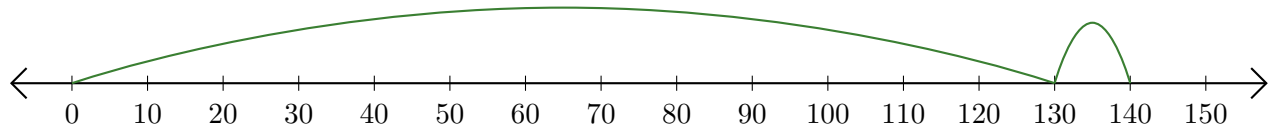
5. $110 + 20 = \underline{\hspace{2cm}}$



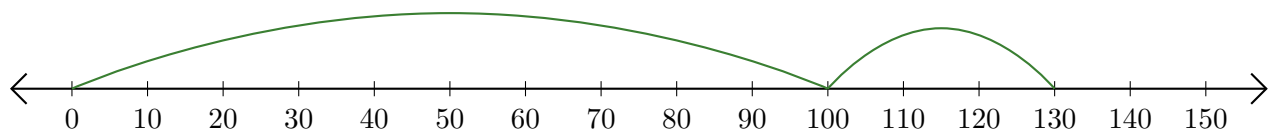
Sumar en Rectas Numéricas (B) Respuestas

Use las rectas numéricas para calcular cada suma.

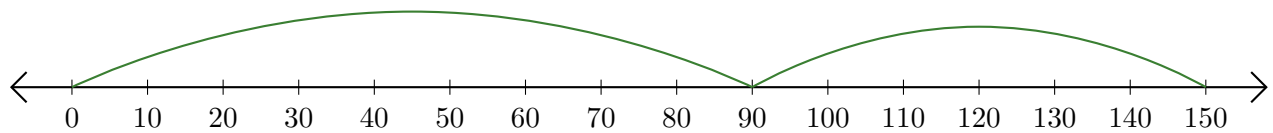
1. $130 + 10 = \underline{140}$



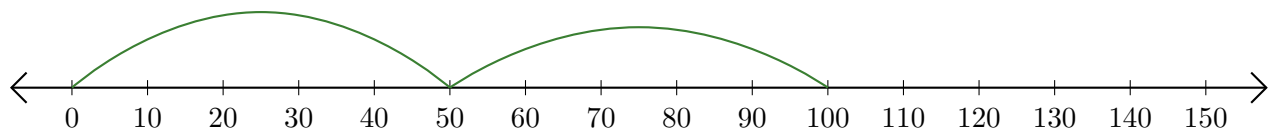
2. $100 + 30 = \underline{130}$



3. $90 + 60 = \underline{150}$



4. $50 + 50 = \underline{100}$



5. $110 + 20 = \underline{130}$

