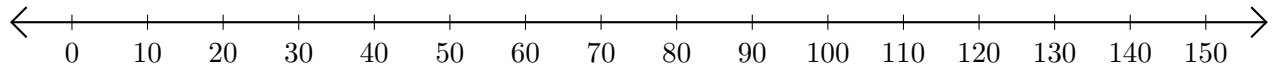


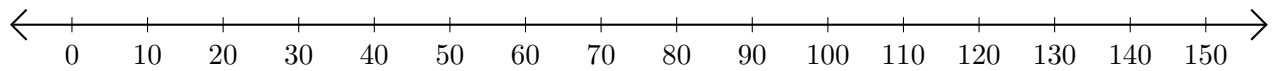
Sumar en Rectas Numéricas (C)

Use las rectas numéricas para calcular cada suma.

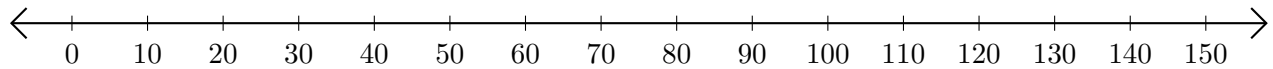
1. $100 + 40 = \underline{\hspace{2cm}}$



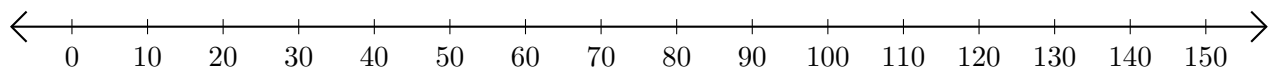
2. $110 + 10 = \underline{\hspace{2cm}}$



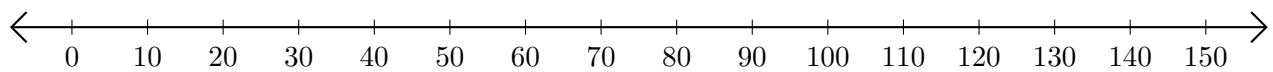
3. $50 + 40 = \underline{\hspace{2cm}}$



4. $60 + 30 = \underline{\hspace{2cm}}$



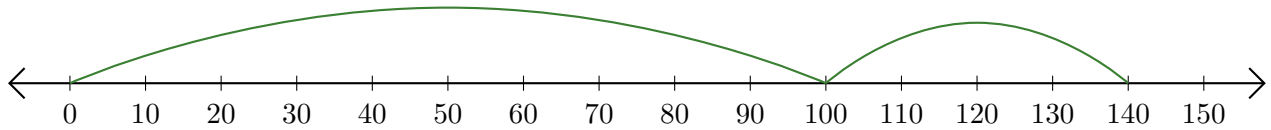
5. $10 + 40 = \underline{\hspace{2cm}}$



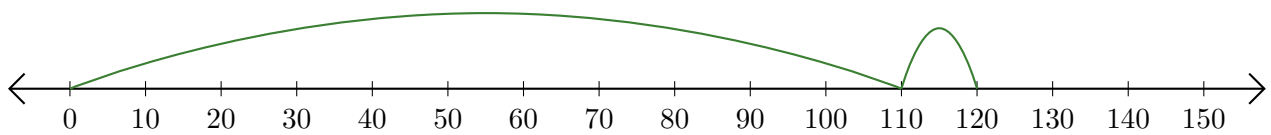
Sumar en Rectas Numéricas (C) Respuestas

Use las rectas numéricas para calcular cada suma.

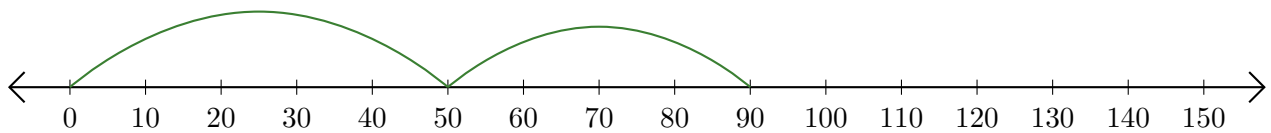
1. $100 + 40 = \underline{140}$



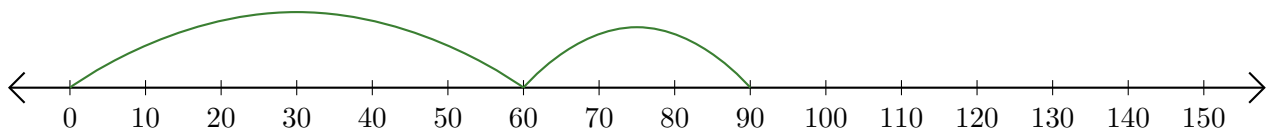
2. $110 + 10 = \underline{120}$



3. $50 + 40 = \underline{90}$



4. $60 + 30 = \underline{90}$



5. $10 + 40 = \underline{50}$

