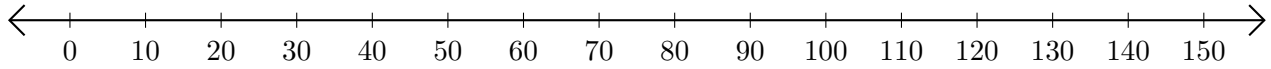


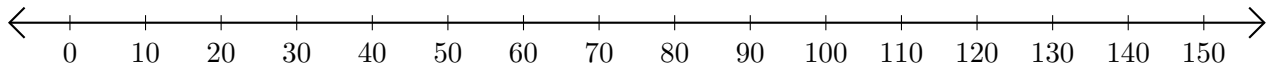
## Sumar en Rectas Numéricas (D)

Use las rectas numéricas para calcular cada suma.

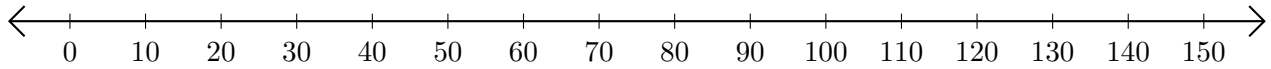
1.  $70 + 40 = \underline{\hspace{2cm}}$



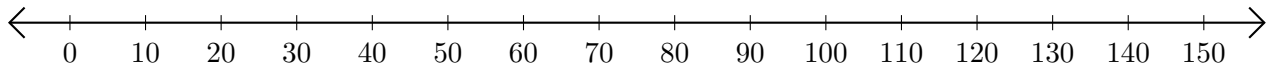
2.  $50 + 70 = \underline{\hspace{2cm}}$



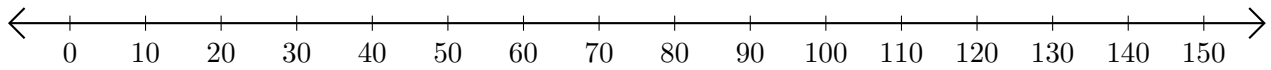
3.  $110 + 20 = \underline{\hspace{2cm}}$



4.  $30 + 90 = \underline{\hspace{2cm}}$



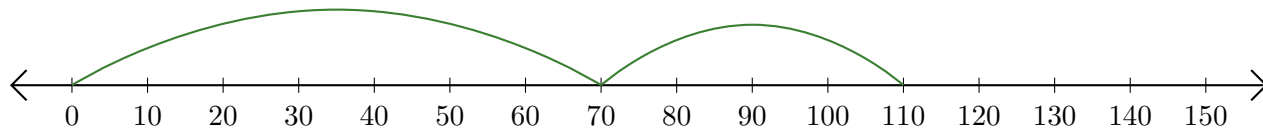
5.  $80 + 70 = \underline{\hspace{2cm}}$



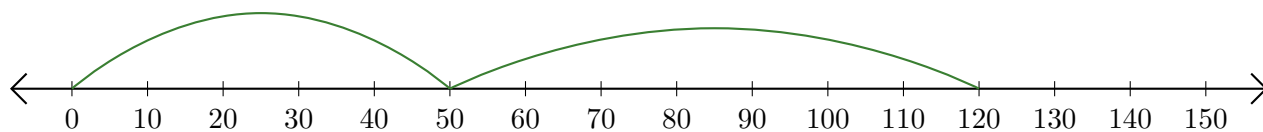
## Sumar en Rectas Numéricas (D) Respuestas

Use las rectas numéricas para calcular cada suma.

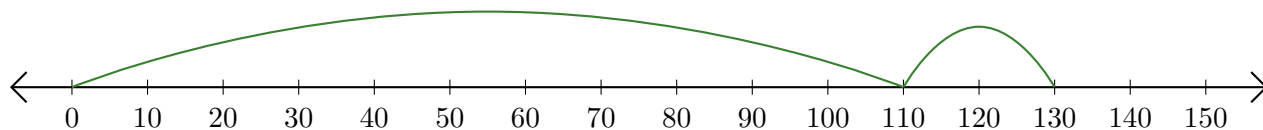
1.  $70 + 40 = \underline{110}$



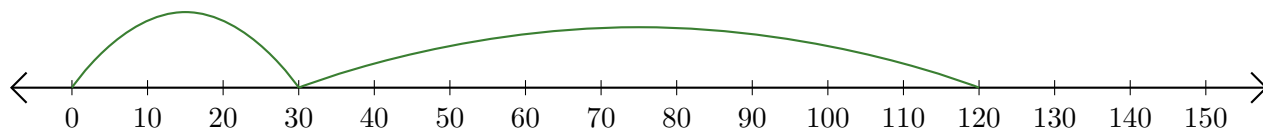
2.  $50 + 70 = \underline{120}$



3.  $110 + 20 = \underline{130}$



4.  $30 + 90 = \underline{120}$



5.  $80 + 70 = \underline{150}$

