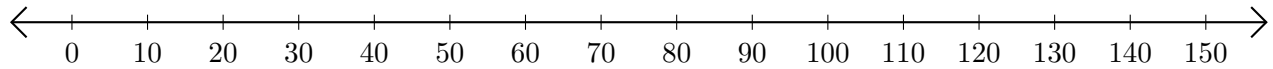


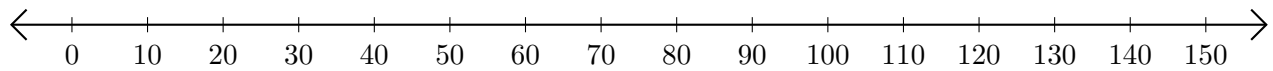
Sumar en Rectas Numéricas (G)

Use las rectas numéricas para calcular cada suma.

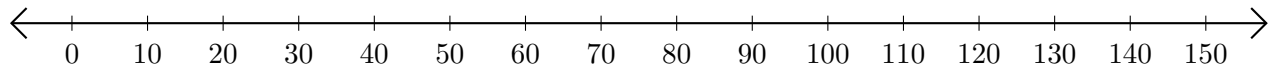
1. $80 + 40 = \underline{\hspace{2cm}}$



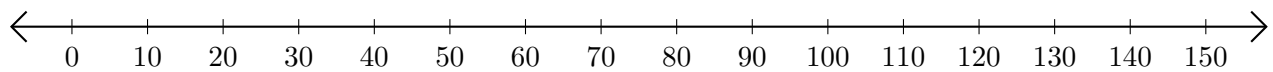
2. $60 + 70 = \underline{\hspace{2cm}}$



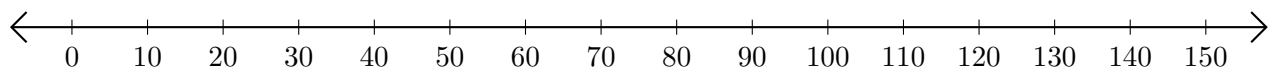
3. $90 + 30 = \underline{\hspace{2cm}}$



4. $120 + 20 = \underline{\hspace{2cm}}$



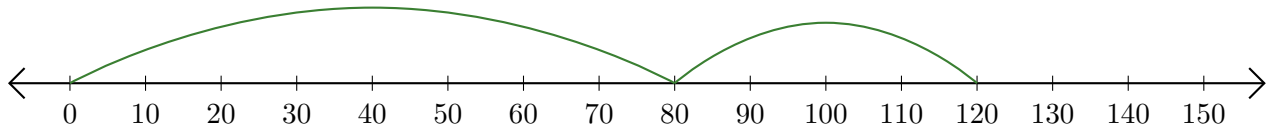
5. $100 + 40 = \underline{\hspace{2cm}}$



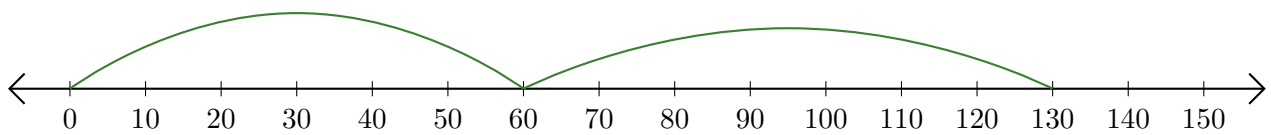
Sumar en Rectas Numéricas (G) Respuestas

Use las rectas numéricas para calcular cada suma.

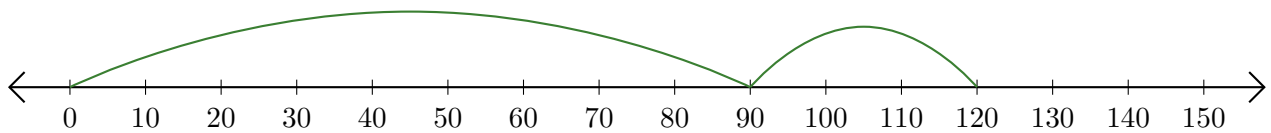
1. $80 + 40 = \underline{120}$



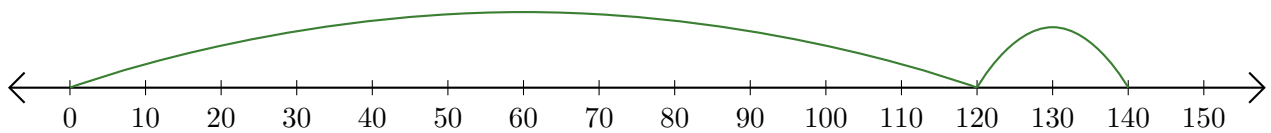
2. $60 + 70 = \underline{130}$



3. $90 + 30 = \underline{120}$



4. $120 + 20 = \underline{140}$



5. $100 + 40 = \underline{140}$

