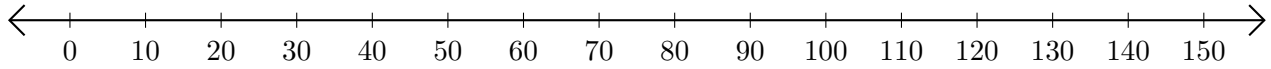


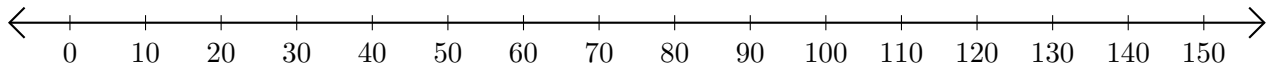
# Sumar en Rectas Numéricas (I)

Use las rectas numéricas para calcular cada suma.

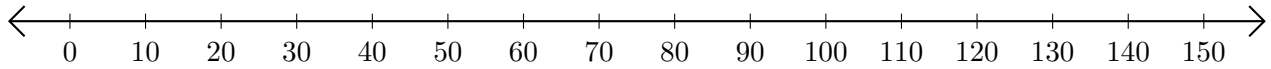
1.  $70 + 80 = \underline{\hspace{2cm}}$



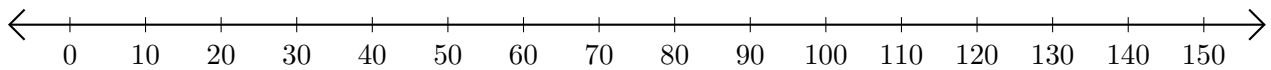
2.  $50 + 70 = \underline{\hspace{2cm}}$



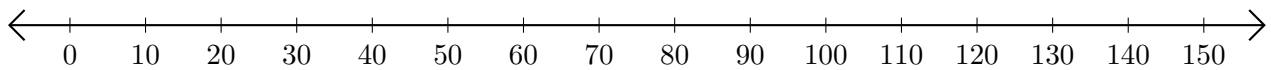
3.  $100 + 40 = \underline{\hspace{2cm}}$



4.  $130 + 10 = \underline{\hspace{2cm}}$



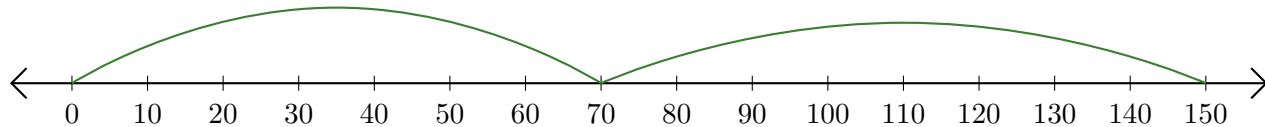
5.  $120 + 10 = \underline{\hspace{2cm}}$



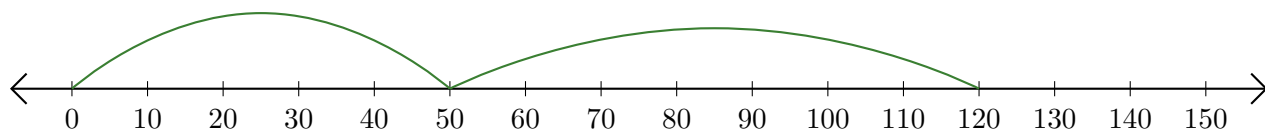
# Sumar en Rectas Numéricas (I) Respuestas

Use las rectas numéricas para calcular cada suma.

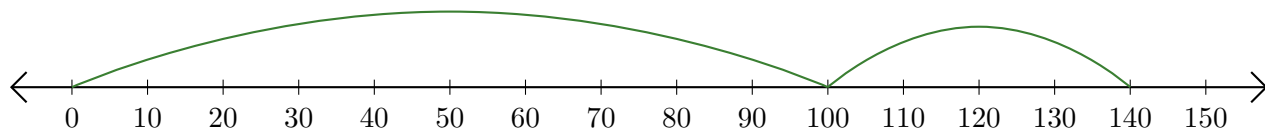
1.  $70 + 80 = \underline{150}$



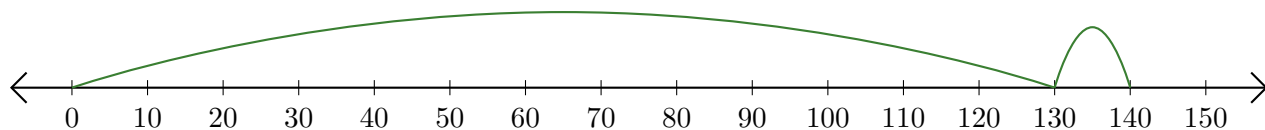
2.  $50 + 70 = \underline{120}$



3.  $100 + 40 = \underline{140}$



4.  $130 + 10 = \underline{140}$



5.  $120 + 10 = \underline{130}$

