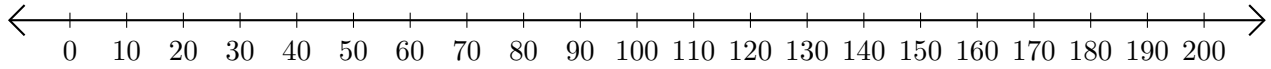


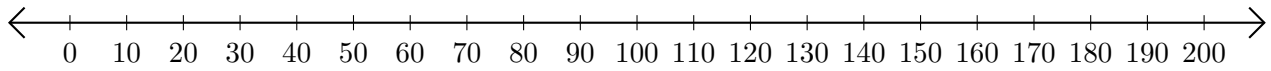
Sumar en Rectas Numéricas (C)

Use las rectas numéricas para calcular cada suma.

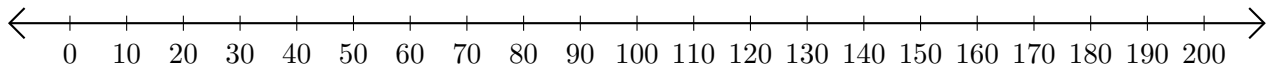
1. $180 + 10 = \underline{\hspace{2cm}}$



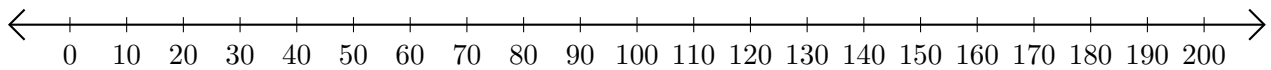
2. $60 + 20 = \underline{\hspace{2cm}}$



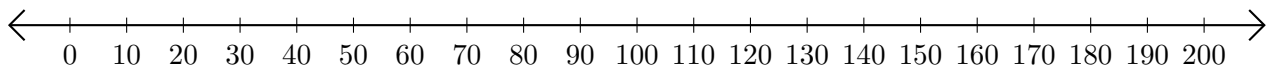
3. $10 + 40 = \underline{\hspace{2cm}}$



4. $160 + 40 = \underline{\hspace{2cm}}$



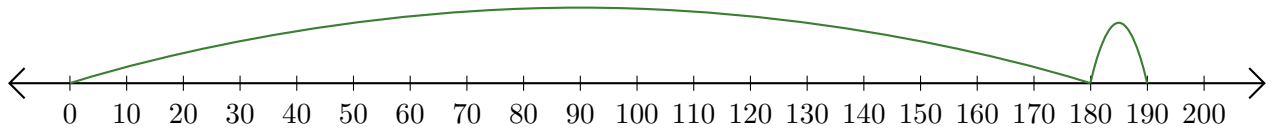
5. $40 + 130 = \underline{\hspace{2cm}}$



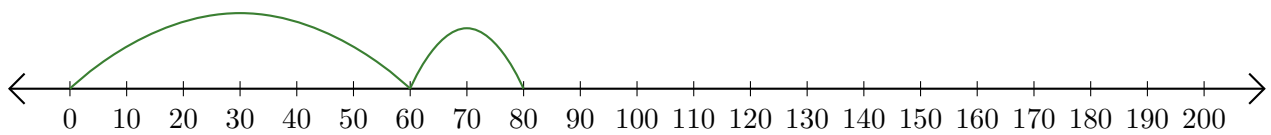
Sumar en Rectas Numéricas (C) Respuestas

Use las rectas numéricas para calcular cada suma.


1. $180 + 10 = \underline{190}$



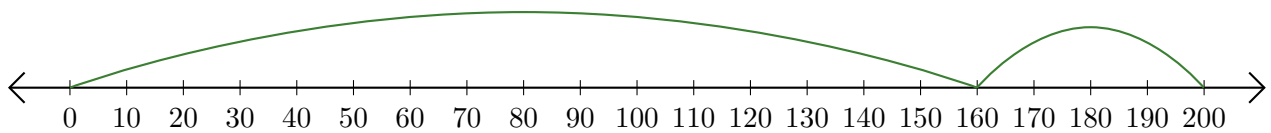
2. $60 + 20 = \underline{80}$



3. $10 + 40 = \underline{50}$



4. $160 + 40 = \underline{200}$



5. $40 + 130 = \underline{170}$

