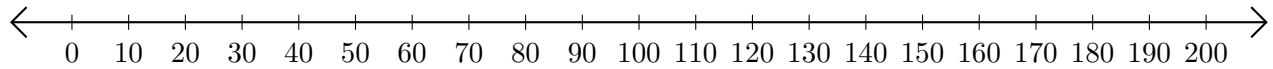


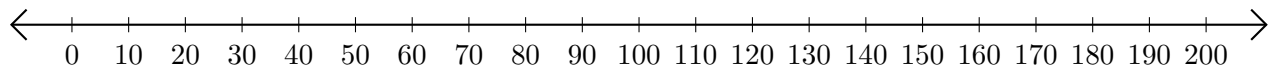
Sumar en Rectas Numéricas (E)

Use las rectas numéricas para calcular cada suma.

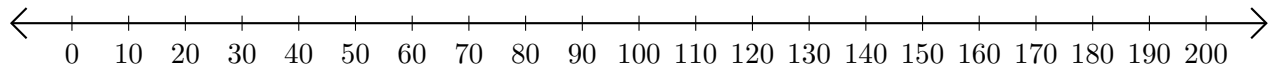
1. $40 + 120 = \underline{\hspace{2cm}}$



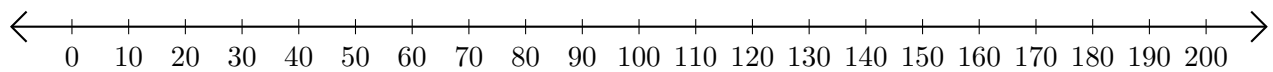
2. $90 + 80 = \underline{\hspace{2cm}}$



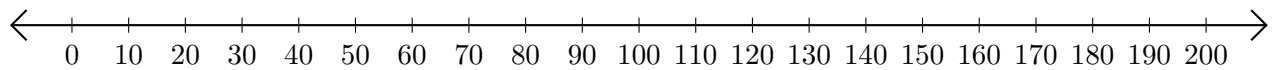
3. $130 + 20 = \underline{\hspace{2cm}}$



4. $120 + 30 = \underline{\hspace{2cm}}$



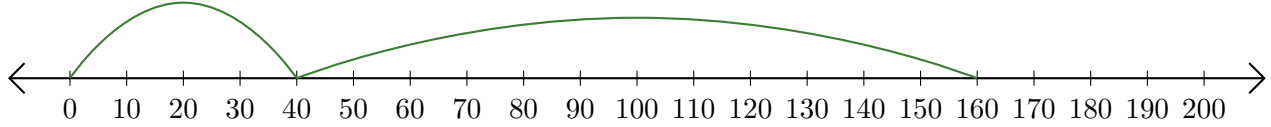
5. $160 + 30 = \underline{\hspace{2cm}}$



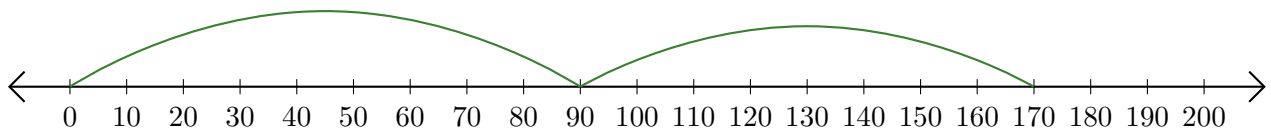
Sumar en Rectas Numéricas (E) Respuestas

Use las rectas numéricas para calcular cada suma.

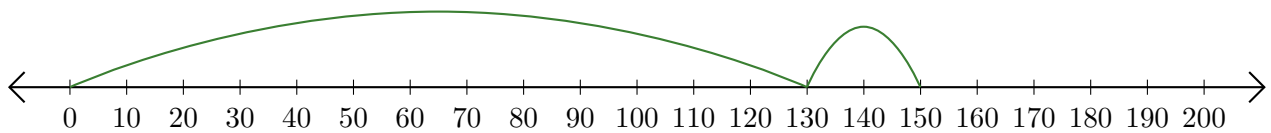
1. $40 + 120 = \underline{160}$



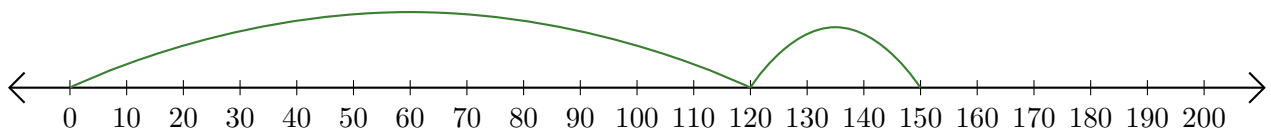
2. $90 + 80 = \underline{170}$



3. $130 + 20 = \underline{150}$



4. $120 + 30 = \underline{150}$



5. $160 + 30 = \underline{190}$

