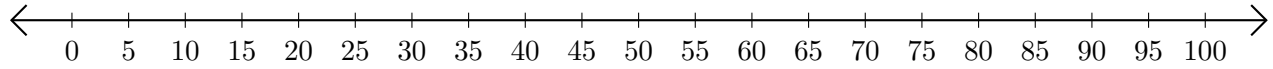


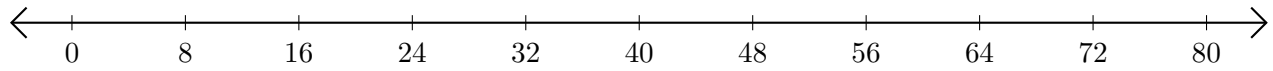
Sumar en Rectas Numéricas (B)

Use las rectas numéricas para calcular cada suma.

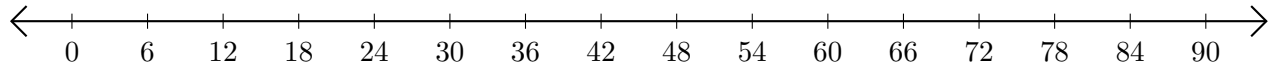
1. $95 + 5 = \underline{\quad}$



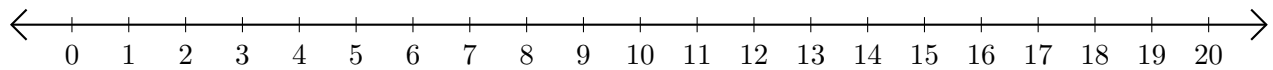
2. $16 + 8 = \underline{\quad}$



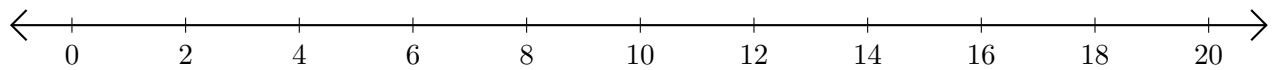
3. $54 + 12 = \underline{\quad}$



4. $9 + 2 = \underline{\quad}$



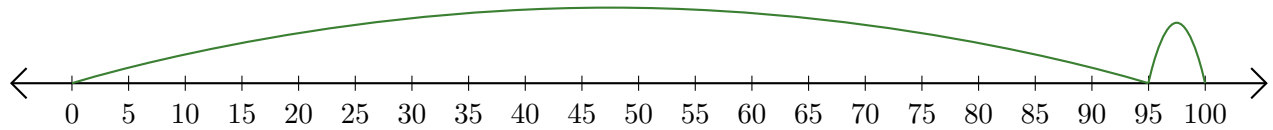
5. $8 + 6 = \underline{\quad}$



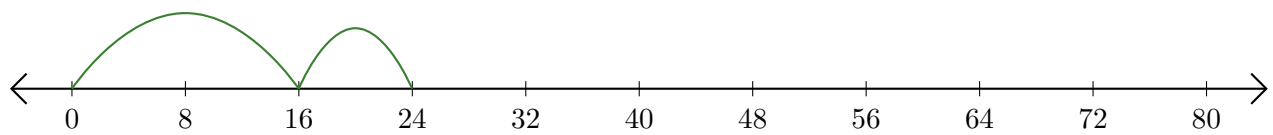
Sumar en Rectas Numéricas (B) Respuestas

Use las rectas numéricas para calcular cada suma.

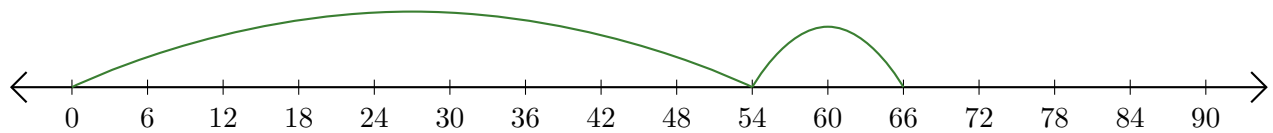
1. $95 + 5 = \underline{100}$



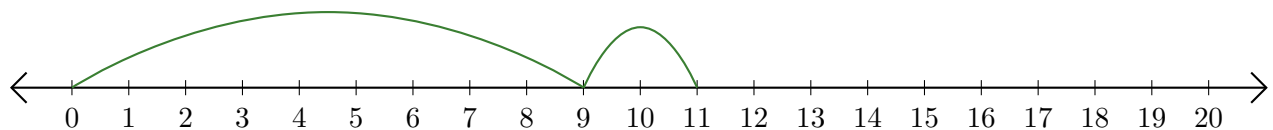
2. $16 + 8 = \underline{24}$



3. $54 + 12 = \underline{66}$



4. $9 + 2 = \underline{11}$



5. $8 + 6 = \underline{14}$

