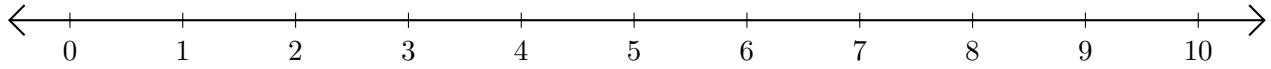


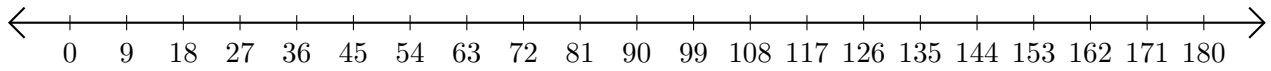
# Sumar en Rectas Numéricas (C)

Use las rectas numéricas para calcular cada suma.

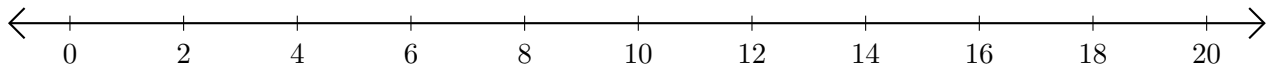
1.  $6 + 2 = \underline{\quad}$



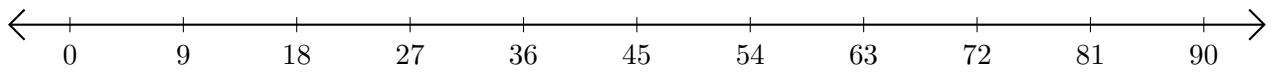
2.  $27 + 99 = \underline{\quad}$



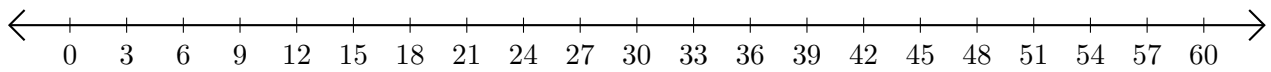
3.  $2 + 12 = \underline{\quad}$



4.  $72 + 9 = \underline{\quad}$



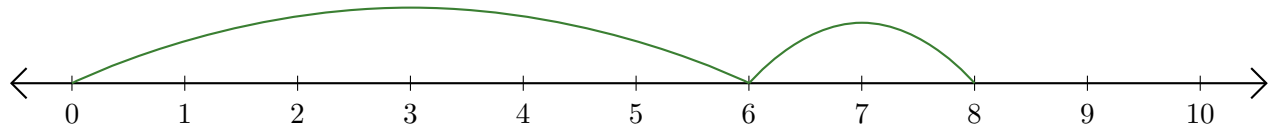
5.  $24 + 12 = \underline{\quad}$



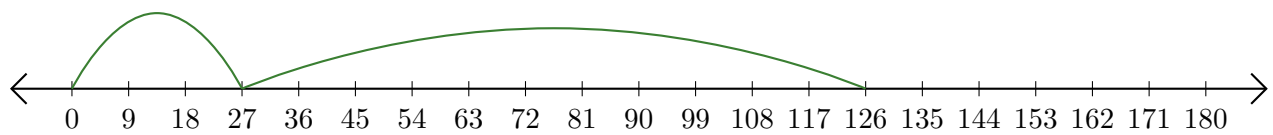
# Sumar en Rectas Numéricas (C) Respuestas

Use las rectas numéricas para calcular cada suma.

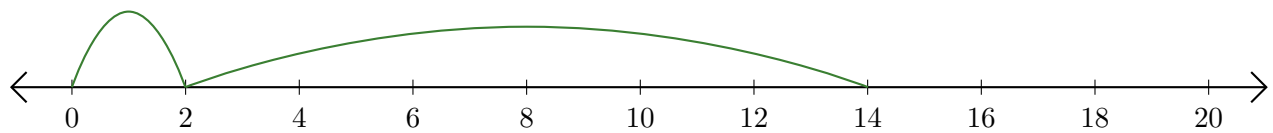
1.  $6 + 2 = \underline{8}$



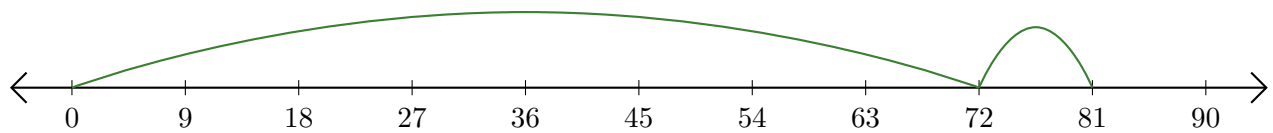
2.  $27 + 99 = \underline{126}$



3.  $2 + 12 = \underline{14}$



4.  $72 + 9 = \underline{81}$



5.  $24 + 12 = \underline{36}$

