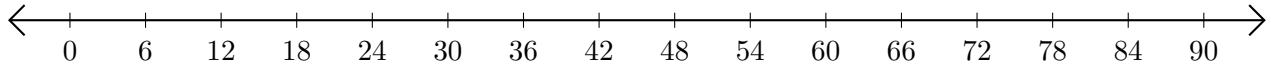


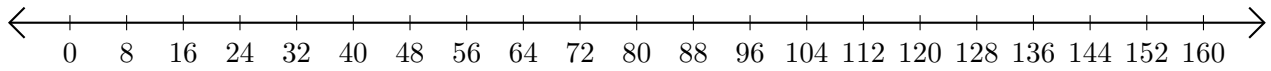
Sumar en Rectas Numéricas (D)

Use las rectas numéricas para calcular cada suma.

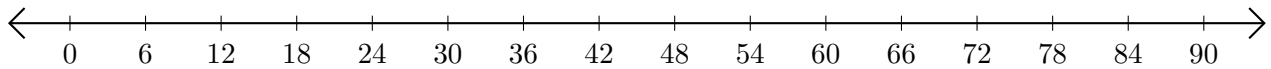
1. $66 + 6 = \underline{\quad}$



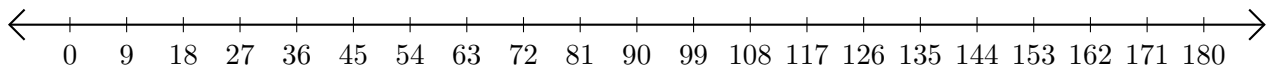
2. $32 + 96 = \underline{\quad}$



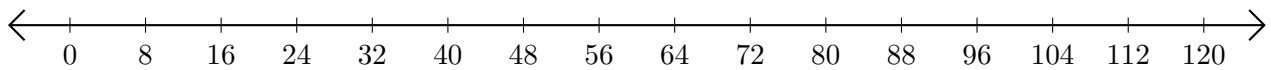
3. $42 + 12 = \underline{\quad}$



4. $63 + 45 = \underline{\quad}$



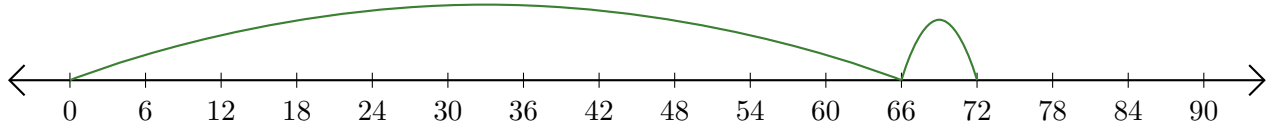
5. $112 + 8 = \underline{\quad}$



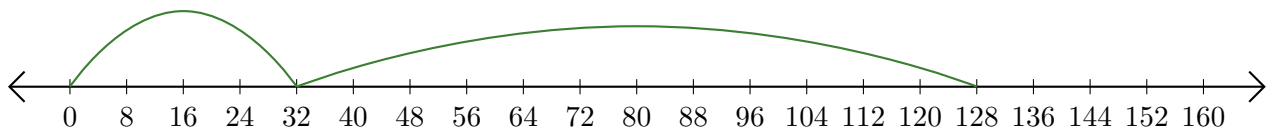
Sumar en Rectas Numéricas (D) Respuestas

Use las rectas numéricas para calcular cada suma.

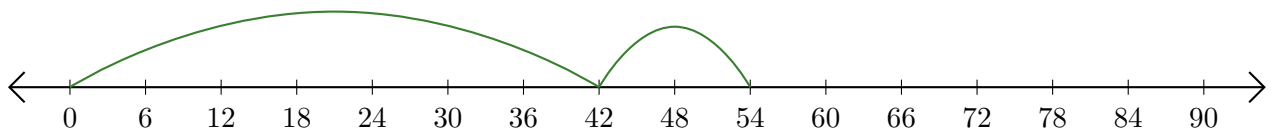
1. $66 + 6 = \underline{72}$



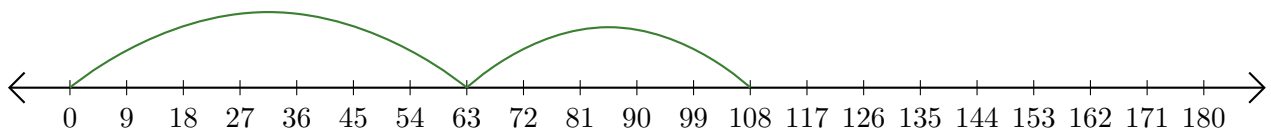
2. $32 + 96 = \underline{128}$



3. $42 + 12 = \underline{54}$



4. $63 + 45 = \underline{108}$



5. $112 + 8 = \underline{120}$

