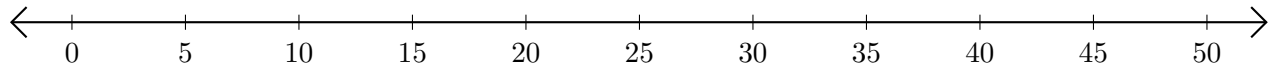


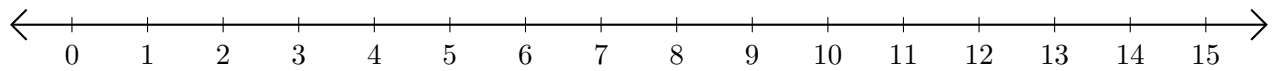
Sumar en Rectas Numéricas (E)

Use las rectas numéricas para calcular cada suma.

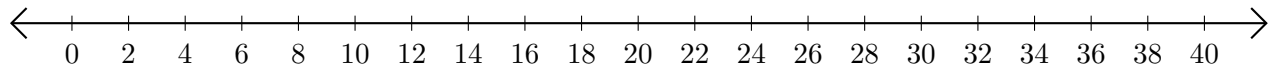
1. $35 + 15 = \underline{\quad}$



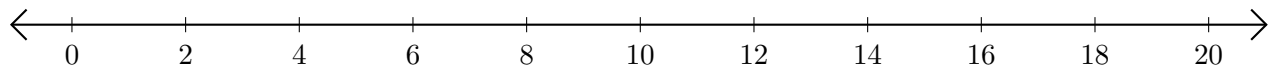
2. $6 + 6 = \underline{\quad}$



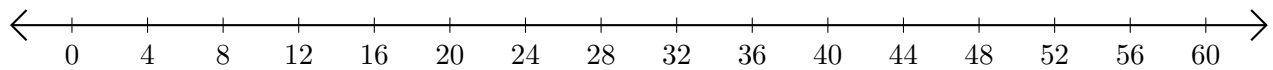
3. $28 + 2 = \underline{\quad}$



4. $10 + 8 = \underline{\quad}$



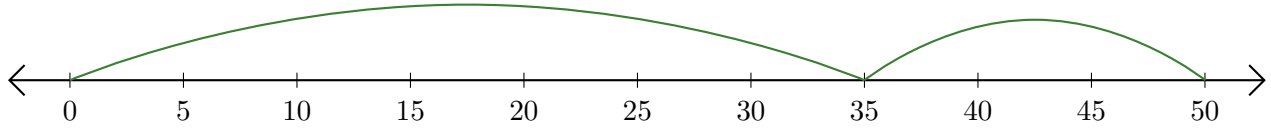
5. $52 + 8 = \underline{\quad}$



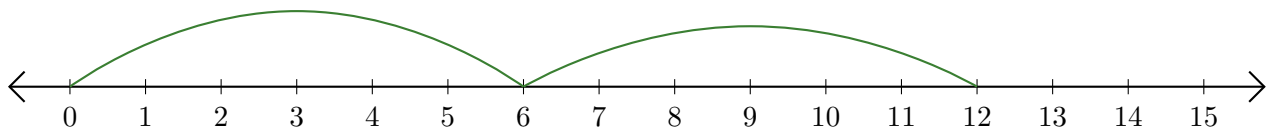
Sumar en Rectas Numéricas (E) Respuestas

Use las rectas numéricas para calcular cada suma.

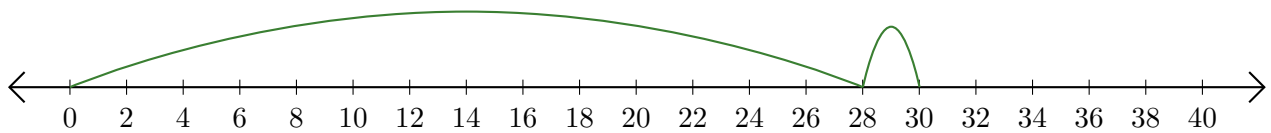
1. $35 + 15 = \underline{50}$



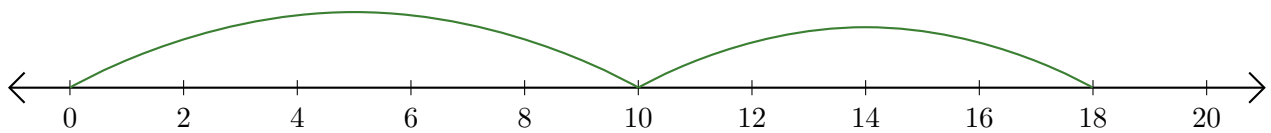
2. $6 + 6 = \underline{12}$



3. $28 + 2 = \underline{30}$



4. $10 + 8 = \underline{18}$



5. $52 + 8 = \underline{60}$

