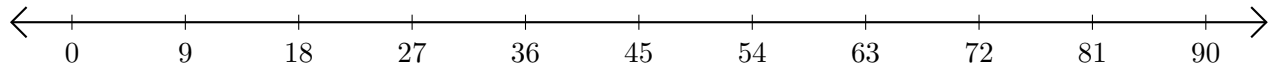


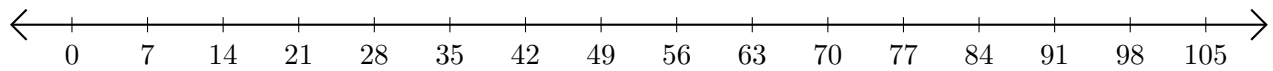
Sumar en Rectas Numéricas (F)

Use las rectas numéricas para calcular cada suma.

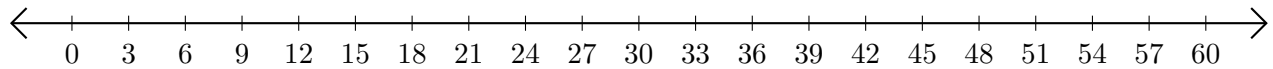
1. $18 + 72 = \underline{\quad}$



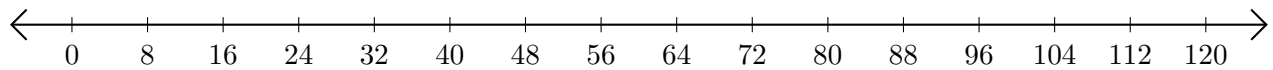
2. $14 + 21 = \underline{\quad}$



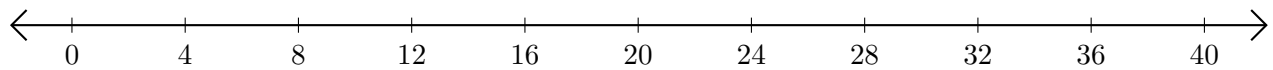
3. $45 + 9 = \underline{\quad}$



4. $64 + 24 = \underline{\quad}$



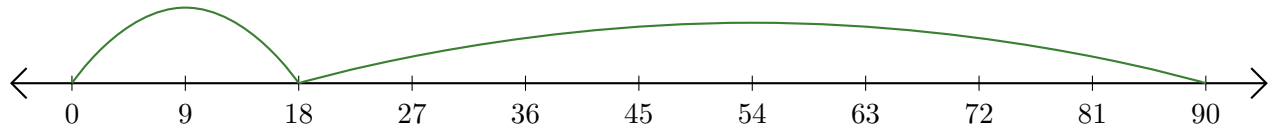
5. $20 + 8 = \underline{\quad}$



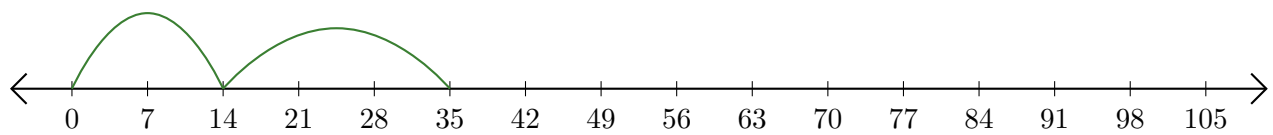
Sumar en Rectas Numéricas (F) Respuestas

Use las rectas numéricas para calcular cada suma.

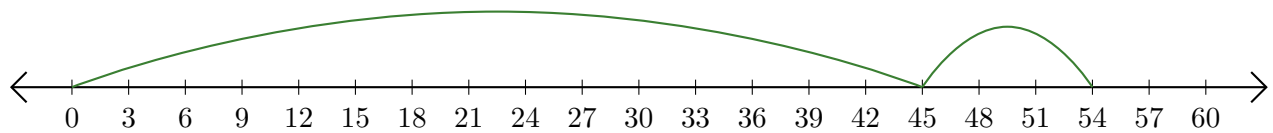
1. $18 + 72 = \underline{90}$



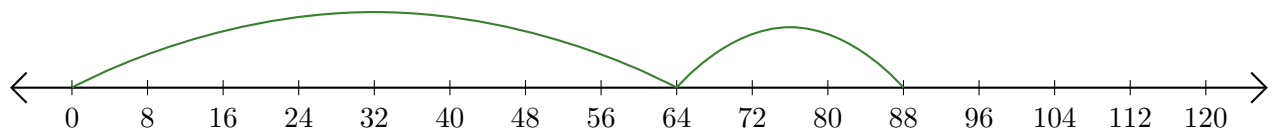
2. $14 + 21 = \underline{35}$



3. $45 + 9 = \underline{54}$



4. $64 + 24 = \underline{88}$



5. $20 + 8 = \underline{28}$

