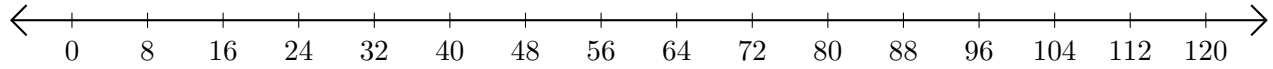


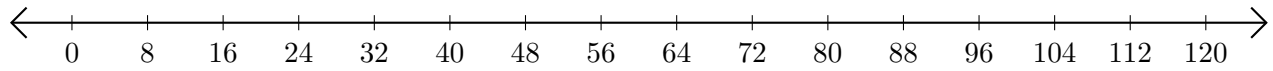
Sumar en Rectas Numéricas (G)

Use las rectas numéricas para calcular cada suma.

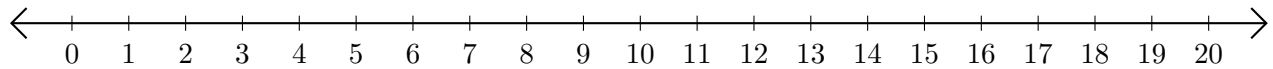
1. $8 + 96 = \underline{\quad}$



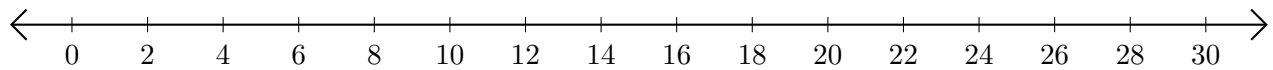
2. $80 + 24 = \underline{\quad}$



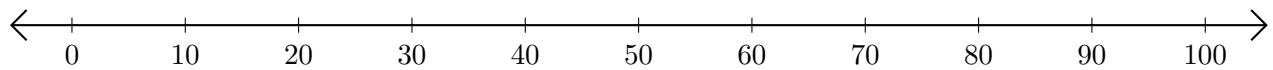
3. $14 + 4 = \underline{\quad}$



4. $22 + 8 = \underline{\quad}$



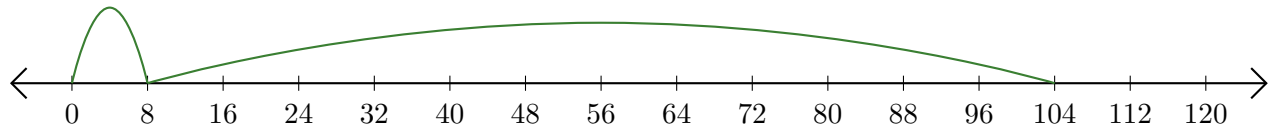
5. $20 + 70 = \underline{\quad}$



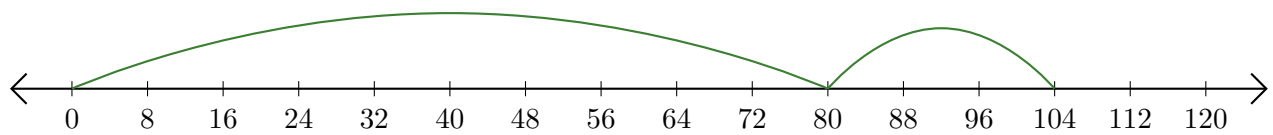
Sumar en Rectas Numéricas (G) Respuestas

Use las rectas numéricas para calcular cada suma.

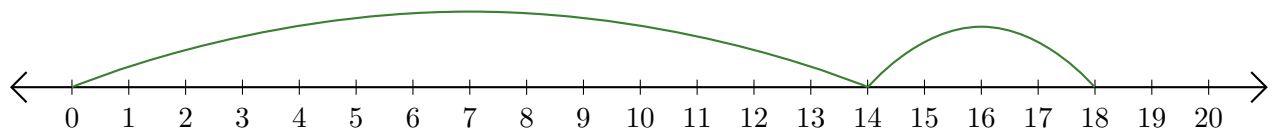
1. $8 + 96 = \underline{104}$



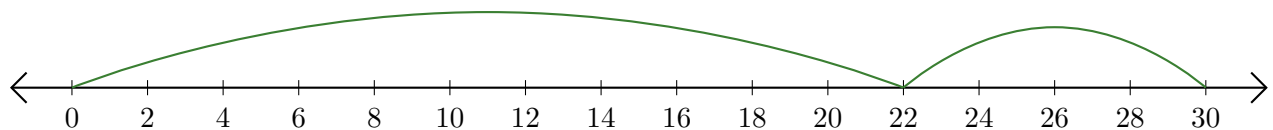
2. $80 + 24 = \underline{104}$



3. $14 + 4 = \underline{18}$



4. $22 + 8 = \underline{30}$



5. $20 + 70 = \underline{90}$

