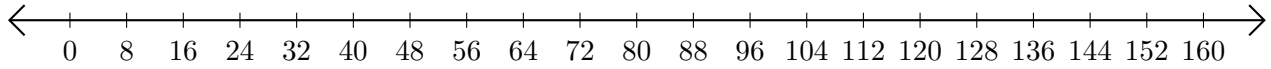


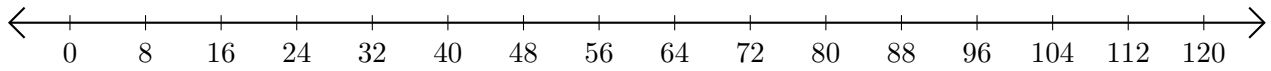
Sumar en Rectas Numéricas (H)

Use las rectas numéricas para calcular cada suma.

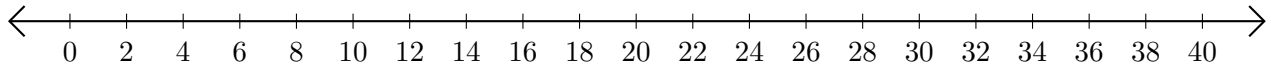
1. $72 + 80 = \underline{\hspace{2cm}}$



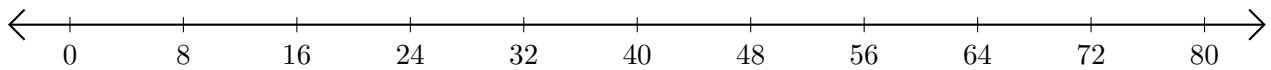
2. $56 + 32 = \underline{\hspace{2cm}}$



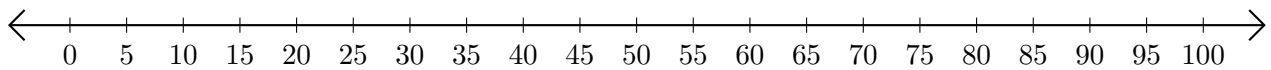
3. $10 + 16 = \underline{\hspace{2cm}}$



4. $24 + 56 = \underline{\hspace{2cm}}$



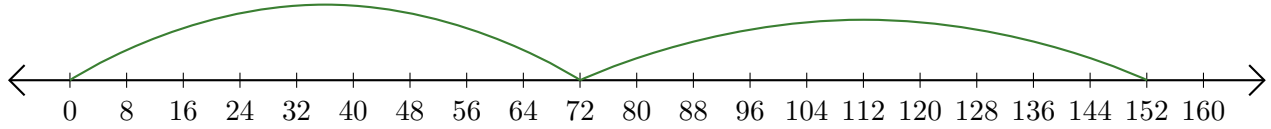
5. $70 + 10 = \underline{\hspace{2cm}}$



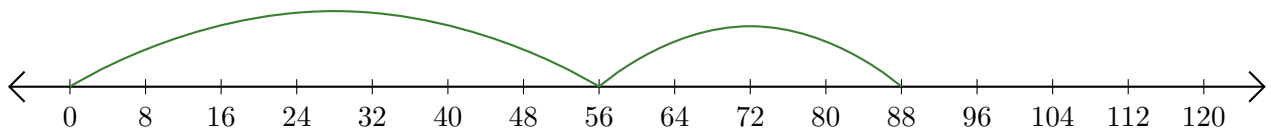
Sumar en Rectas Numéricas (H) Respuestas

Use las rectas numéricas para calcular cada suma.

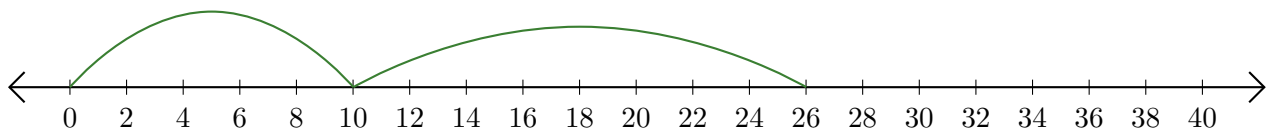
1. $72 + 80 = \underline{152}$



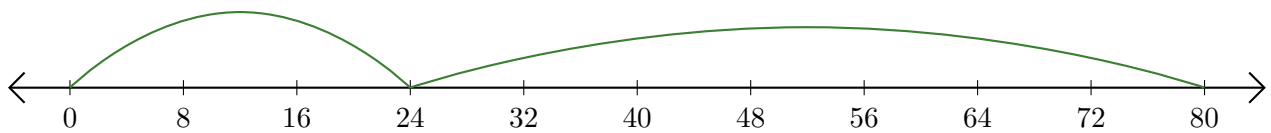
2. $56 + 32 = \underline{88}$



3. $10 + 16 = \underline{26}$



4. $24 + 56 = \underline{80}$



5. $70 + 10 = \underline{80}$

